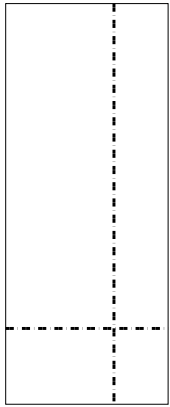





Usar la matriz proporcionada para resolver cada problema.


1) $37 \times 15 =$




2) $37 \times 26 =$




3) $33 \times 44 =$




4) $38 \times 19 =$



5) $35 \times 15 =$



6) $33 \times 26 =$



Respuestas

1. _____

2. _____

3. _____

4. _____

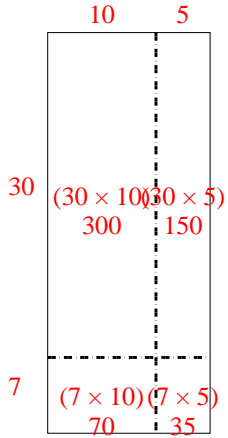
5. _____

6. _____

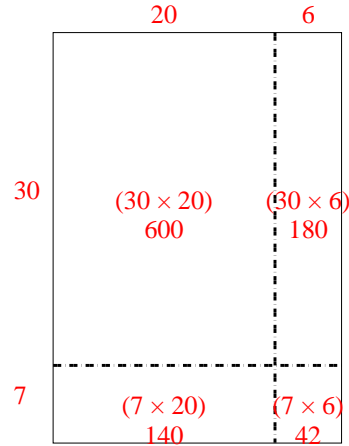


Usar la matriz proporcionada para resolver cada problema.

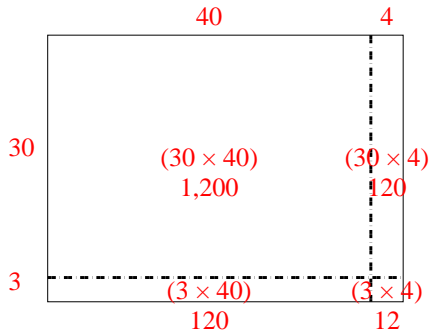
1) $37 \times 15 =$



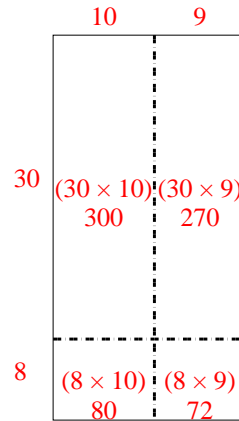
2) $37 \times 26 =$



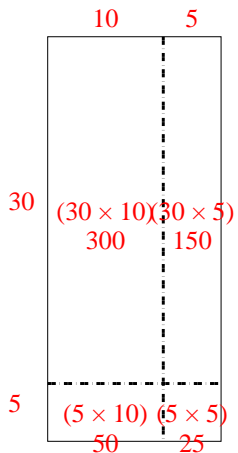
3) $33 \times 44 =$



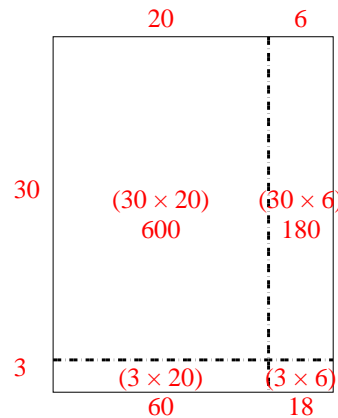
4) $38 \times 19 =$



5) $35 \times 15 =$



6) $33 \times 26 =$



Respuestas

1. 555
2. 962
3. 1,452
4. 722
5. 525
6. 858