





Usar la matriz proporcionada para resolver cada problema.


1) $62 \times 75 =$




2) $75 \times 57 =$




3) $32 \times 37 =$




4) $33 \times 48 =$



5) $45 \times 33 =$



6) $48 \times 57 =$



Respuestas

1. _____

2. _____

3. _____

4. _____

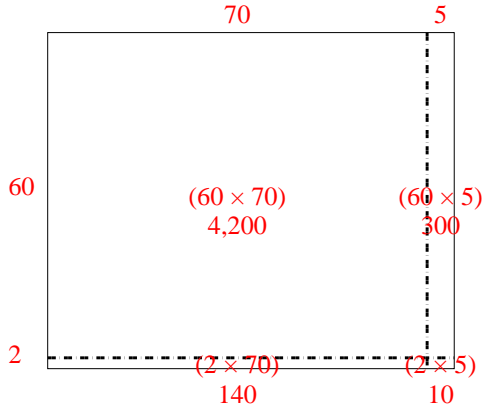
5. _____

6. _____

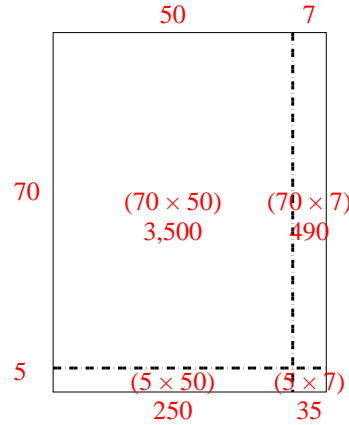


Usar la matriz proporcionada para resolver cada problema.

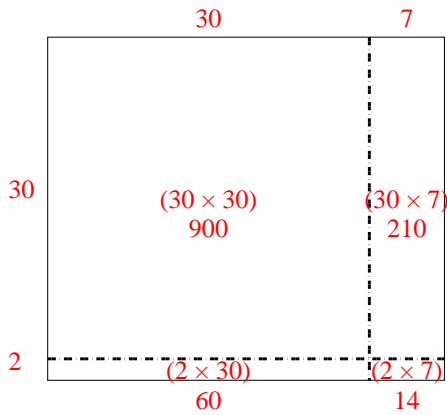
1) $62 \times 75 =$



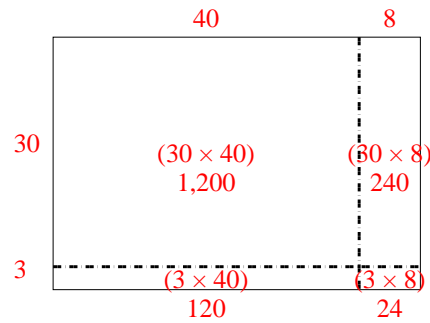
2) $75 \times 57 =$



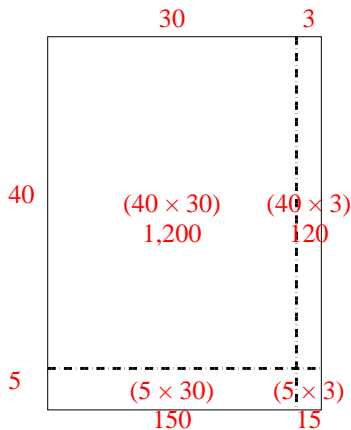
3) $32 \times 37 =$



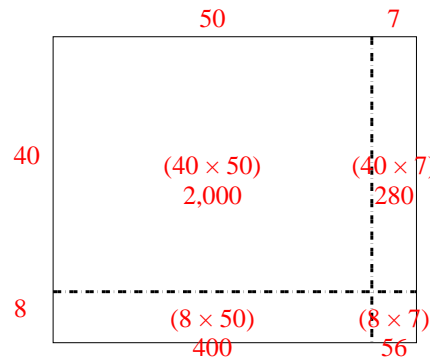
4) $33 \times 48 =$



5) $45 \times 33 =$



6) $48 \times 57 =$



Respuestas

1. 4,650
2. 4,275
3. 1,184
4. 1,584
5. 1,485
6. 2,736