





Usar la matriz proporcionada para resolver cada problema.


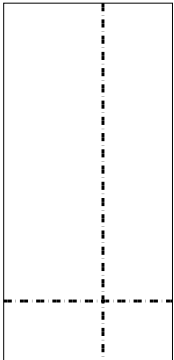
1) $43 \times 26 =$

2) $37 \times 28 =$





3) $36 \times 17 =$

4) $34 \times 55 =$



5) $57 \times 65 =$

6) $59 \times 69 =$



Respuestas

1. _____

2. _____

3. _____

4. _____

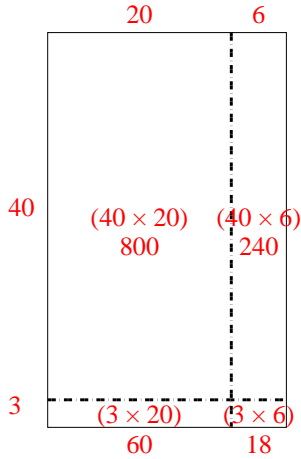
5. _____

6. _____

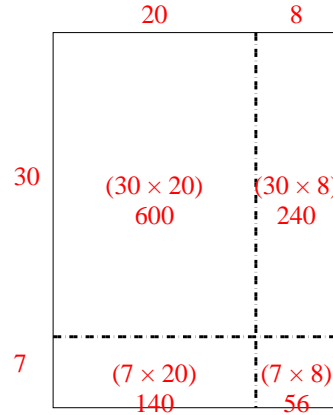


Usar la matriz proporcionada para resolver cada problema.

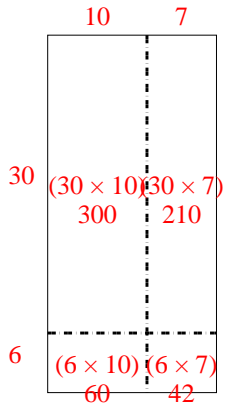
1) $43 \times 26 =$



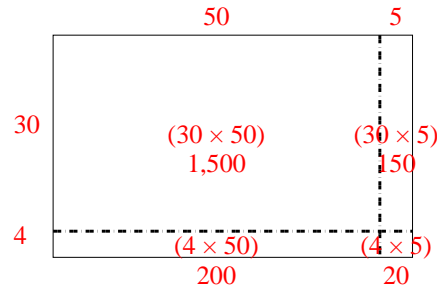
2) $37 \times 28 =$



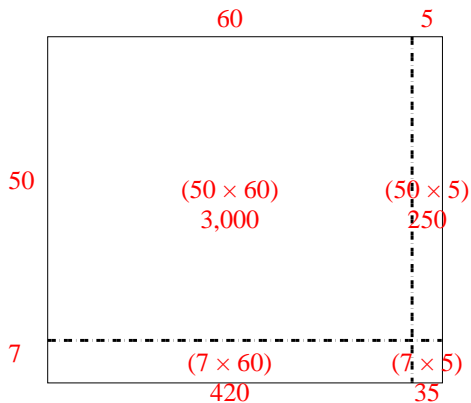
3) $36 \times 17 =$



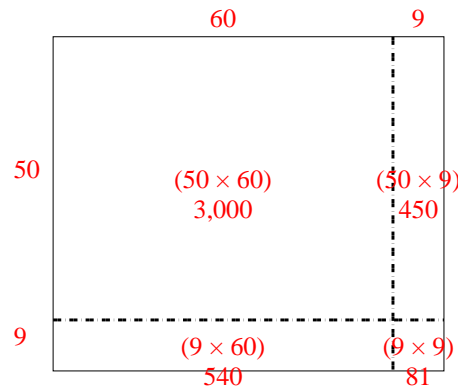
4) $34 \times 55 =$



5) $57 \times 65 =$



6) $59 \times 69 =$



Respuestas

1. 1,118
2. 1,036
3. 612
4. 1,870
5. 3,705
6. 4,071