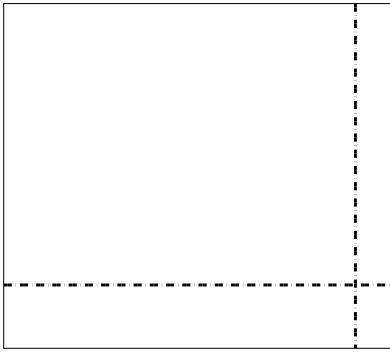


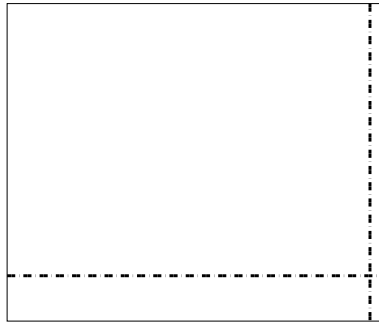


Usar la matriz proporcionada para resolver cada problema.

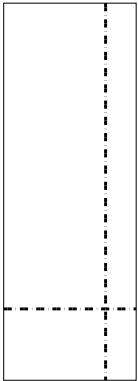
1) $49 \times 55 =$




2) $35 \times 42 =$



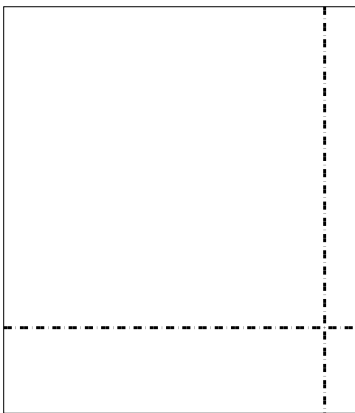
3) $37 \times 13 =$




4) $39 \times 27 =$



5) $38 \times 33 =$



6) $36 \times 24 =$



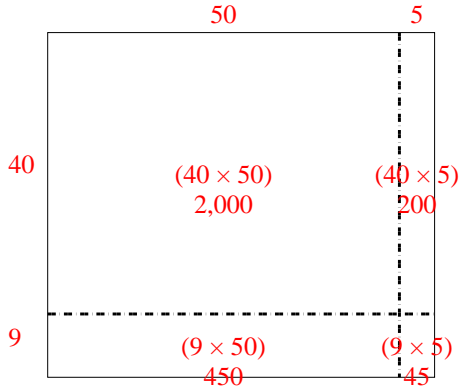
Respuestas

- 1. _____
- 2. _____
- 3. _____
- 4. _____
- 5. _____
- 6. _____

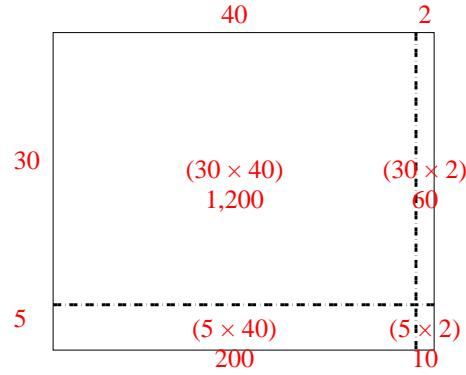


Usar la matriz proporcionada para resolver cada problema.

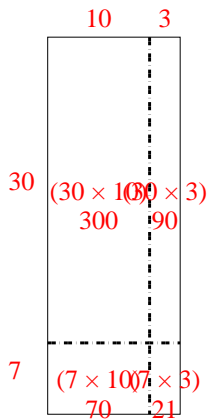
1) $49 \times 55 =$



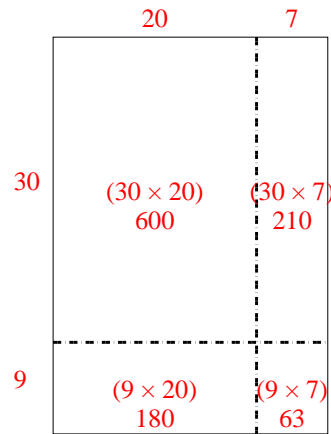
2) $35 \times 42 =$



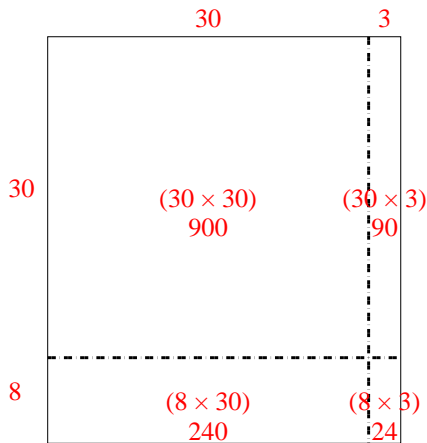
3) $37 \times 13 =$



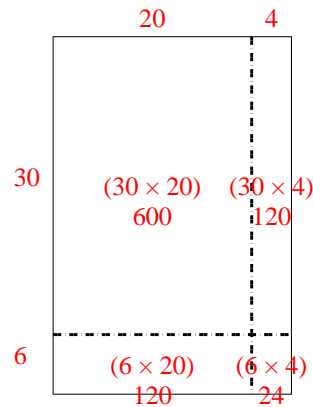
4) $39 \times 27 =$



5) $38 \times 33 =$



6) $36 \times 24 =$



Respuestas

1. 2,695

2. 1,470

3. 481

4. 1,053

5. 1,254

6. 864