


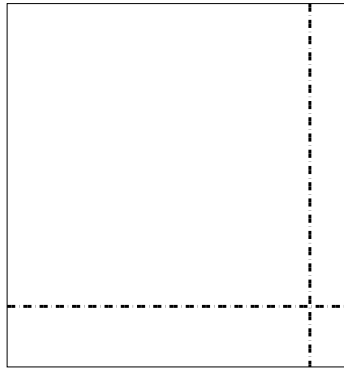


Usar la matriz proporcionada para resolver cada problema.

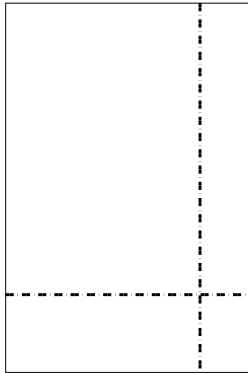
1) $48 \times 29 =$




2) $36 \times 34 =$



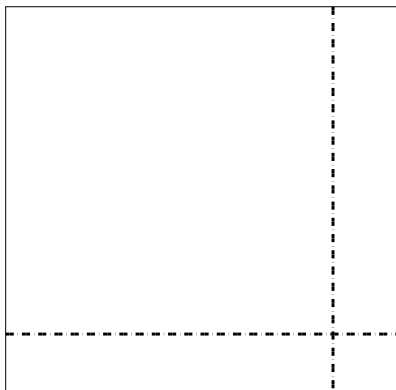
3) $38 \times 25 =$




4) $33 \times 48 =$



5) $47 \times 48 =$



6) $43 \times 29 =$



Respuestas

1. _____

2. _____

3. _____

4. _____

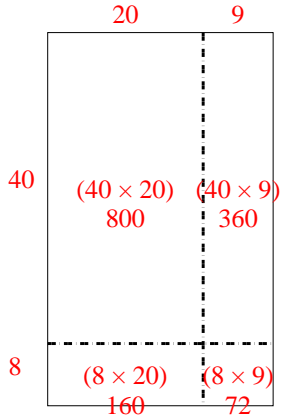
5. _____

6. _____

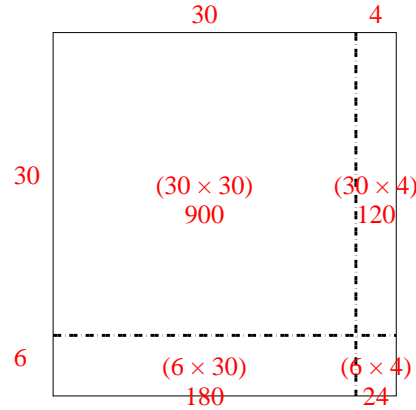


Usar la matriz proporcionada para resolver cada problema.

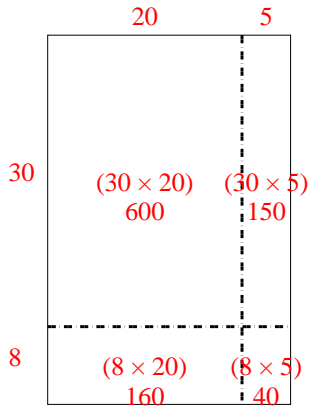
1) $48 \times 29 =$



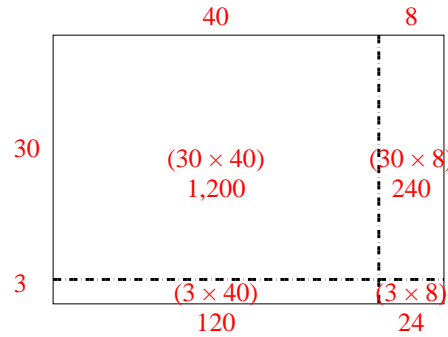
2) $36 \times 34 =$



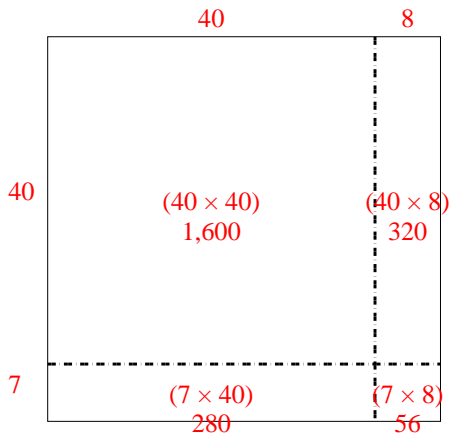
3) $38 \times 25 =$



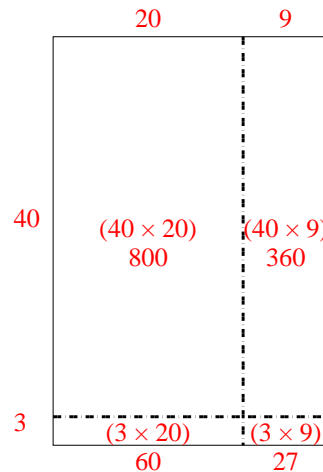
4) $33 \times 48 =$



5) $47 \times 48 =$



6) $43 \times 29 =$



Respuestas

1. 1,392

2. 1,224

3. 950

4. 1,584

5. 2,256

6. 1,247