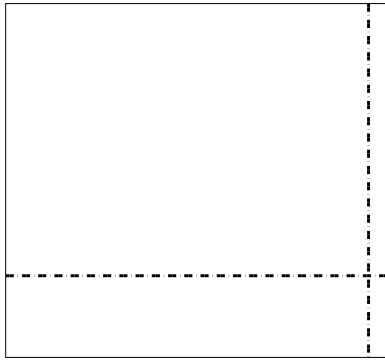





Usar la matriz proporcionada para resolver cada problema.

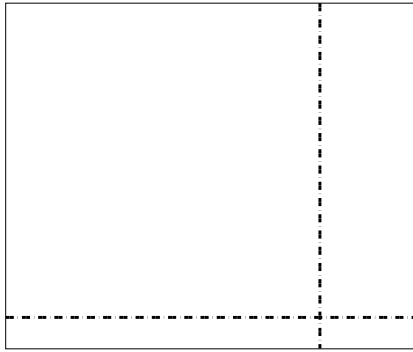
1)  $39 \times 42 =$




2)  $33 \times 17 =$



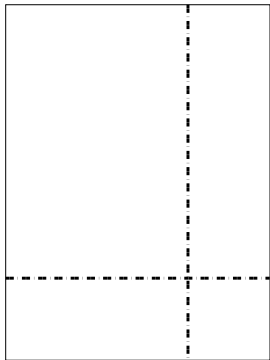
3)  $33 \times 39 =$



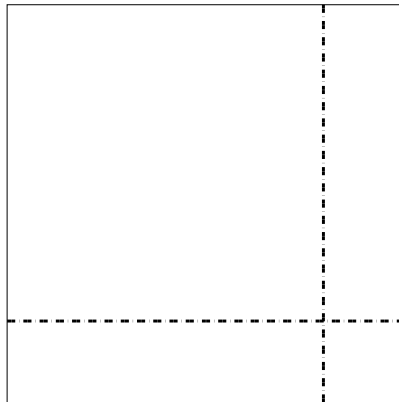
4)  $35 \times 28 =$



5)  $39 \times 29 =$



6)  $38 \times 38 =$



**Respuestas**

1. \_\_\_\_\_

2. \_\_\_\_\_

3. \_\_\_\_\_

4. \_\_\_\_\_

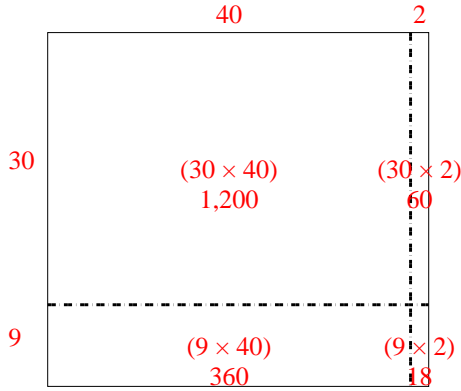
5. \_\_\_\_\_

6. \_\_\_\_\_

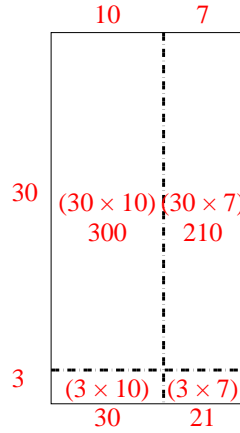


Usar la matriz proporcionada para resolver cada problema.

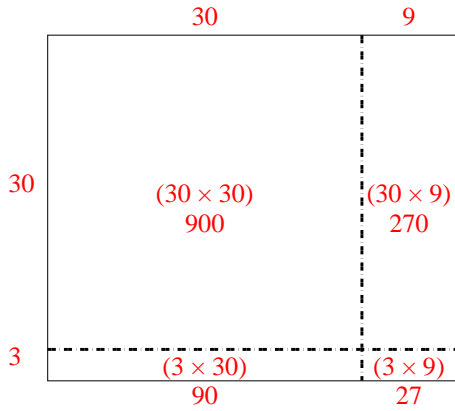
1)  $39 \times 42 =$



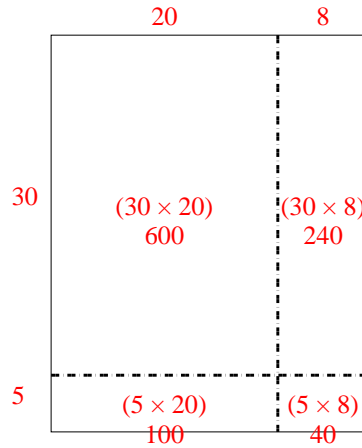
2)  $33 \times 17 =$



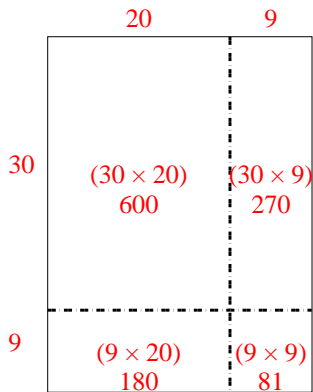
3)  $33 \times 39 =$



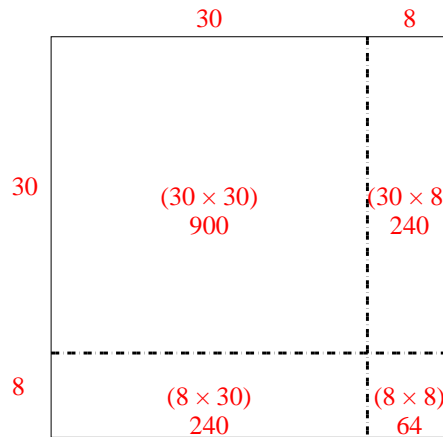
4)  $35 \times 28 =$



5)  $39 \times 29 =$



6)  $38 \times 38 =$



Respuestas

1. 1,638

2. 561

3. 1,287

4. 980

5. 1,131

6. 1,444