


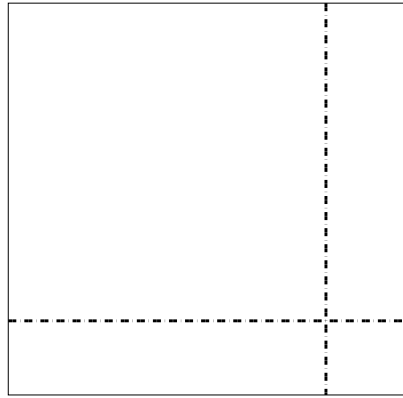


Usar la matriz proporcionada para resolver cada problema.


1)  $39 \times 35 =$




2)  $37 \times 38 =$




3)  $36 \times 34 =$



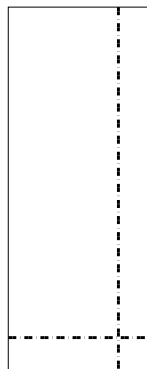
4)  $35 \times 26 =$



5)  $32 \times 19 =$



6)  $33 \times 13 =$



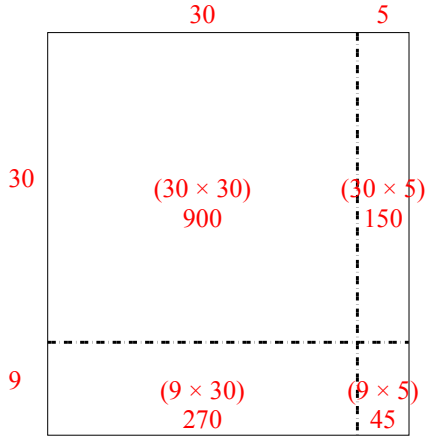
**Respuestas**

- 1. \_\_\_\_\_
- 2. \_\_\_\_\_
- 3. \_\_\_\_\_
- 4. \_\_\_\_\_
- 5. \_\_\_\_\_
- 6. \_\_\_\_\_

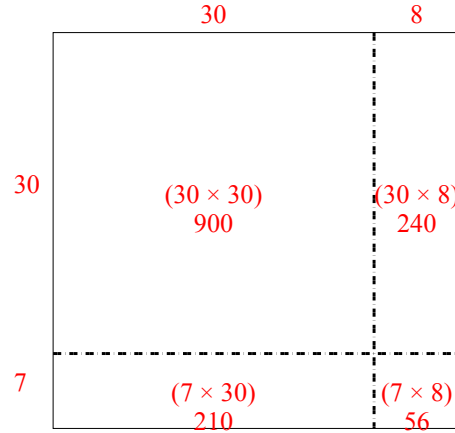


Usar la matriz proporcionada para resolver cada problema.

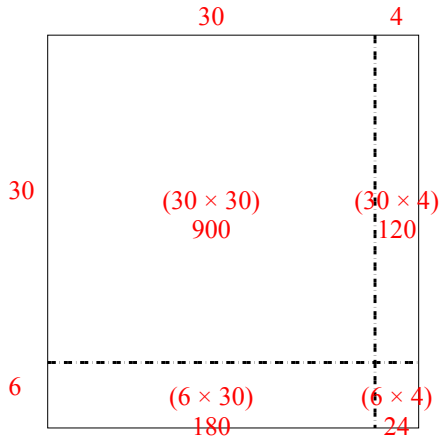
1)  $39 \times 35 =$



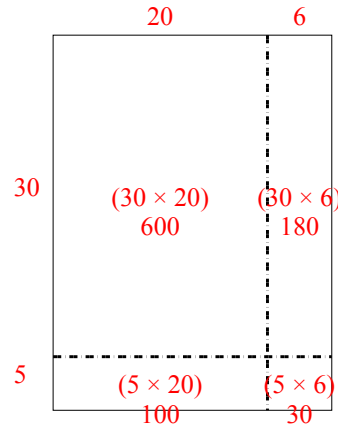
2)  $37 \times 38 =$



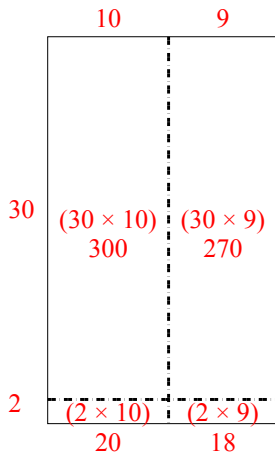
3)  $36 \times 34 =$



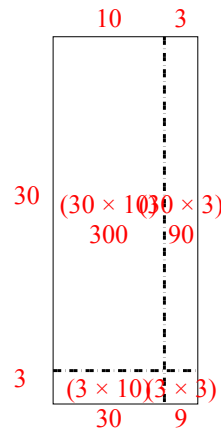
4)  $35 \times 26 =$



5)  $32 \times 19 =$



6)  $33 \times 13 =$



Respuestas

1. 1,365
2. 1,406
3. 1,224
4. 910
5. 608
6. 429