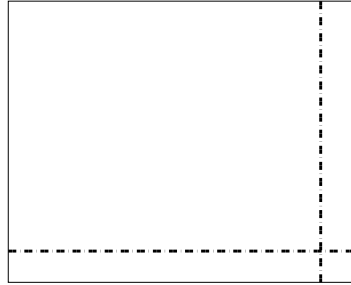





Usar la matriz proporcionada para resolver cada problema.

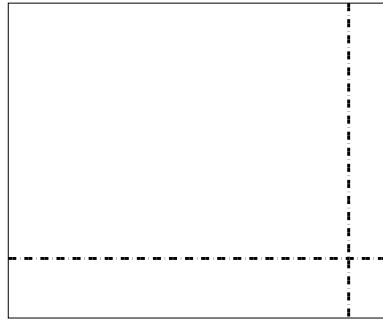

1) $66 \times 54 =$

2) $45 \times 56 =$





3) $45 \times 24 =$

4) $37 \times 45 =$



5) $43 \times 25 =$

6) $32 \times 29 =$



Respuestas

1. _____

2. _____

3. _____

4. _____

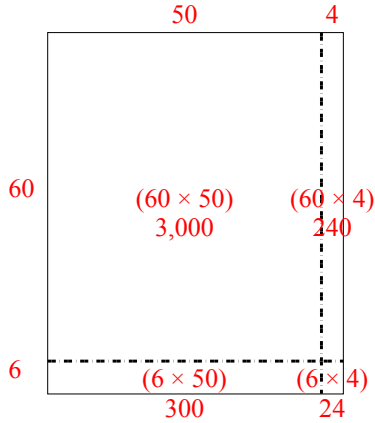
5. _____

6. _____

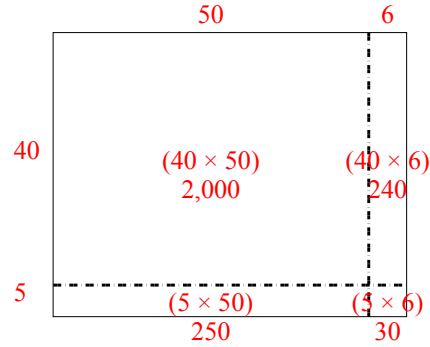


Usar la matriz proporcionada para resolver cada problema.

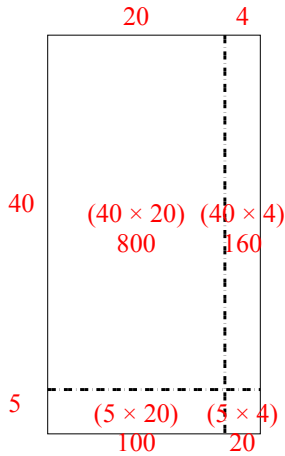
1) $66 \times 54 =$



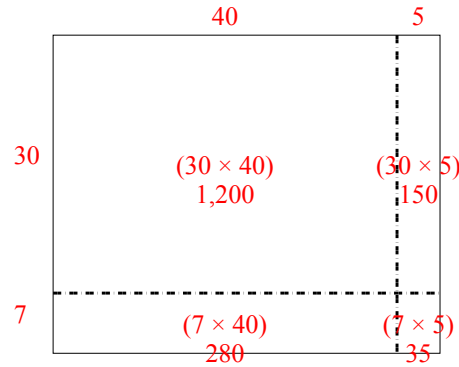
2) $45 \times 56 =$



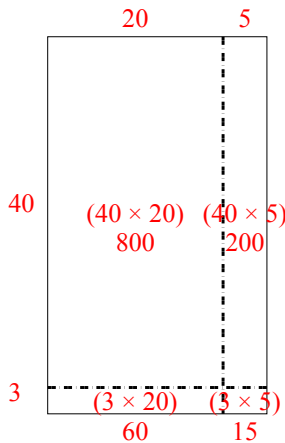
3) $45 \times 24 =$



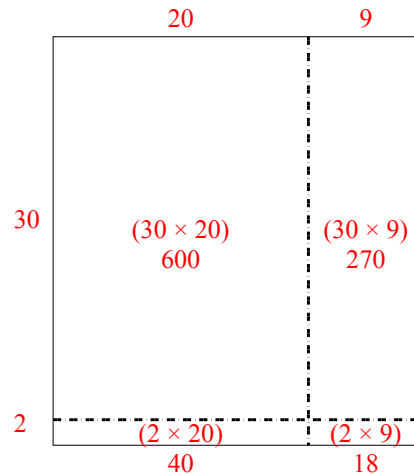
4) $37 \times 45 =$



5) $43 \times 25 =$



6) $32 \times 29 =$



Respuestas

1. 3,564
2. 2,520
3. 1,080
4. 1,665
5. 1,075
6. 928