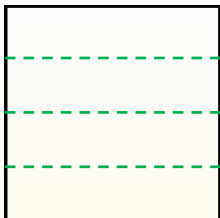


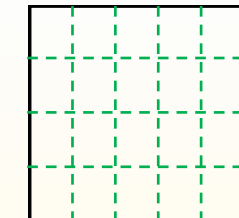
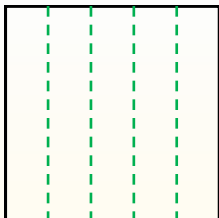


Partir la forma como se describe y después contar para encontrar el número de cajas.

Las filas van de izquierda a derecha.




Las columnas van de arriba a abajo. Este cuenta con 4 filas y 5 columnas. Hay 20 cajas en total.




Respuestas

- 1. _____
- 2. _____
- 3. _____
- 4. _____
- 5. _____
- 6. _____
- 7. _____
- 8. _____
- 9. _____


1) 2 filas
3 columnas




2) 5 filas
4 columnas




3) 3 filas
3 columnas




4) 5 filas
5 columnas




5) 3 filas
5 columnas




6) 3 filas
2 columnas




7) 5 filas
2 columnas



8) 4 filas
3 columnas



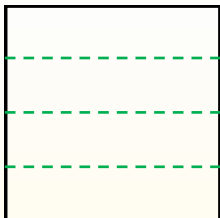
9) 3 filas
4 columnas



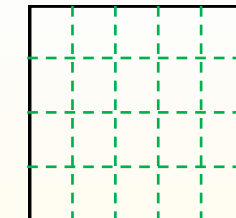
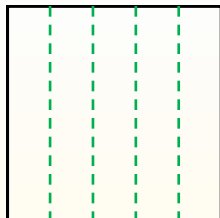


Partir la forma como se describe y después contar para encontrar el número de cajas.

Las filas van de izquierda a derecha.

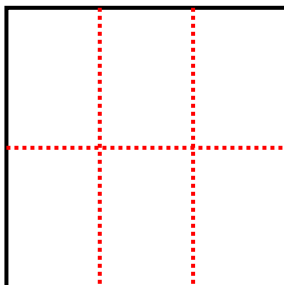


Las columnas van de arriba a abajo. Este cuenta con 4 filas y 5 columnas. Hay 20 cajas en total.

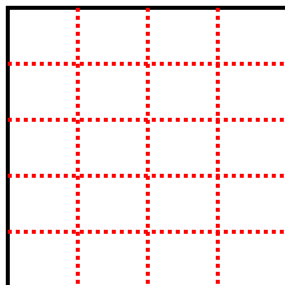


Respuestas

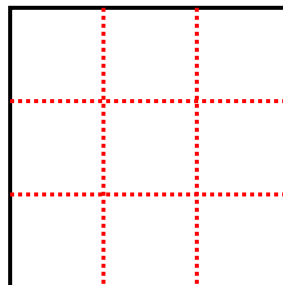
1) 2 filas
3 columnas



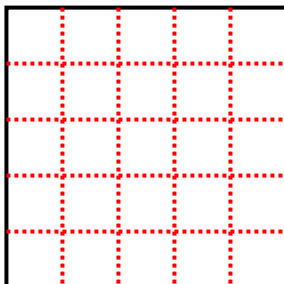
2) 5 filas
4 columnas



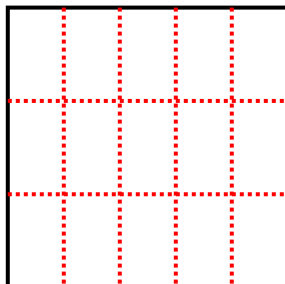
3) 3 filas
3 columnas



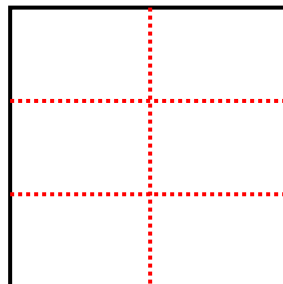
4) 5 filas
5 columnas



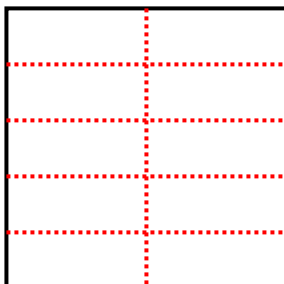
5) 3 filas
5 columnas



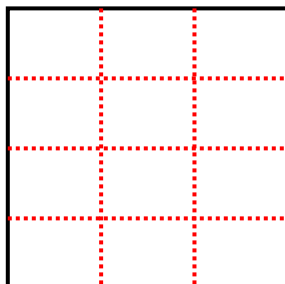
6) 3 filas
2 columnas



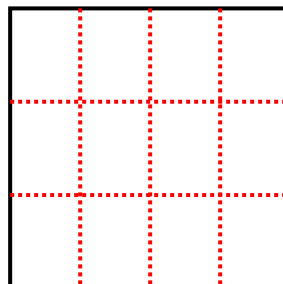
7) 5 filas
2 columnas



8) 4 filas
3 columnas



9) 3 filas
4 columnas



1. 6

2. 20

3. 9

4. 25

5. 15

6. 6

7. 10

8. 12

9. 12