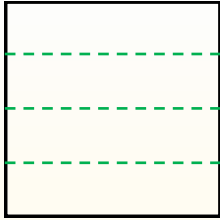


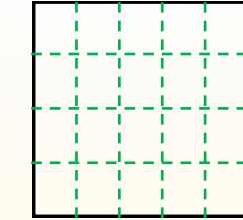
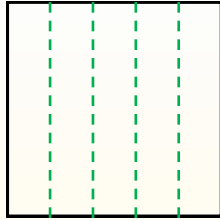


Partir la forma como se describe y después contar para encontrar el número de cajas.

Las filas van de izquierda a derecha.




Las columnas van de arriba a abajo. Este cuenta con 4 filas y 5 columnas. Hay 20 cajas en total.




**Respuestas**

1. \_\_\_\_\_
2. \_\_\_\_\_
3. \_\_\_\_\_
4. \_\_\_\_\_
5. \_\_\_\_\_
6. \_\_\_\_\_
7. \_\_\_\_\_
8. \_\_\_\_\_
9. \_\_\_\_\_


1) 3 filas  
2 columnas




2) 2 filas  
5 columnas




3) 4 filas  
4 columnas



4) 4 filas  
2 columnas




5) 5 filas  
4 columnas




6) 5 filas  
2 columnas



7) 3 filas  
4 columnas



8) 2 filas  
2 columnas



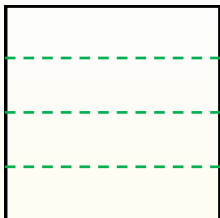
9) 2 filas  
3 columnas



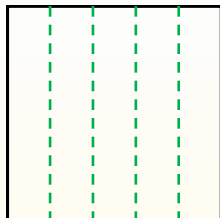


Partir la forma como se describe y después contar para encontrar el número de cajas.

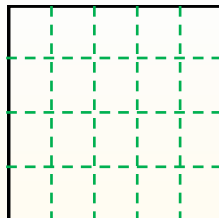
Las filas van de izquierda a derecha.



Las columnas van de arriba a abajo. Este cuenta con 4 filas y 5 columnas.



Hay 20 cajas en total.



**Respuestas**

1. 6

2. 10

3. 16

4. 8

5. 20

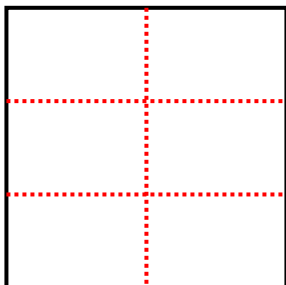
6. 10

7. 12

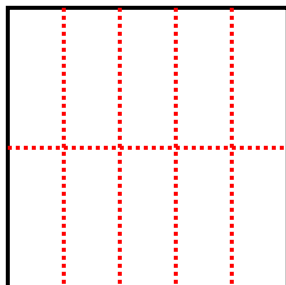
8. 4

9. 6

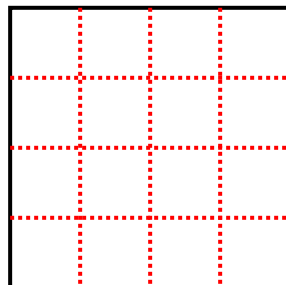
1) 3 filas  
2 columnas



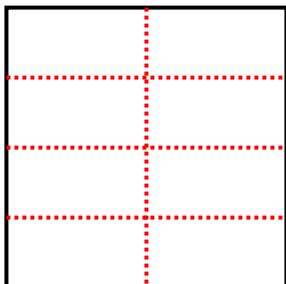
2) 2 filas  
5 columnas



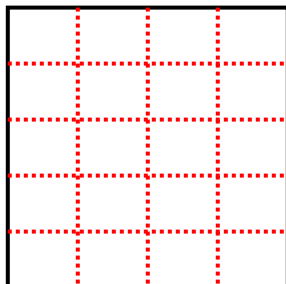
3) 4 filas  
4 columnas



4) 4 filas  
2 columnas



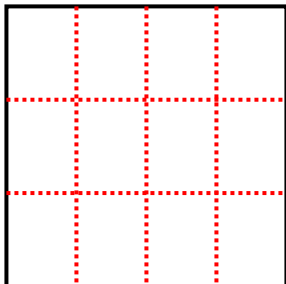
5) 5 filas  
4 columnas



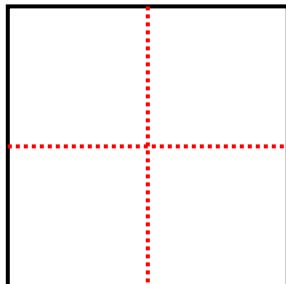
6) 5 filas  
2 columnas



7) 3 filas  
4 columnas



8) 2 filas  
2 columnas



9) 2 filas  
3 columnas

