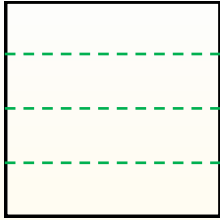


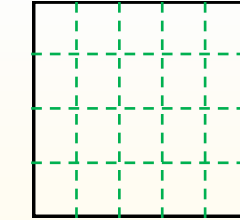
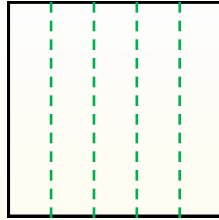


Partir la forma como se describe y después contar para encontrar el número de cajas.

Las filas van de izquierda a derecha.




Las columnas van de arriba a abajo. Este cuenta con 4 filas y 5 columnas. Hay 20 cajas en total.




Respuestas

1. _____
2. _____
3. _____
4. _____
5. _____
6. _____
7. _____
8. _____
9. _____


1) 3 filas
4 columnas




2) 5 filas
5 columnas




3) 3 filas
3 columnas




4) 2 filas
3 columnas




5) 5 filas
4 columnas




6) 5 filas
3 columnas




7) 4 filas
3 columnas



8) 3 filas
2 columnas



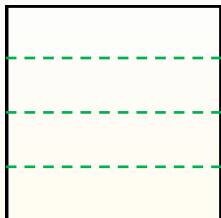
9) 2 filas
2 columnas



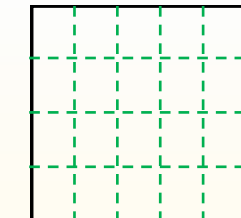
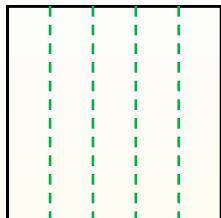


Partir la forma como se describe y después contar para encontrar el número de cajas.

Las filas van de izquierda a derecha.

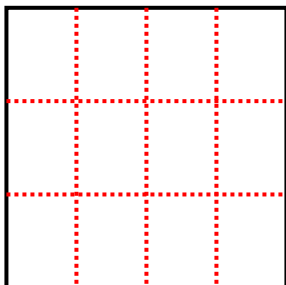


Las columnas van de arriba a abajo. Este cuenta con 4 filas y 5 columnas. Hay 20 cajas en total.

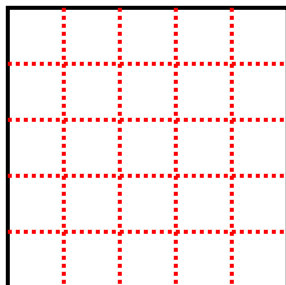


Respuestas

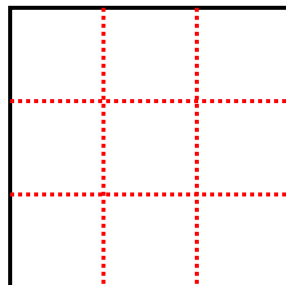
1) 3 filas
4 columnas



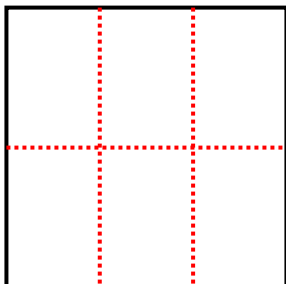
2) 5 filas
5 columnas



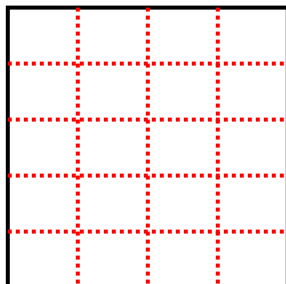
3) 3 filas
3 columnas



4) 2 filas
3 columnas




5) 5 filas
4 columnas



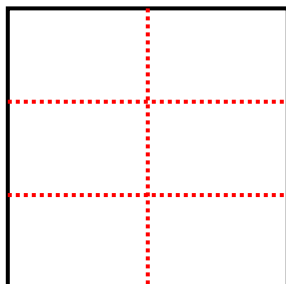
6) 5 filas
3 columnas



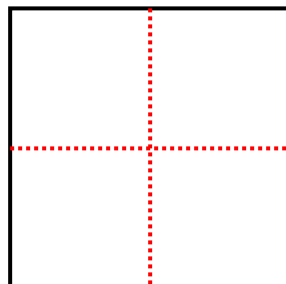
7) 4 filas
3 columnas



8) 3 filas
2 columnas



9) 2 filas
2 columnas



- 1. 12
- 2. 25
- 3. 9
- 4. 6
- 5. 20
- 6. 15
- 7. 12
- 8. 6
- 9. 4