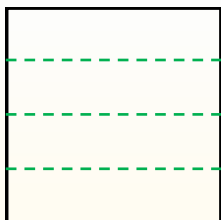


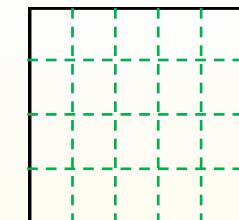
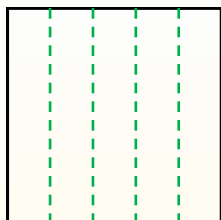


Partir la forma como se describe y después contar para encontrar el número de cajas.

Las filas van de izquierda a derecha.




Las columnas van de arriba a abajo. Este cuenta con 4 filas y 5 columnas. Hay 20 cajas en total.




Respuestas

1. _____
2. _____
3. _____
4. _____
5. _____
6. _____
7. _____
8. _____
9. _____


1) 4 filas
3 columnas




2) 4 filas
2 columnas




3) 5 filas
4 columnas




4) 2 filas
2 columnas




5) 3 filas
2 columnas




6) 3 filas
4 columnas




7) 2 filas
3 columnas



8) 3 filas
5 columnas



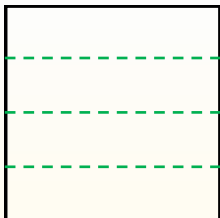
9) 2 filas
4 columnas



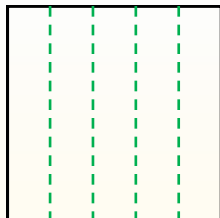


Partir la forma como se describe y después contar para encontrar el número de cajas.

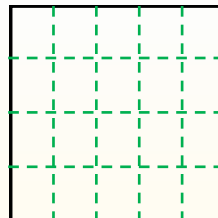
Las filas van de izquierda a derecha.



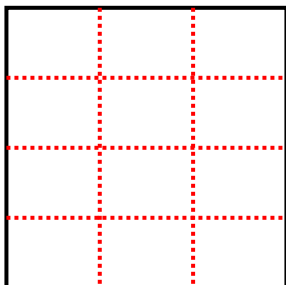
Las columnas van de arriba a abajo.



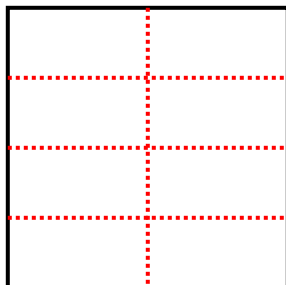
Este cuenta con 4 filas y 5 columnas. Hay 20 cajas en total.



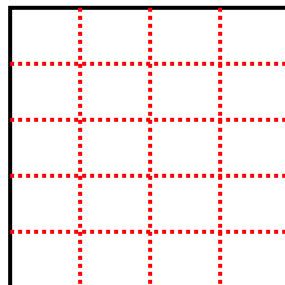
1) 4 filas
3 columnas



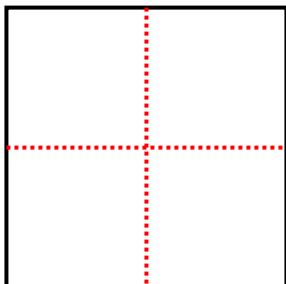
2) 4 filas
2 columnas



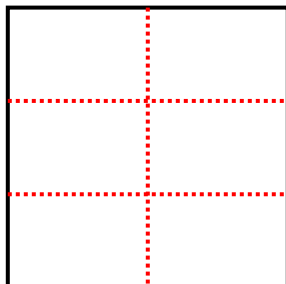
3) 5 filas
4 columnas



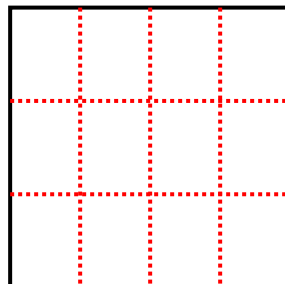
4) 2 filas
2 columnas



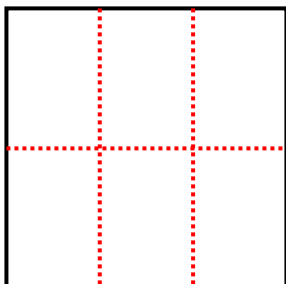
5) 3 filas
2 columnas



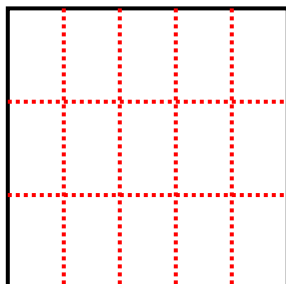
6) 3 filas
4 columnas



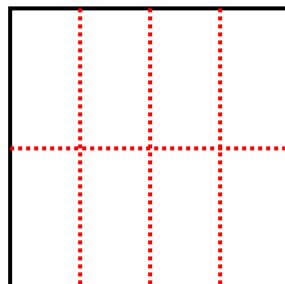
7) 2 filas
3 columnas



8) 3 filas
5 columnas



9) 2 filas
4 columnas



Respuestas

1. 12

2. 8

3. 20

4. 4

5. 6

6. 12

7. 6

8. 15

9. 8