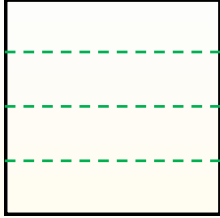


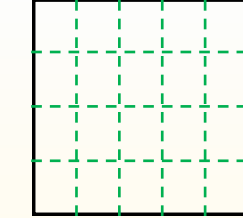
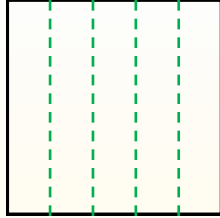


Partir la forma como se describe y después contar para encontrar el número de cajas.

Las filas van de izquierda a derecha.




Las columnas van de arriba a abajo. Este cuenta con 4 filas y 5 columnas. Hay 20 cajas en total.




Respuestas

- 1. _____
- 2. _____
- 3. _____
- 4. _____
- 5. _____
- 6. _____
- 7. _____
- 8. _____
- 9. _____


1) 3 filas
3 columnas




2) 3 filas
4 columnas




3) 5 filas
4 columnas




4) 3 filas
5 columnas




5) 5 filas
5 columnas




6) 2 filas
3 columnas




7) 5 filas
2 columnas



8) 4 filas
3 columnas



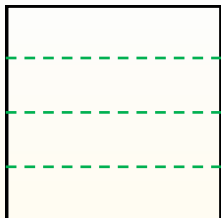
9) 2 filas
4 columnas



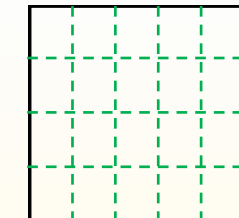
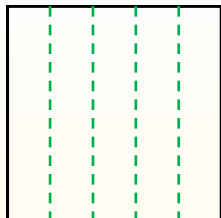


Partir la forma como se describe y después contar para encontrar el número de cajas.

Las filas van de izquierda a derecha.

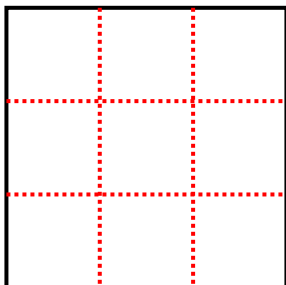


Las columnas van de arriba a abajo. Este cuenta con 4 filas y 5 columnas. Hay 20 cajas en total.

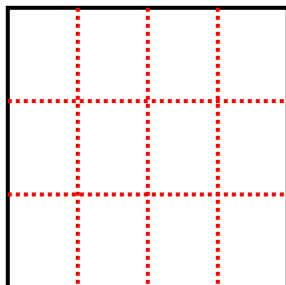


Respuestas

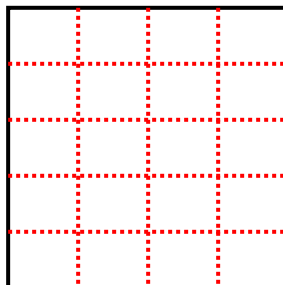
1) 3 filas
3 columnas



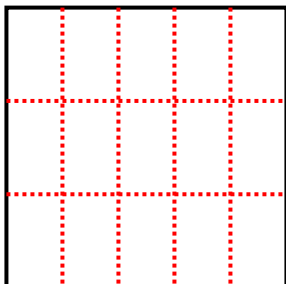
2) 3 filas
4 columnas



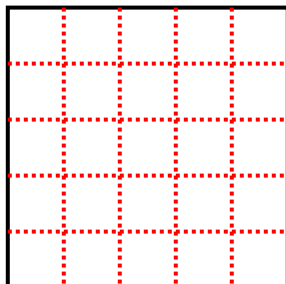
3) 5 filas
4 columnas



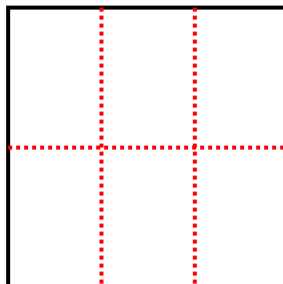
4) 3 filas
5 columnas



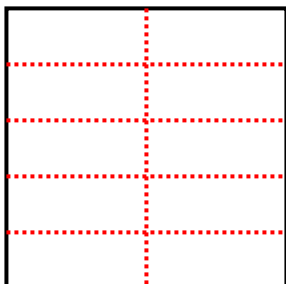
5) 5 filas
5 columnas



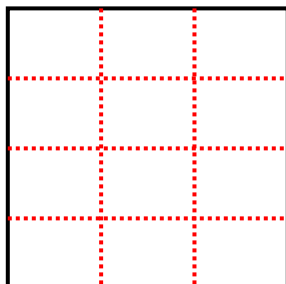
6) 2 filas
3 columnas



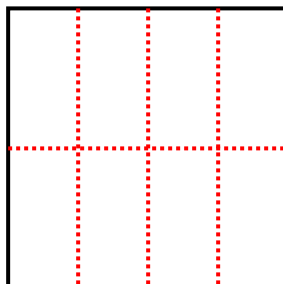
7) 5 filas
2 columnas



8) 4 filas
3 columnas



9) 2 filas
4 columnas



- 1. 9
- 2. 12
- 3. 20
- 4. 15
- 5. 25
- 6. 6
- 7. 10
- 8. 12
- 9. 8