


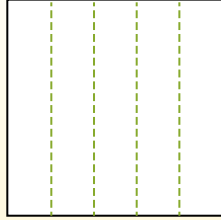


Partir la forma como se describe y después contar para encontrar el número de cajas.

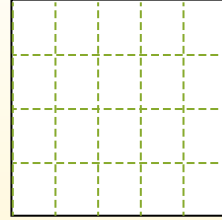
Las filas van de izquierda a derecha.



Las columnas van de arriba a abajo.




Este cuenta con 4 filas y 5 columnas. Hay 20 cajas en total.




Respuestas

- 1. _____
- 2. _____
- 3. _____
- 4. _____
- 5. _____
- 6. _____
- 7. _____
- 8. _____
- 9. _____


1) 4 filas
2 columnas




2) 3 filas
3 columnas




3) 4 filas
3 columnas




4) 5 filas
3 columnas




5) 5 filas
4 columnas




6) 4 filas
4 columnas




7) 2 filas
2 columnas



8) 2 filas
5 columnas



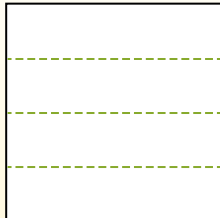
9) 3 filas
5 columnas



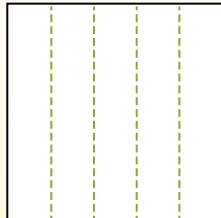


Partir la forma como se describe y después contar para encontrar el número de cajas.

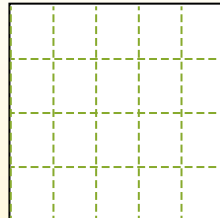
Las filas van de izquierda a derecha.



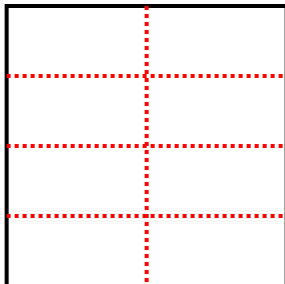
Las columnas van de arriba a abajo.



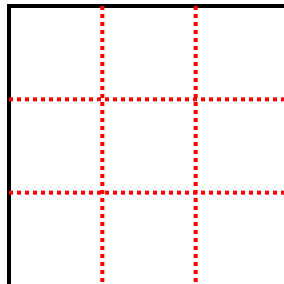
Este cuenta con 4 filas y 5 columnas. Hay 20 cajas en total.



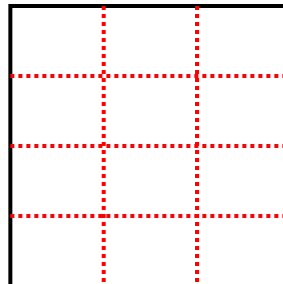
1) 4 filas
2 columnaas



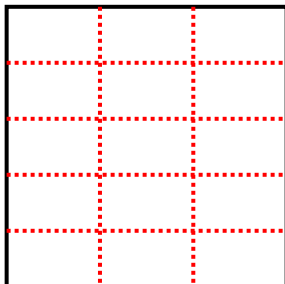
2) 3 filas
3 columnaas



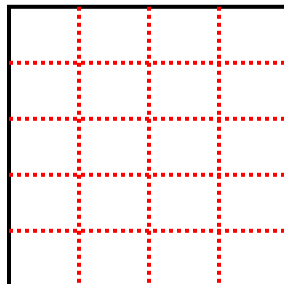
3) 4 filas
3 columnaas



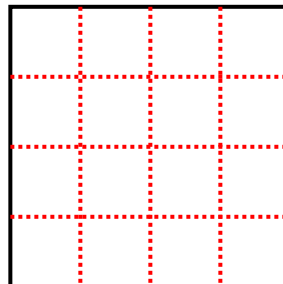
4) 5 filas
3 columnaas



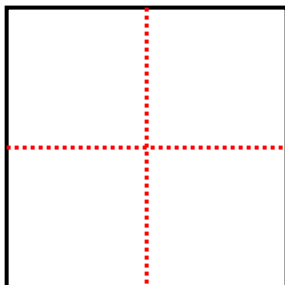
5) 5 filas
4 columnaas



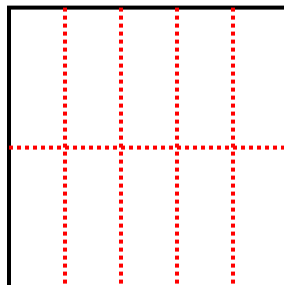
6) 4 filas
4 columnaas



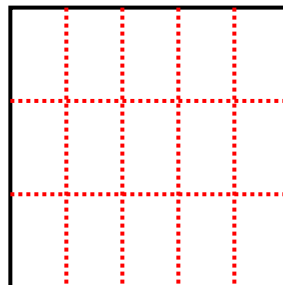
7) 2 filas
2 columnaas



8) 2 filas
5 columnaas



9) 3 filas
5 columnaas



Respuestas

1. 8

2. 9

3. 12

4. 15

5. 20

6. 16

7. 4

8. 10

9. 15