



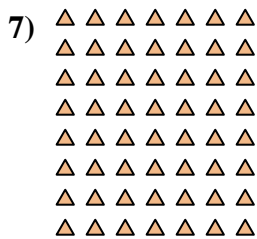







Escribir cada matriz como un problema de multiplicación y resolver.



Respuestas

Ej. $9 \times 3 = 27$

1. $2 \times 9 = 18$

2. $6 \times 10 = 60$

3. $9 \times 4 = 36$

4. $8 \times 4 = 32$

5. $4 \times 7 = 28$

6. $8 \times 3 = 24$

7. $8 \times 7 = 56$

8. $7 \times 4 = 28$

9. $9 \times 7 = 63$

10. $9 \times 6 = 54$

11. $5 \times 8 = 40$