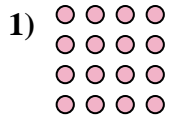





Escribir cada matriz como un problema de multiplicación y resolver.



Respuestas

Ej. 4 × 10 = 40

1. _____

2. _____

3. _____

4. _____

5. _____

6. _____






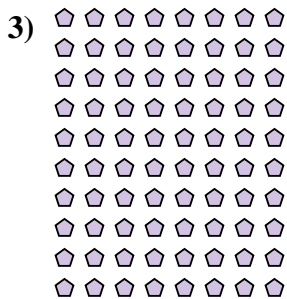
7. _____

8. _____

9. _____

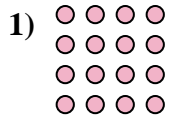

10. _____

11. _____





Escribir cada matriz como un problema de multiplicación y resolver.



Respuestas

Ej. 4 × 10 = 40

1. 4 × 4 = 16

2. 5 × 5 = 25

3. 10 × 8 = 80

4. 6 × 10 = 60

5. 9 × 6 = 54

6. 6 × 4 = 24

7. 5 × 9 = 45

8. 2 × 6 = 12

9. 2 × 8 = 16

10. 2 × 3 = 6

11. 10 × 5 = 50

