


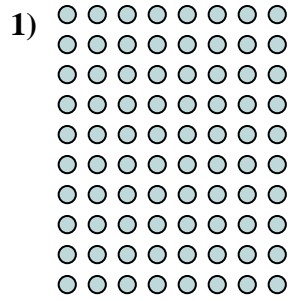
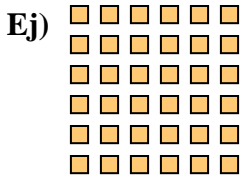




Escribir cada matriz como un problema de multiplicación y resolver.



Respuestas

Ej. $6 \times 6 = 36$

1. $10 \times 8 = 80$

2. $3 \times 3 = 9$

3. $7 \times 8 = 56$

4. $10 \times 4 = 40$

5. $4 \times 10 = 40$

6. $5 \times 10 = 50$

7. $2 \times 4 = 8$

8. $4 \times 8 = 32$

9. $7 \times 2 = 14$

10. $4 \times 7 = 28$

11. $4 \times 3 = 12$