
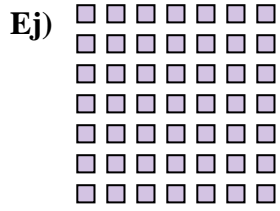




Escribir cada matriz como un problema de multiplicación y resolver.



Respuestas

Ej. 7 × 7 = 49

1. _____

2. _____

3. _____

4. _____

5. _____

6. _____




7. _____

8. _____

9. _____


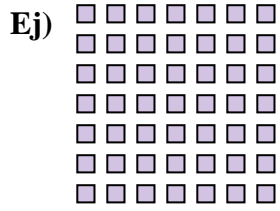
10. _____

11. _____





Escribir cada matriz como un problema de multiplicación y resolver.



Respuestas

Ej. 7 × 7 = 49

1. 7 × 2 = 14

2. 4 × 8 = 32

3. 4 × 2 = 8

4. 7 × 5 = 35

5. 3 × 2 = 6

6. 8 × 10 = 80

7. 5 × 8 = 40

8. 3 × 9 = 27

9. 4 × 6 = 24

10. 10 × 4 = 40

11. 2 × 7 = 14

