





Escribir cada matriz como un problema de multiplicación y resolver.



Respuestas

Ej. 5 × 7 = 35

1. _____

2. _____

3. _____

4. _____

5. _____

6. _____

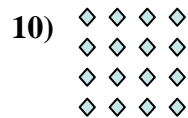




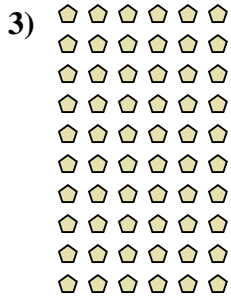
7. _____

8. _____

9. _____



10. _____

11. _____





Escribir cada matriz como un problema de multiplicación y resolver.



Respuestas

Ej. 5 × 7 = 35

1. 2 × 7 = 14

2. 6 × 3 = 18

3. 10 × 6 = 60

4. 3 × 4 = 12

5. 8 × 8 = 64

6. 6 × 5 = 30

7. 6 × 7 = 42

8. 7 × 8 = 56

9. 9 × 3 = 27

10. 4 × 4 = 16

11. 4 × 5 = 20

