



Expresar cada grupo como un problema de multiplicación.

**Respuestas**

Ej)

Ej.  $9 \times 5 = 45$

1. \_\_\_\_\_

2. \_\_\_\_\_

3. \_\_\_\_\_

4. \_\_\_\_\_

5. \_\_\_\_\_

6. \_\_\_\_\_

7. \_\_\_\_\_

8. \_\_\_\_\_

1)

2)

3)

4)

5)

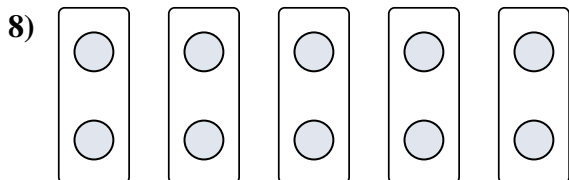
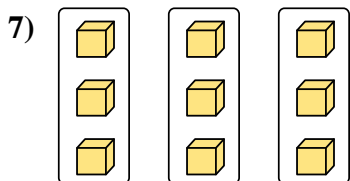


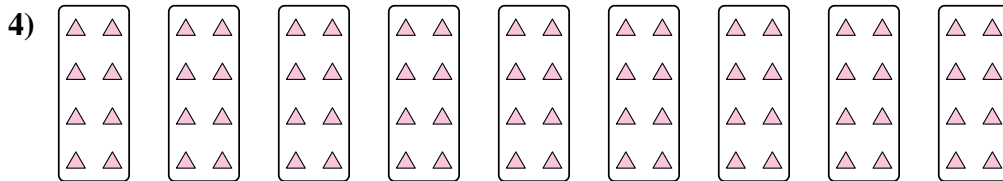
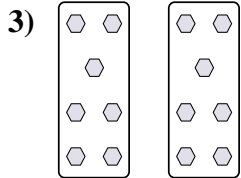
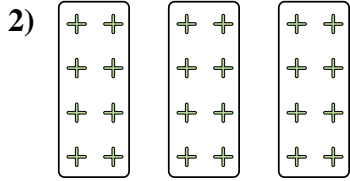


6)

7)

8)



Expresar cada grupo como un problema de multiplicación.



**Respuestas**

Ej.  $9 \times 5 = 45$

1.  $3 \times 4 = 12$

2.  $3 \times 8 = 24$

3.  $2 \times 7 = 14$

4.  $9 \times 8 = 72$

5.  $6 \times 6 = 36$

6.  $2 \times 10 = 20$

7.  $3 \times 3 = 9$

8.  $5 \times 2 = 10$