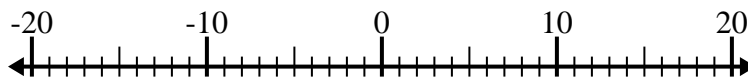


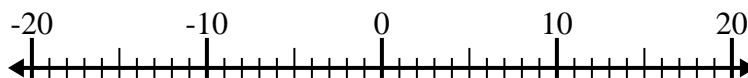


Resolver cada problema. Usar la recta numérica si lo necesitas.

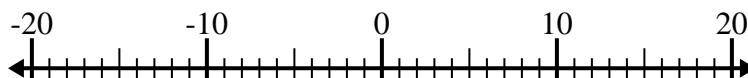
1) $(-5) + (-15) =$ _____



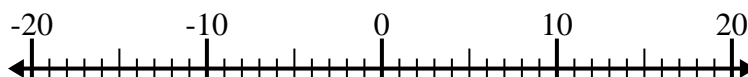
2) $9 + (-1) =$ _____



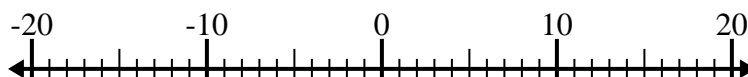
3) $(-2) + 10 =$ _____



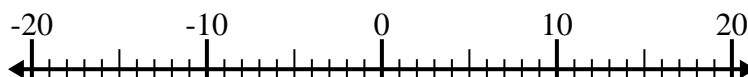
4) $(-10) + (-7) =$ _____



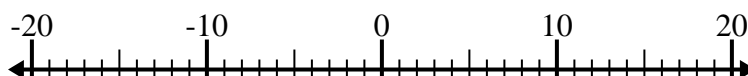
5) $(-4) - 14 =$ _____



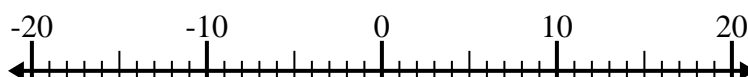
6) $(-1) + (-11) =$ _____



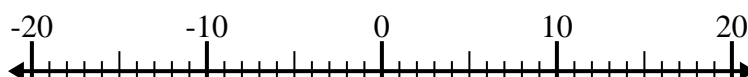
7) $5 - (-10) =$ _____



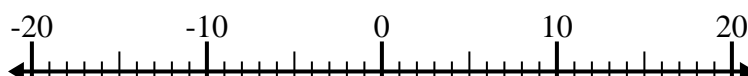
8) $(-3) + 10 =$ _____



9) $12 - (-3) =$ _____



10) $8 + (-3) =$ _____



Respuestas

1. _____

2. _____

3. _____

4. _____

5. _____

6. _____

7. _____

8. _____

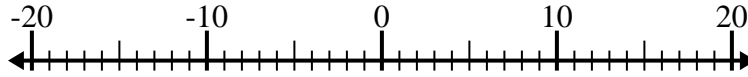
9. _____

10. _____

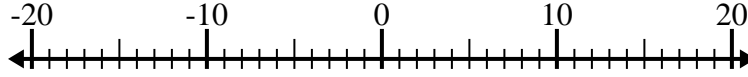


Resolver cada problema. Usar la recta numérica si lo necesitas.

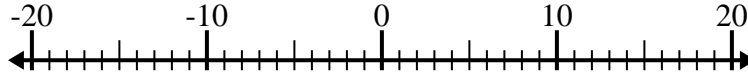
1) $(-5) + (-15) = \underline{-20}$



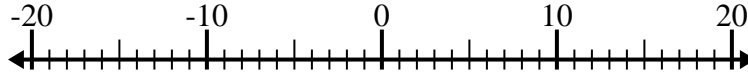
2) $9 + (-1) = \underline{8}$



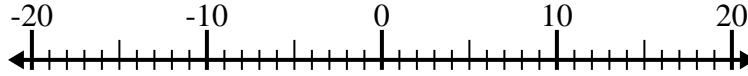
3) $(-2) + 10 = \underline{8}$



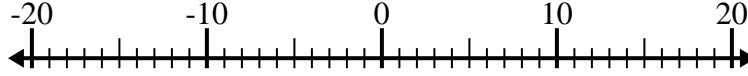
4) $(-10) + (-7) = \underline{-17}$



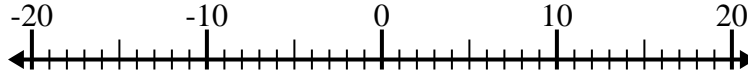
5) $(-4) - 14 = \underline{-18}$



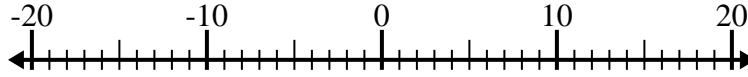
6) $(-1) + (-11) = \underline{-12}$



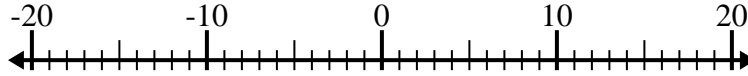
7) $5 - (-10) = \underline{15}$



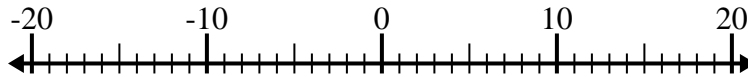
8) $(-3) + 10 = \underline{7}$



9) $12 - (-3) = \underline{15}$



10) $8 + (-3) = \underline{5}$

**Respuestas**1. -202. 83. 84. -175. -186. -127. 158. 79. 1510. 5