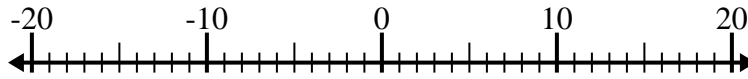


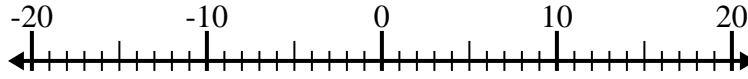


Resolver cada problema. Usar la recta numérica si lo necesitas.

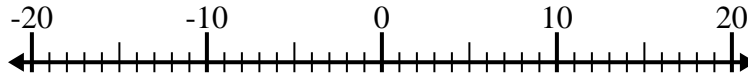
1) $7 + (-2) =$ _____



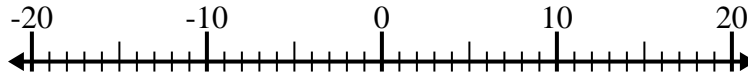
2) $(-9) - 3 =$ _____



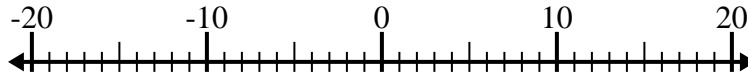
3) $(-11) + (-7) =$ _____



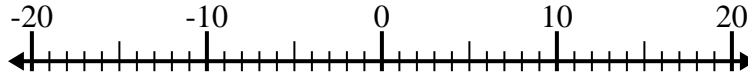
4) $(-7) + (-1) =$ _____



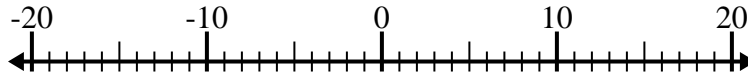
5) $(-11) + (-4) =$ _____



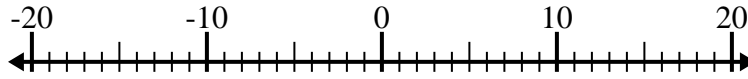
6) $(-13) - 4 =$ _____



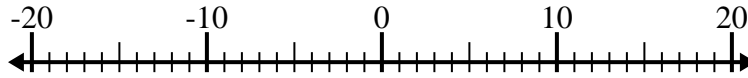
7) $(-14) + 11 =$ _____



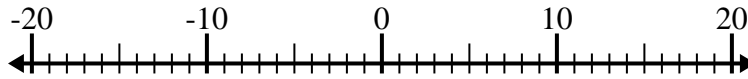
8) $6 - (-10) =$ _____



9) $(-12) + 7 =$ _____



10) $4 - (-2) =$ _____



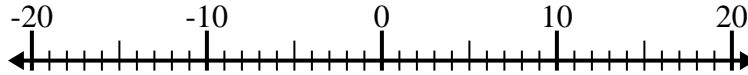
Respuestas

1. _____
2. _____
3. _____
4. _____
5. _____
6. _____
7. _____
8. _____
9. _____
10. _____

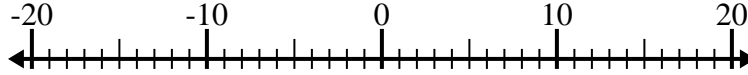


Resolver cada problema. Usar la recta numérica si lo necesitas.

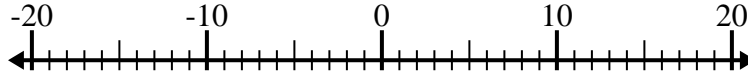
1) $7 + (-2) = \underline{5}$



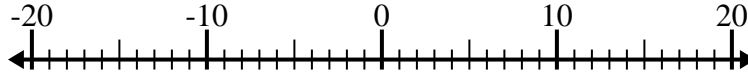
2) $(-9) - 3 = \underline{-12}$



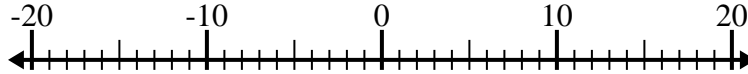
3) $(-11) + (-7) = \underline{-18}$



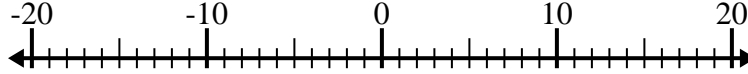
4) $(-7) + (-1) = \underline{-8}$



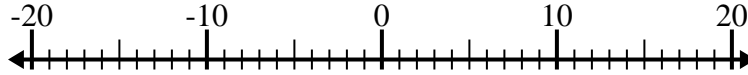
5) $(-11) + (-4) = \underline{-15}$



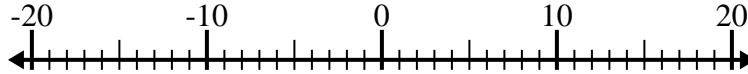
6) $(-13) - 4 = \underline{-17}$



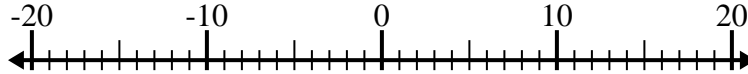
7) $(-14) + 11 = \underline{-3}$



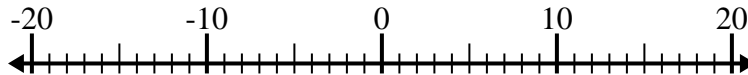
8) $6 - (-10) = \underline{16}$



9) $(-12) + 7 = \underline{-5}$



10) $4 - (-2) = \underline{6}$

**Respuestas**1. 52. -123. -184. -85. -156. -177. -38. 169. -510. 6