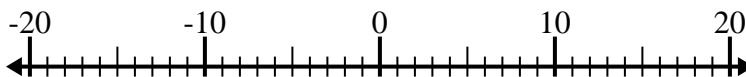


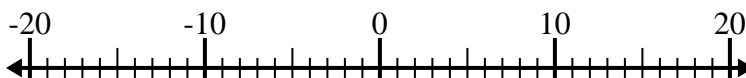


Resolver cada problema. Usar la recta numérica si lo necesitas.

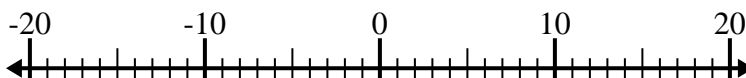
1) $5 - (-14) =$ _____



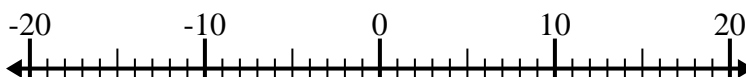
2) $(-1) + 10 =$ _____



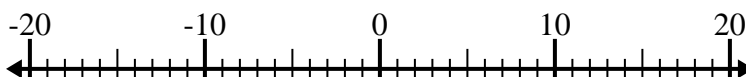
3) $15 + (-11) =$ _____



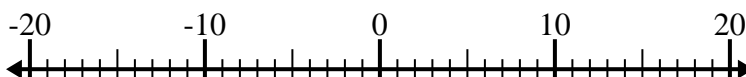
4) $3 + (-5) =$ _____



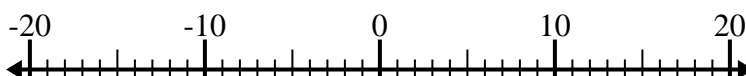
5) $5 - (-4) =$ _____



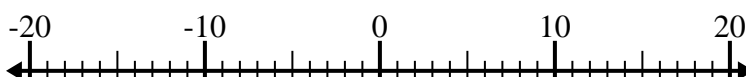
6) $(-8) + (-1) =$ _____



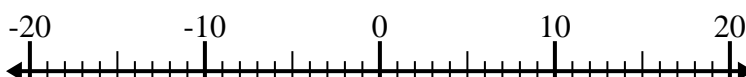
7) $14 - (-5) =$ _____



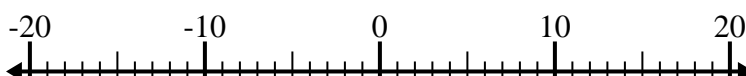
8) $(-7) - (-8) =$ _____



9) $(-12) - (-1) =$ _____



10) $8 - (-3) =$ _____



Respuestas

1. _____

2. _____

3. _____

4. _____

5. _____

6. _____

7. _____

8. _____

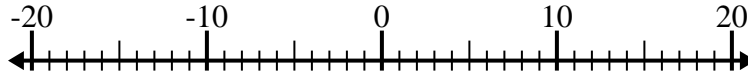
9. _____

10. _____

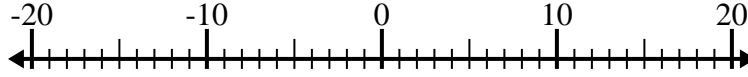


Resolver cada problema. Usar la recta numérica si lo necesitas.

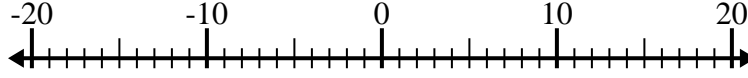
1) $5 - (-14) = \underline{19}$



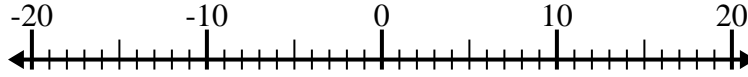
2) $(-1) + 10 = \underline{9}$



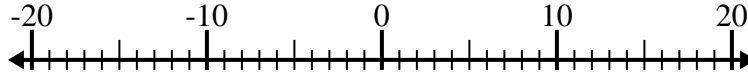
3) $15 + (-11) = \underline{4}$



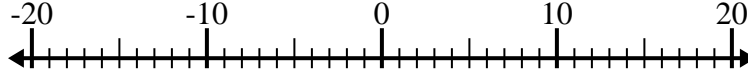
4) $3 + (-5) = \underline{-2}$



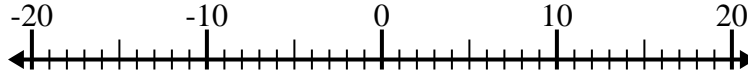
5) $5 - (-4) = \underline{9}$



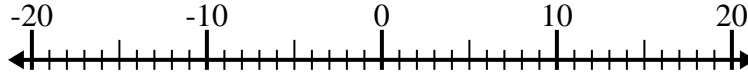
6) $(-8) + (-1) = \underline{-9}$



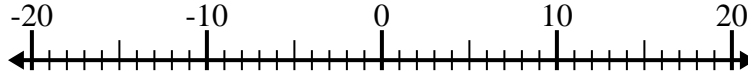
7) $14 - (-5) = \underline{19}$



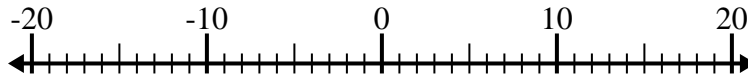
8) $(-7) - (-8) = \underline{1}$



9) $(-12) - (-1) = \underline{-11}$



10) $8 - (-3) = \underline{11}$

**Respuestas**1. 192. 93. 44. -25. 96. -97. 198. 19. -1110. 11