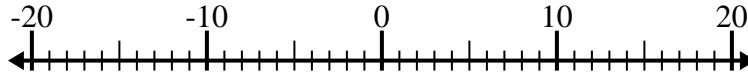


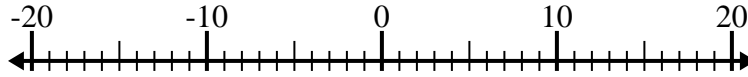


Resolver cada problema. Usar la recta numérica si lo necesitas.

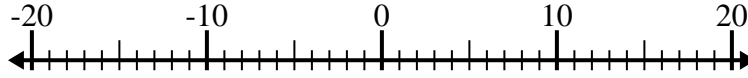
1) $(-5) - (-8) =$ _____



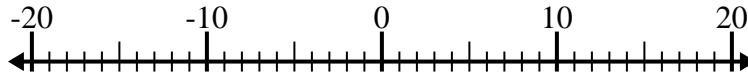
2) $10 - (-4) =$ _____



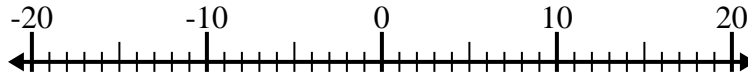
3) $(-3) - 8 =$ _____



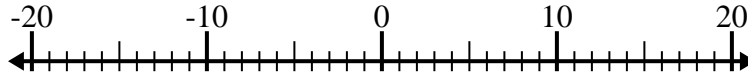
4) $11 - (-6) =$ _____



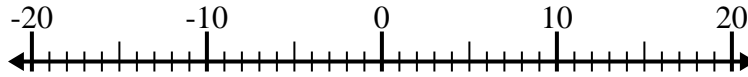
5) $9 - (-8) =$ _____



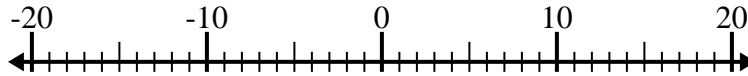
6) $(-11) - 8 =$ _____



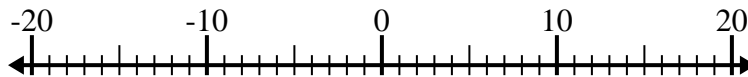
7) $(-4) + (-13) =$ _____



8) $(-3) - (-11) =$ _____



9) $(-5) + 6 =$ _____



10) $9 - (-7) =$ _____



Respuestas

1. _____

2. _____

3. _____

4. _____

5. _____

6. _____

7. _____

8. _____

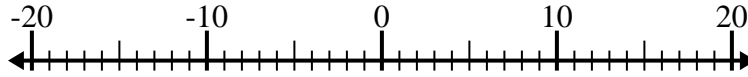
9. _____

10. _____

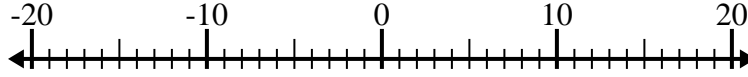


Resolver cada problema. Usar la recta numérica si lo necesitas.

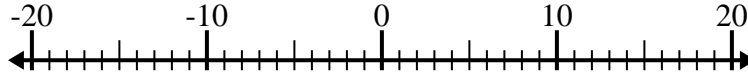
1) $(-5) - (-8) = \underline{3}$



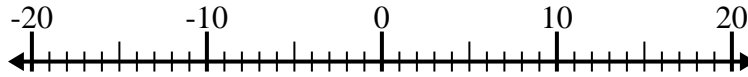
2) $10 - (-4) = \underline{14}$



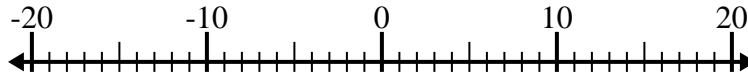
3) $(-3) - 8 = \underline{-11}$



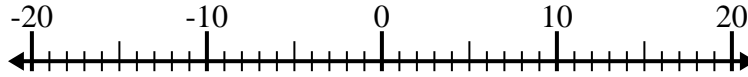
4) $11 - (-6) = \underline{17}$



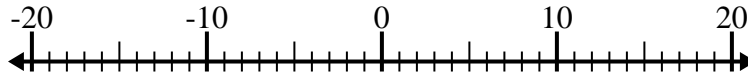
5) $9 - (-8) = \underline{17}$



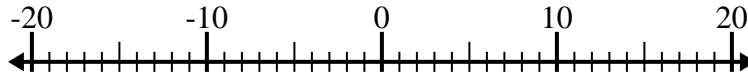
6) $(-11) - 8 = \underline{-19}$



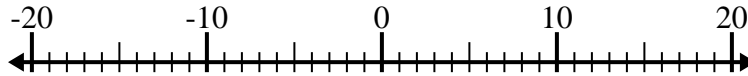
7) $(-4) + (-13) = \underline{-17}$



8) $(-3) - (-11) = \underline{8}$



9) $(-5) + 6 = \underline{1}$



10) $9 - (-7) = \underline{16}$

**Respuestas**1. 32. 143. -114. 175. 176. -197. -178. 89. 110. 16