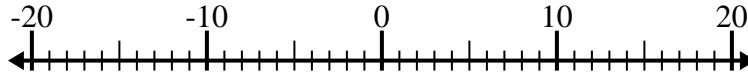


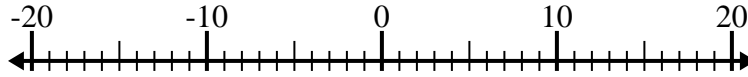


Resolver cada problema. Usar la recta numérica si lo necesitas.

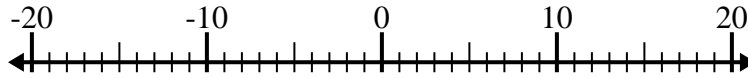
1) $(-6) - 9 =$ _____



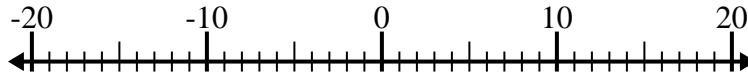
2) $10 - (-5) =$ _____



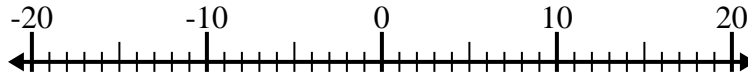
3) $(-4) + 6 =$ _____



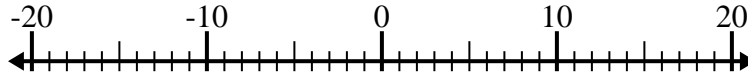
4) $1 - (-9) =$ _____



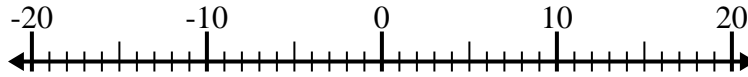
5) $(-2) + (-9) =$ _____



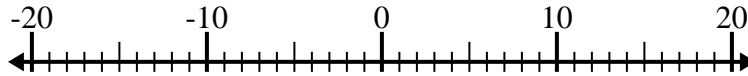
6) $(-11) - (-10) =$ _____



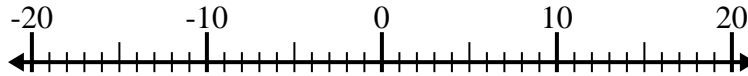
7) $(-13) - (-9) =$ _____



8) $(-15) - (-9) =$ _____



9) $(-11) - 4 =$ _____



10) $(-5) + (-14) =$ _____



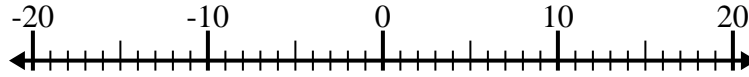
Respuestas

1. _____
2. _____
3. _____
4. _____
5. _____
6. _____
7. _____
8. _____
9. _____
10. _____

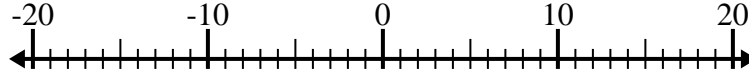


Resolver cada problema. Usar la recta numérica si lo necesitas.

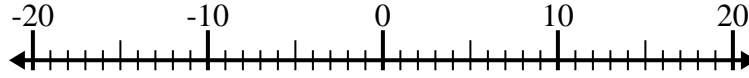
1) $(-6) - 9 = \underline{-15}$



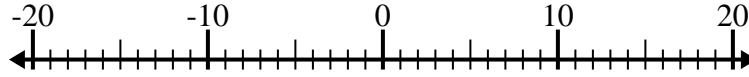
2) $10 - (-5) = \underline{15}$



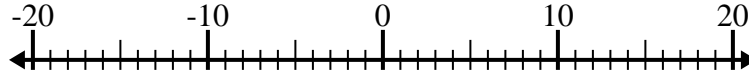
3) $(-4) + 6 = \underline{2}$



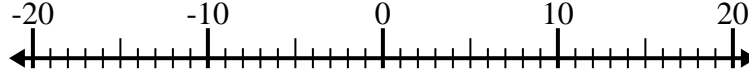
4) $1 - (-9) = \underline{10}$



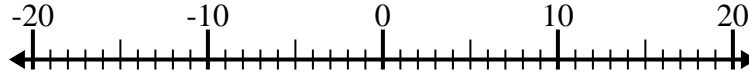
5) $(-2) + (-9) = \underline{-11}$



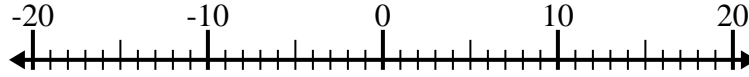
6) $(-11) - (-10) = \underline{-1}$



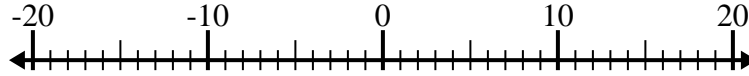
7) $(-13) - (-9) = \underline{-4}$



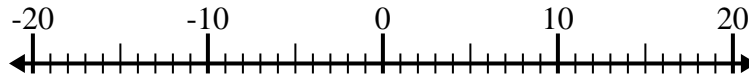
8) $(-15) - (-9) = \underline{-6}$



9) $(-11) - 4 = \underline{-15}$



10) $(-5) + (-14) = \underline{-19}$

**Respuestas**1. **-15**2. **15**3. **2**4. **10**5. **-11**6. **-1**7. **-4**8. **-6**9. **-15**10. **-19**