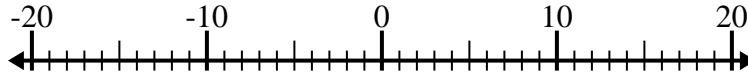


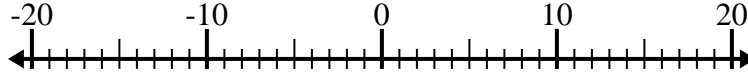


Resolver cada problema. Usar la recta numérica si lo necesitas.

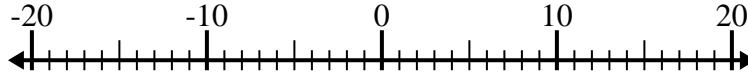
1) $(-8) - (-11) =$ _____



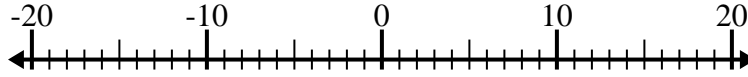
2) $(-2) - (-1) =$ _____



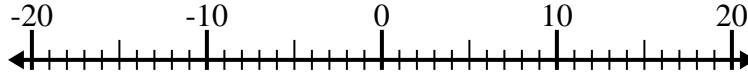
3) $(-15) - 3 =$ _____



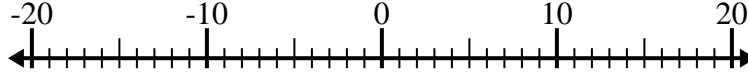
4) $8 - (-9) =$ _____



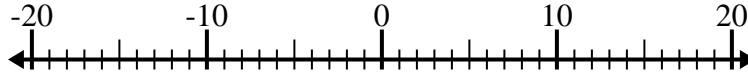
5) $2 + (-15) =$ _____



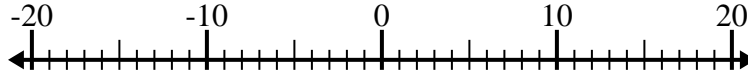
6) $(-2) - 14 =$ _____



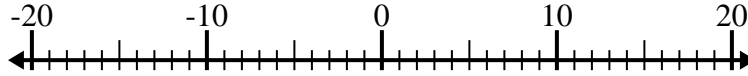
7) $4 - (-7) =$ _____



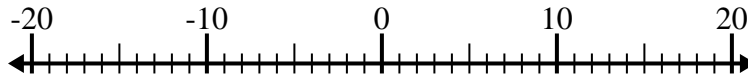
8) $1 + (-10) =$ _____



9) $(-8) + (-5) =$ _____



10) $(-2) + (-11) =$ _____



Respuestas

1. _____

2. _____

3. _____

4. _____

5. _____

6. _____

7. _____

8. _____

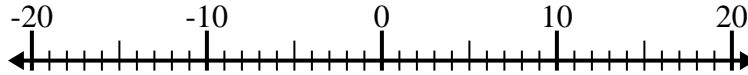
9. _____

10. _____

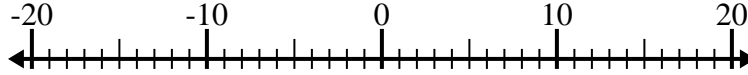


Resolver cada problema. Usar la recta numérica si lo necesitas.

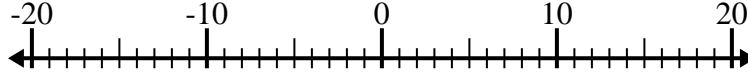
1) $(-8) - (-11) = \underline{3}$



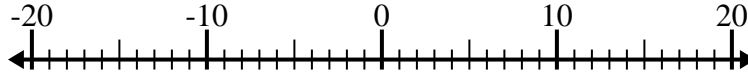
2) $(-2) - (-1) = \underline{-1}$



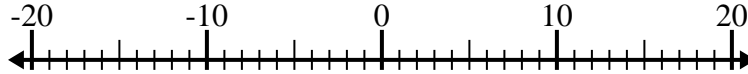
3) $(-15) - 3 = \underline{-18}$



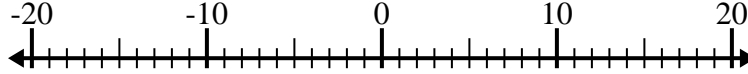
4) $8 - (-9) = \underline{17}$



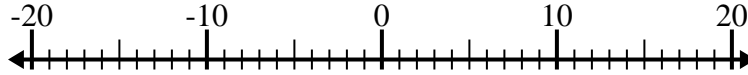
5) $2 + (-15) = \underline{-13}$



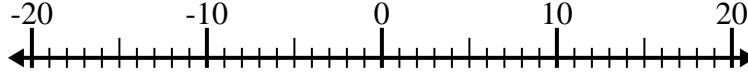
6) $(-2) - 14 = \underline{-16}$



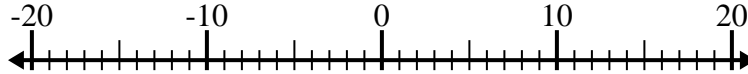
7) $4 - (-7) = \underline{11}$



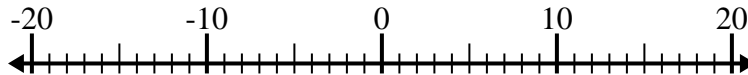
8) $1 + (-10) = \underline{-9}$



9) $(-8) + (-5) = \underline{-13}$



10) $(-2) + (-11) = \underline{-13}$

**Respuestas**1. 32. -13. -184. 175. -136. -167. 118. -99. -1310. -13