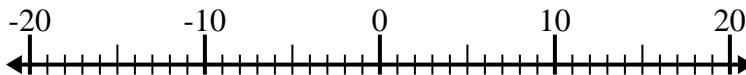


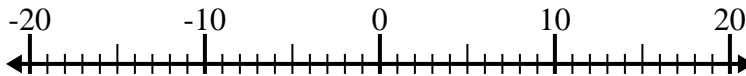


Resolver cada problema. Usar la recta numérica si lo necesitas.

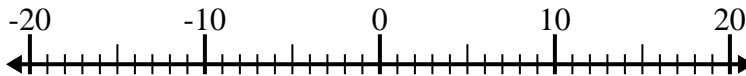
1) $(-5) + (-15) =$ _____



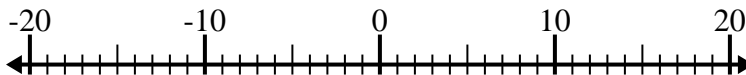
2) $9 + (-1) =$ _____



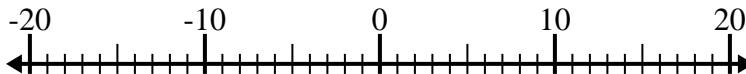
3) $(-2) + 10 =$ _____



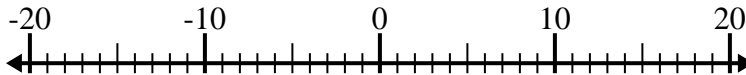
4) $(-10) + (-7) =$ _____



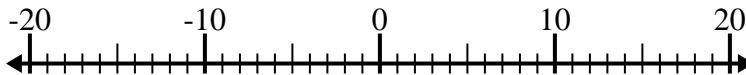
5) $(-4) - 14 =$ _____



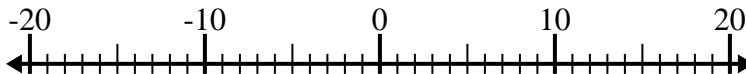
6) $(-1) + (-11) =$ _____



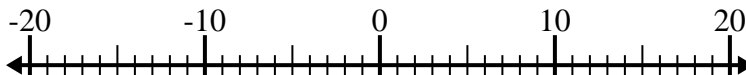
7) $5 - (-10) =$ _____



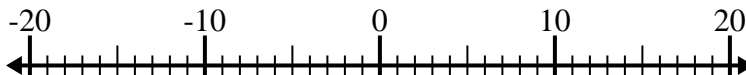
8) $(-3) + 10 =$ _____



9) $12 - (-3) =$ _____



10) $8 + (-3) =$ _____



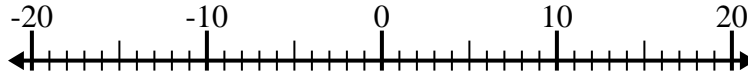
Respuestas

1. _____
2. _____
3. _____
4. _____
5. _____
6. _____
7. _____
8. _____
9. _____
10. _____

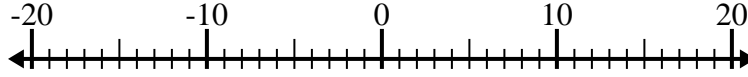


Resolver cada problema. Usar la recta numérica si lo necesitas.

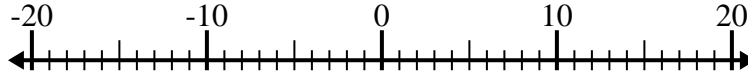
1) $(-5) + (-15) = \underline{-20}$



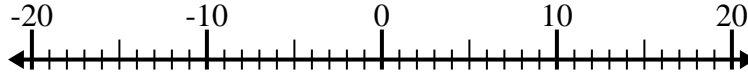
2) $9 + (-1) = \underline{8}$



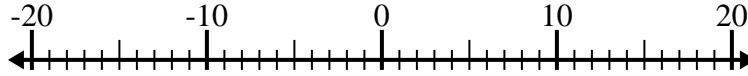
3) $(-2) + 10 = \underline{8}$



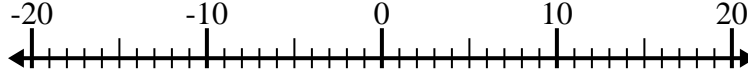
4) $(-10) + (-7) = \underline{-17}$



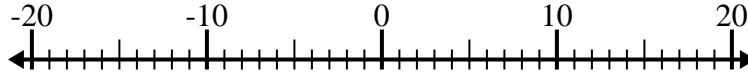
5) $(-4) - 14 = \underline{-18}$



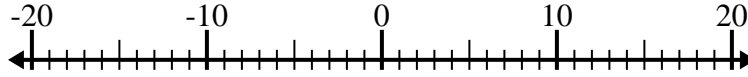
6) $(-1) + (-11) = \underline{-12}$



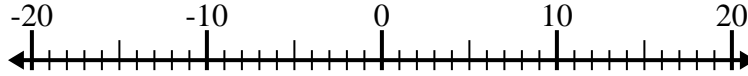
7) $5 - (-10) = \underline{15}$



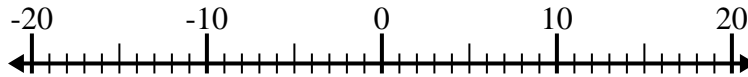
8) $(-3) + 10 = \underline{7}$



9) $12 - (-3) = \underline{15}$



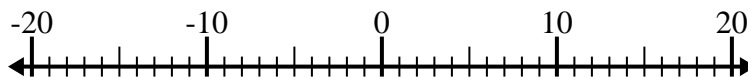
10) $8 + (-3) = \underline{5}$

**Respuestas**1. **-20**2. **8**3. **8**4. **-17**5. **-18**6. **-12**7. **15**8. **7**9. **15**10. **5**

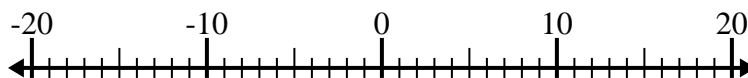


Resolver cada problema. Usar la recta numérica si lo necesitas.

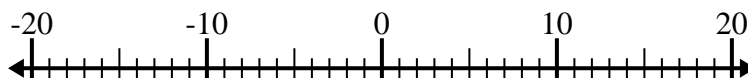
1) $5 - (-14) =$ _____



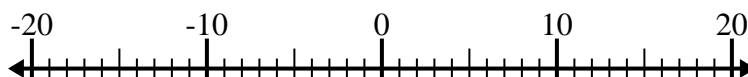
2) $(-1) + 10 =$ _____



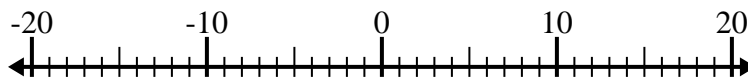
3) $15 + (-11) =$ _____



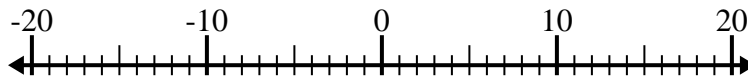
4) $3 + (-5) =$ _____



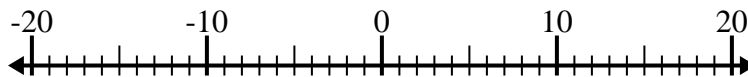
5) $5 - (-4) =$ _____



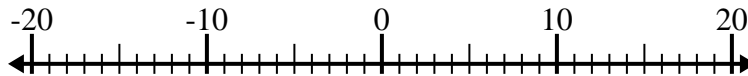
6) $(-8) + (-1) =$ _____



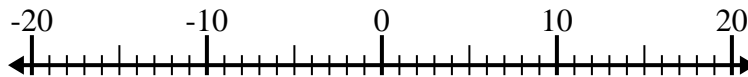
7) $14 - (-5) =$ _____



8) $(-7) - (-8) =$ _____



9) $(-12) - (-1) =$ _____



10) $8 - (-3) =$ _____



Respuestas

1. _____

2. _____

3. _____

4. _____

5. _____

6. _____

7. _____

8. _____

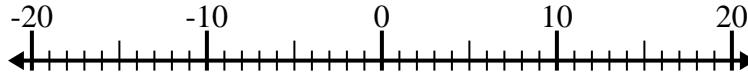
9. _____

10. _____

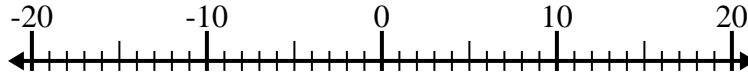


Resolver cada problema. Usar la recta numérica si lo necesitas.

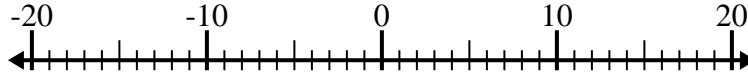
1) $5 - (-14) = \underline{19}$



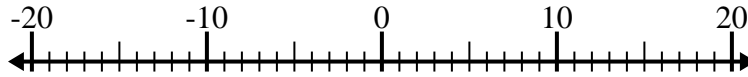
2) $(-1) + 10 = \underline{9}$



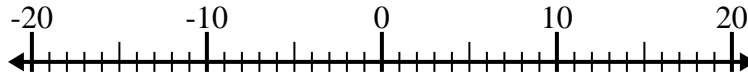
3) $15 + (-11) = \underline{4}$



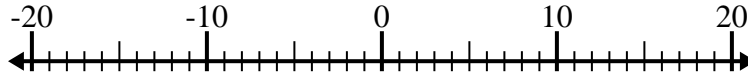
4) $3 + (-5) = \underline{-2}$



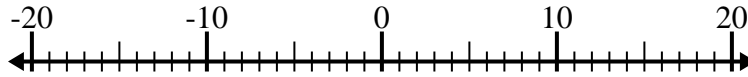
5) $5 - (-4) = \underline{9}$



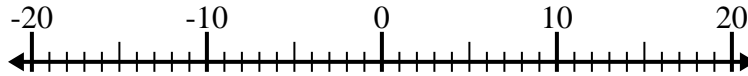
6) $(-8) + (-1) = \underline{-9}$



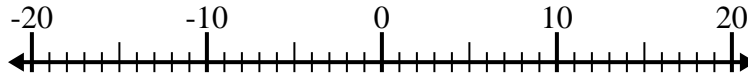
7) $14 - (-5) = \underline{19}$



8) $(-7) - (-8) = \underline{1}$



9) $(-12) - (-1) = \underline{-11}$



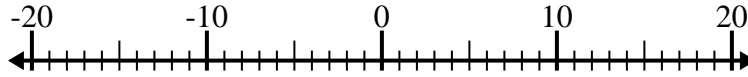
10) $8 - (-3) = \underline{11}$

**Respuestas**1. 192. 93. 44. -25. 96. -97. 198. 19. -1110. 11

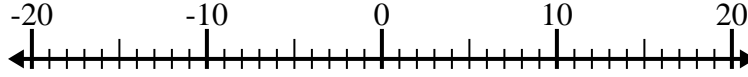


Resolver cada problema. Usar la recta numérica si lo necesitas.

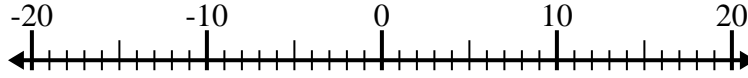
1) $(-8) + (-6) =$ _____



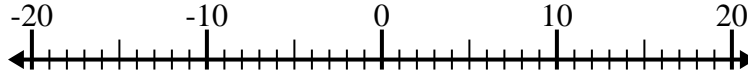
2) $(-3) - 15 =$ _____



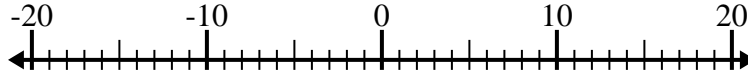
3) $3 + (-8) =$ _____



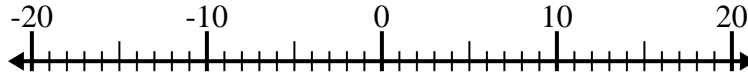
4) $(-2) + (-11) =$ _____



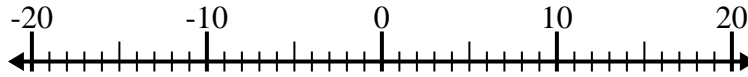
5) $(-10) - 4 =$ _____



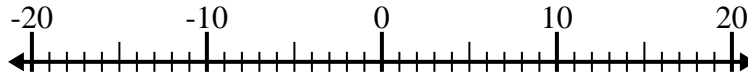
6) $(-9) - (-5) =$ _____



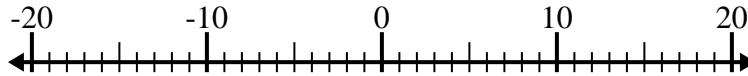
7) $(-3) + 7 =$ _____



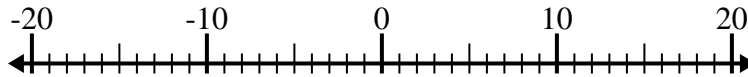
8) $7 + (-6) =$ _____



9) $6 - (-8) =$ _____



10) $(-3) - 1 =$ _____



Respuestas

1. _____

2. _____

3. _____

4. _____

5. _____

6. _____

7. _____

8. _____

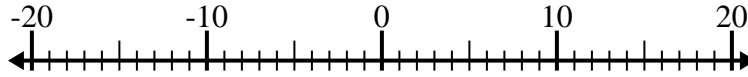
9. _____

10. _____

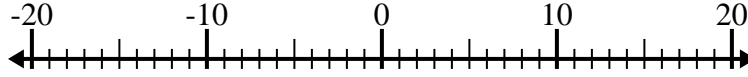


Resolver cada problema. Usar la recta numérica si lo necesitas.

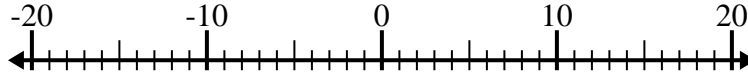
1) $(-8) + (-6) = \underline{-14}$



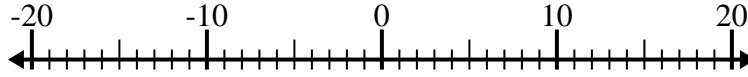
2) $(-3) - 15 = \underline{-18}$



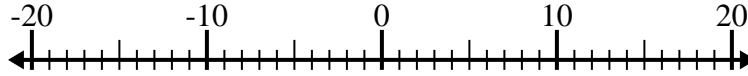
3) $3 + (-8) = \underline{-5}$



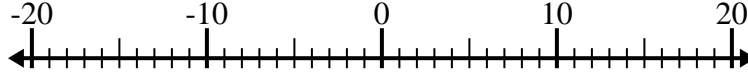
4) $(-2) + (-11) = \underline{-13}$



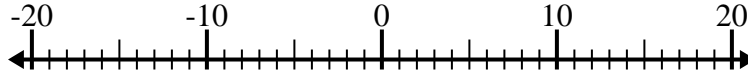
5) $(-10) - 4 = \underline{-14}$



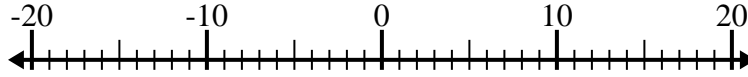
6) $(-9) - (-5) = \underline{-4}$



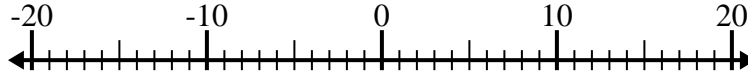
7) $(-3) + 7 = \underline{4}$



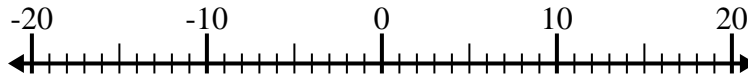
8) $7 + (-6) = \underline{1}$



9) $6 - (-8) = \underline{14}$



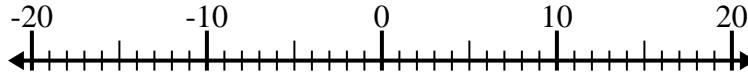
10) $(-3) - 1 = \underline{-4}$

**Respuestas**1. **-14**2. **-18**3. **-5**4. **-13**5. **-14**6. **-4**7. **4**8. **1**9. **14**10. **-4**

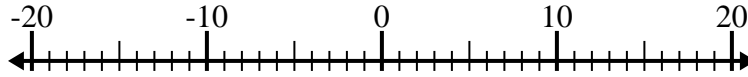


Resolver cada problema. Usar la recta numérica si lo necesitas.

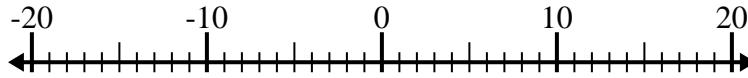
1) $(-2) + (-6) =$ _____



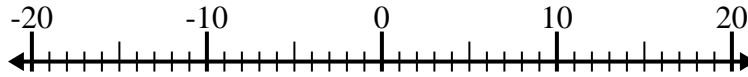
2) $6 - (-3) =$ _____



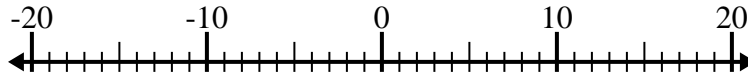
3) $(-13) - (-14) =$ _____



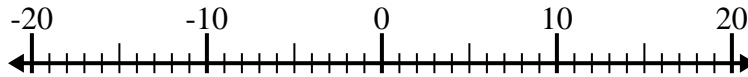
4) $(-1) + 5 =$ _____



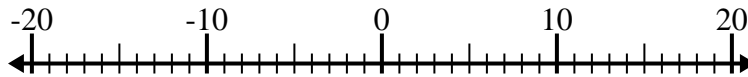
5) $5 - (-7) =$ _____



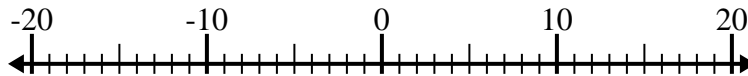
6) $(-12) - 8 =$ _____



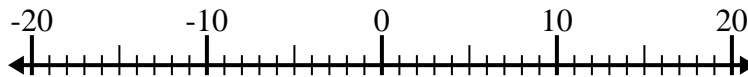
7) $(-10) - 4 =$ _____



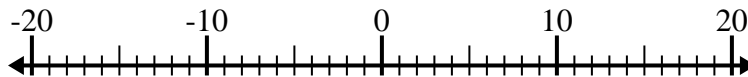
8) $6 - (-1) =$ _____



9) $1 - (-2) =$ _____



10) $(-12) + (-4) =$ _____



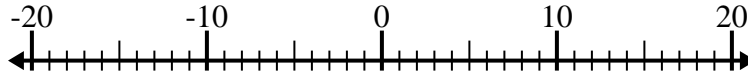
Respuestas

1. _____
2. _____
3. _____
4. _____
5. _____
6. _____
7. _____
8. _____
9. _____
10. _____

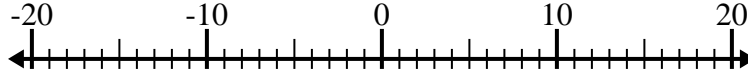


Resolver cada problema. Usar la recta numérica si lo necesitas.

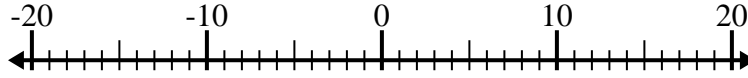
1) $(-2) + (-6) = \underline{-8}$



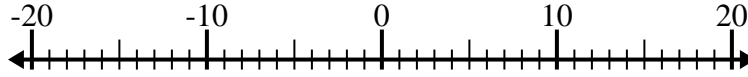
2) $6 - (-3) = \underline{9}$



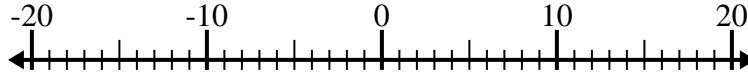
3) $(-13) - (-14) = \underline{1}$



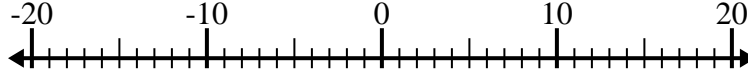
4) $(-1) + 5 = \underline{4}$



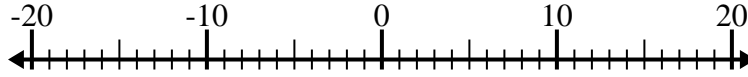
5) $5 - (-7) = \underline{12}$



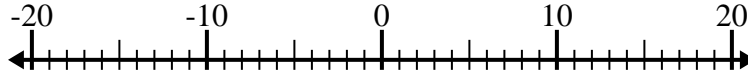
6) $(-12) - 8 = \underline{-20}$



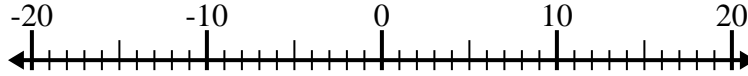
7) $(-10) - 4 = \underline{-14}$



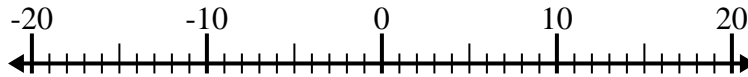
8) $6 - (-1) = \underline{7}$



9) $1 - (-2) = \underline{3}$



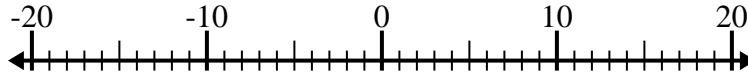
10) $(-12) + (-4) = \underline{-16}$

**Respuestas**1. **-8**2. **9**3. **1**4. **4**5. **12**6. **-20**7. **-14**8. **7**9. **3**10. **-16**

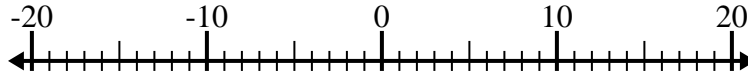


Resolver cada problema. Usar la recta numérica si lo necesitas.

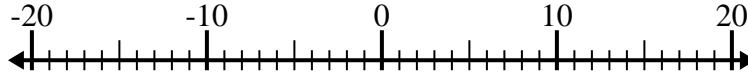
1) $(-5) - (-8) =$ _____



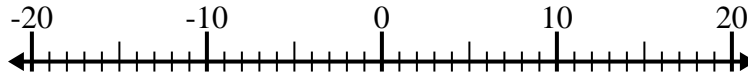
2) $10 - (-4) =$ _____



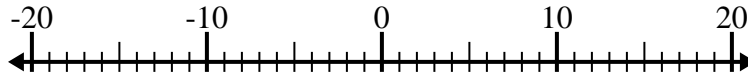
3) $(-3) - 8 =$ _____



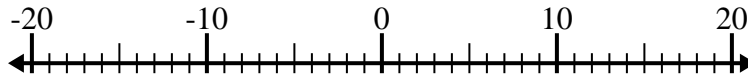
4) $11 - (-6) =$ _____



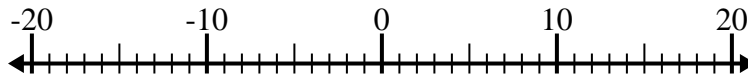
5) $9 - (-8) =$ _____



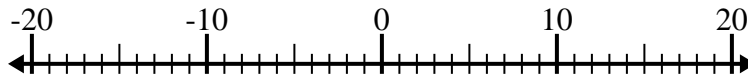
6) $(-11) - 8 =$ _____



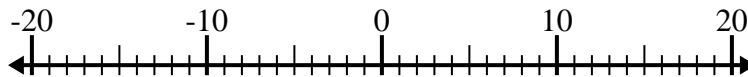
7) $(-4) + (-13) =$ _____



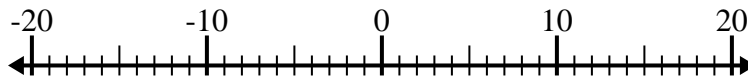
8) $(-3) - (-11) =$ _____



9) $(-5) + 6 =$ _____



10) $9 - (-7) =$ _____



Respuestas

1. _____

2. _____

3. _____

4. _____

5. _____

6. _____

7. _____

8. _____

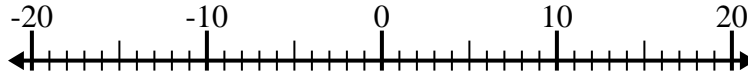
9. _____

10. _____

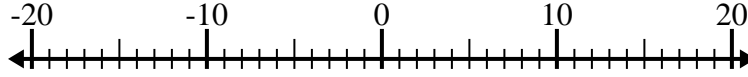


Resolver cada problema. Usar la recta numérica si lo necesitas.

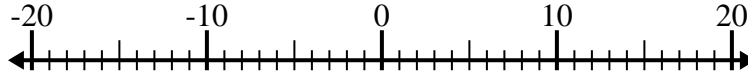
1) $(-5) - (-8) = \underline{3}$



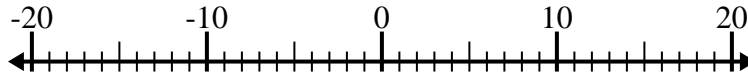
2) $10 - (-4) = \underline{14}$



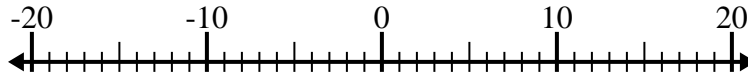
3) $(-3) - 8 = \underline{-11}$



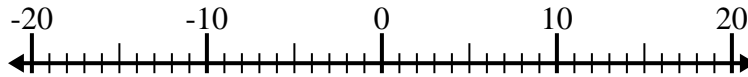
4) $11 - (-6) = \underline{17}$



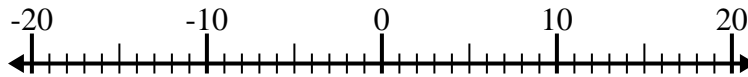
5) $9 - (-8) = \underline{17}$



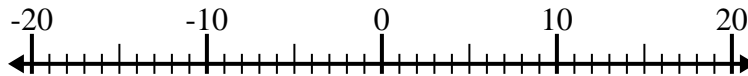
6) $(-11) - 8 = \underline{-19}$



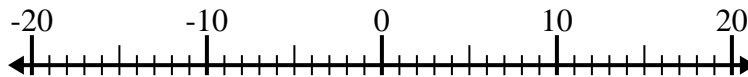
7) $(-4) + (-13) = \underline{-17}$



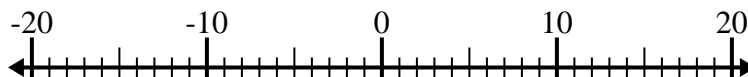
8) $(-3) - (-11) = \underline{8}$



9) $(-5) + 6 = \underline{1}$



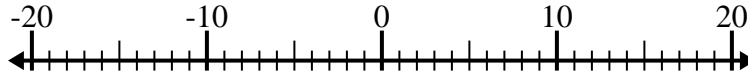
10) $9 - (-7) = \underline{16}$

**Respuestas**1. 32. 143. -114. 175. 176. -197. -178. 89. 110. 16

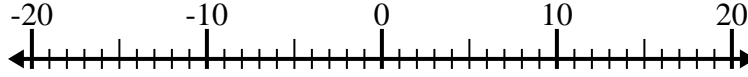


Resolver cada problema. Usar la recta numérica si lo necesitas.

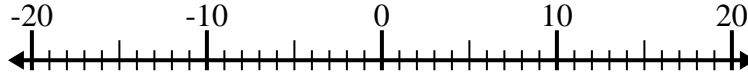
1) $(-12) - (-15) =$ _____



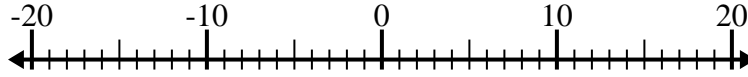
2) $6 - (-3) =$ _____



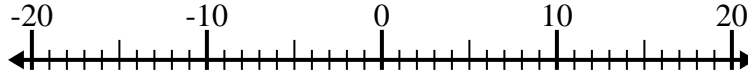
3) $(-1) - 11 =$ _____



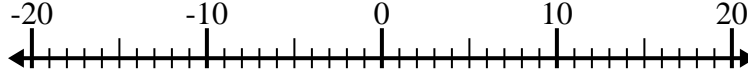
4) $2 + (-12) =$ _____



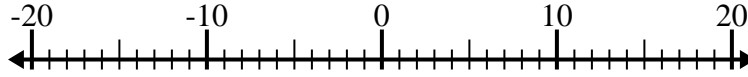
5) $8 - (-2) =$ _____



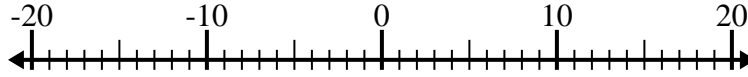
6) $9 - (-11) =$ _____



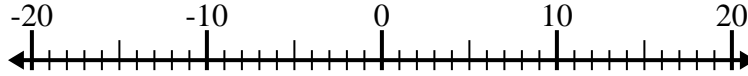
7) $(-2) - (-15) =$ _____



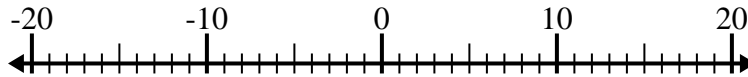
8) $(-2) - 7 =$ _____



9) $(-1) + 8 =$ _____



10) $(-11) + (-5) =$ _____



Respuestas

1. _____

2. _____

3. _____

4. _____

5. _____

6. _____

7. _____

8. _____

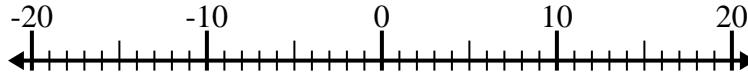
9. _____

10. _____

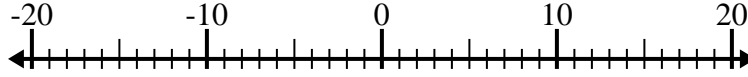


Resolver cada problema. Usar la recta numérica si lo necesitas.

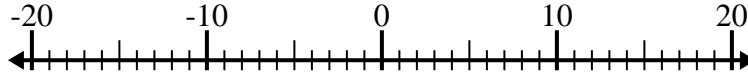
1) $(-12) - (-15) = \underline{3}$



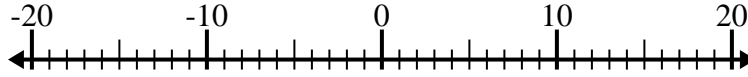
2) $6 - (-3) = \underline{9}$



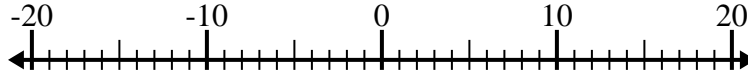
3) $(-1) - 11 = \underline{-12}$



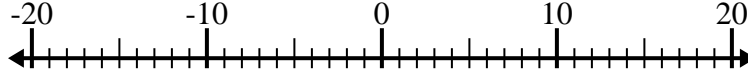
4) $2 + (-12) = \underline{-10}$



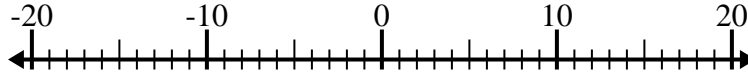
5) $8 - (-2) = \underline{10}$



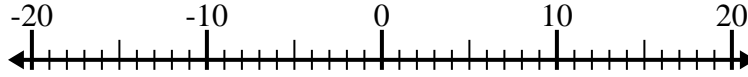
6) $9 - (-11) = \underline{20}$



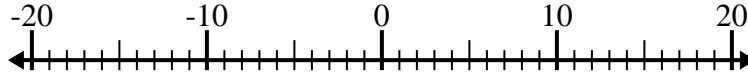
7) $(-2) - (-15) = \underline{13}$



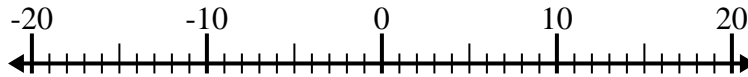
8) $(-2) - 7 = \underline{-9}$



9) $(-1) + 8 = \underline{7}$



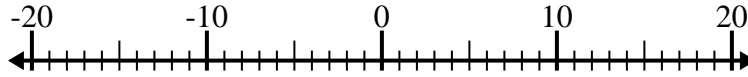
10) $(-11) + (-5) = \underline{-16}$

**Respuestas**1. 32. 93. -124. -105. 106. 207. 138. -99. 710. -16

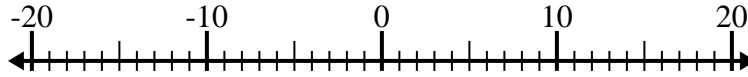


Resolver cada problema. Usar la recta numérica si lo necesitas.

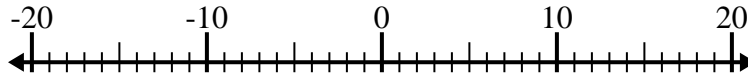
1) $(-6) - 9 =$ _____



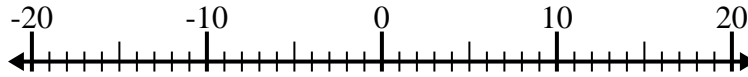
2) $10 - (-5) =$ _____



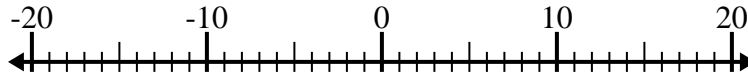
3) $(-4) + 6 =$ _____



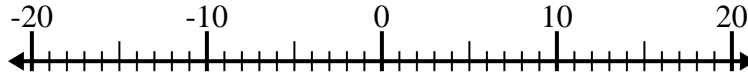
4) $1 - (-9) =$ _____



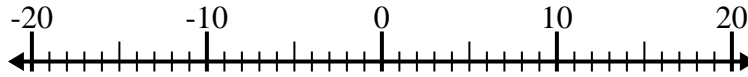
5) $(-2) + (-9) =$ _____



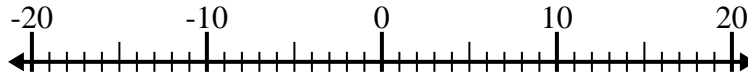
6) $(-11) - (-10) =$ _____



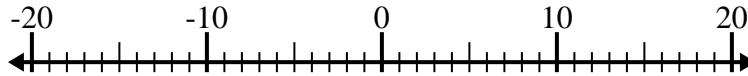
7) $(-13) - (-9) =$ _____



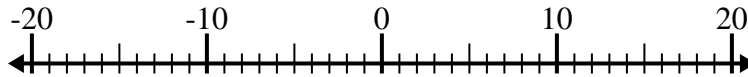
8) $(-15) - (-9) =$ _____



9) $(-11) - 4 =$ _____



10) $(-5) + (-14) =$ _____



Respuestas

1. _____

2. _____

3. _____

4. _____

5. _____

6. _____

7. _____

8. _____

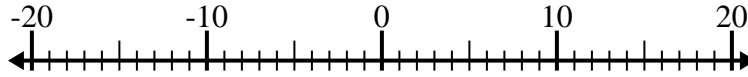
9. _____

10. _____

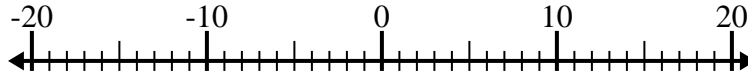


Resolver cada problema. Usar la recta numérica si lo necesitas.

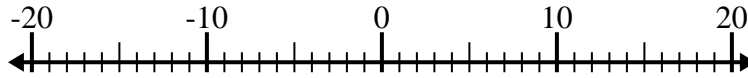
1) $(-6) - 9 = \underline{-15}$



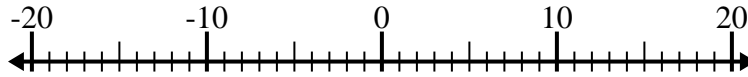
2) $10 - (-5) = \underline{15}$



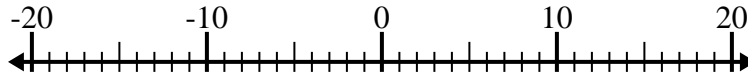
3) $(-4) + 6 = \underline{2}$



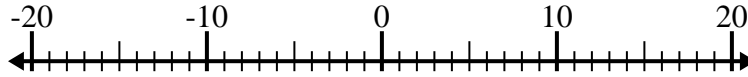
4) $1 - (-9) = \underline{10}$



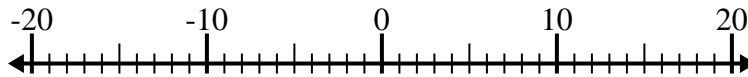
5) $(-2) + (-9) = \underline{-11}$



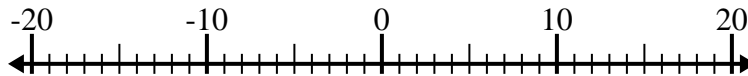
6) $(-11) - (-10) = \underline{-1}$



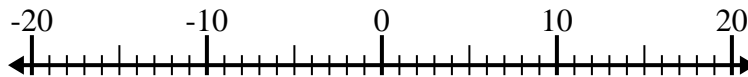
7) $(-13) - (-9) = \underline{-4}$



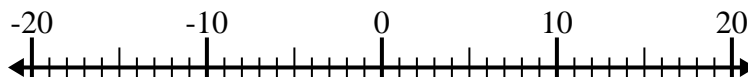
8) $(-15) - (-9) = \underline{-6}$



9) $(-11) - 4 = \underline{-15}$



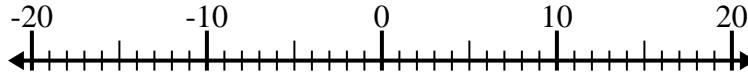
10) $(-5) + (-14) = \underline{-19}$

**Respuestas**1. **-15**2. **15**3. **2**4. **10**5. **-11**6. **-1**7. **-4**8. **-6**9. **-15**10. **-19**

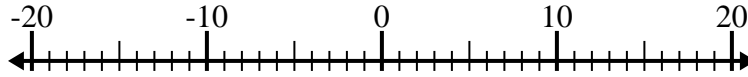


Resolver cada problema. Usar la recta numérica si lo necesitas.

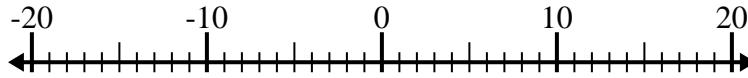
1) $9 - (-2) =$ _____



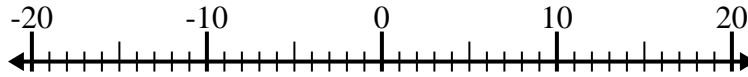
2) $9 - (-5) =$ _____



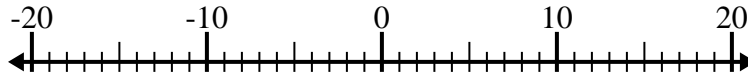
3) $7 + (-14) =$ _____



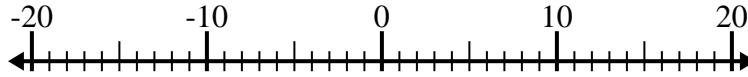
4) $(-9) - (-4) =$ _____



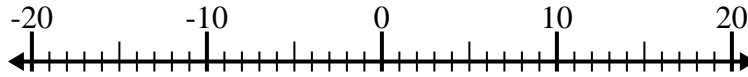
5) $(-1) - 13 =$ _____



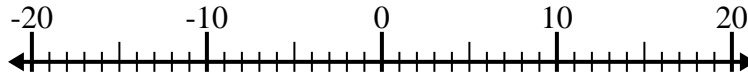
6) $5 - (-8) =$ _____



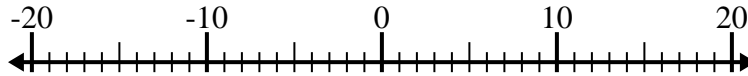
7) $(-1) + 10 =$ _____



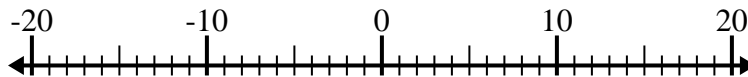
8) $(-8) + (-6) =$ _____



9) $(-4) - 13 =$ _____



10) $13 + (-5) =$ _____



Respuestas

1. _____

2. _____

3. _____

4. _____

5. _____

6. _____

7. _____

8. _____

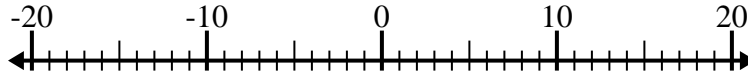
9. _____

10. _____

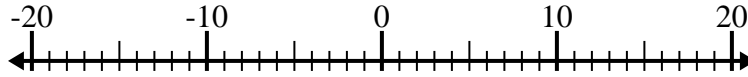


Resolver cada problema. Usar la recta numérica si lo necesitas.

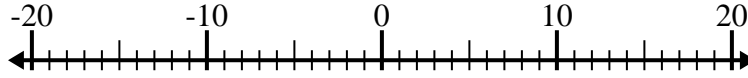
1) $9 - (-2) = \underline{11}$



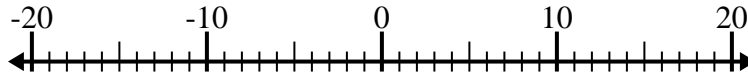
2) $9 - (-5) = \underline{14}$



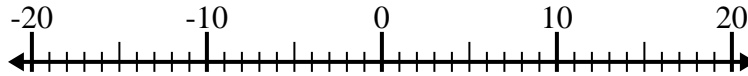
3) $7 + (-14) = \underline{-7}$



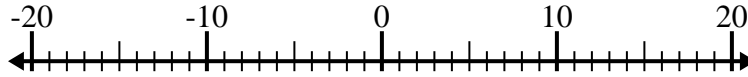
4) $(-9) - (-4) = \underline{-5}$



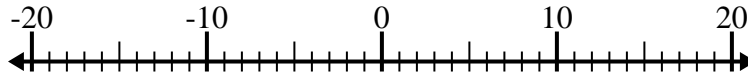
5) $(-1) - 13 = \underline{-14}$



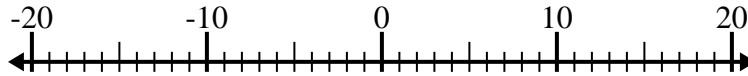
6) $5 - (-8) = \underline{13}$



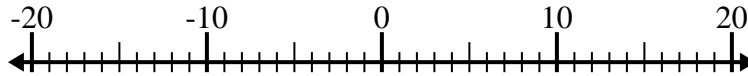
7) $(-1) + 10 = \underline{9}$



8) $(-8) + (-6) = \underline{-14}$



9) $(-4) - 13 = \underline{-17}$



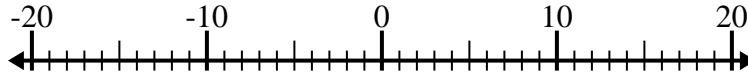
10) $13 + (-5) = \underline{8}$

**Respuestas**1. 112. 143. -74. -55. -146. 137. 98. -149. -1710. 8

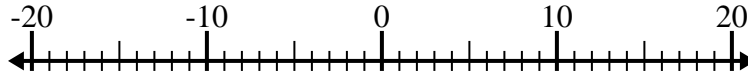


Resolver cada problema. Usar la recta numérica si lo necesitas.

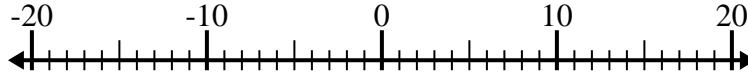
1) $(-8) - (-11) =$ _____



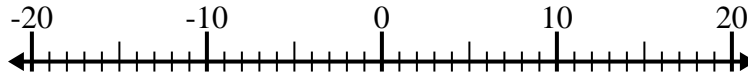
2) $(-2) - (-1) =$ _____



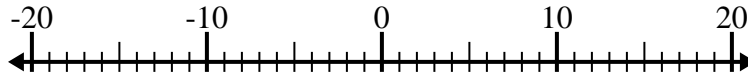
3) $(-15) - 3 =$ _____



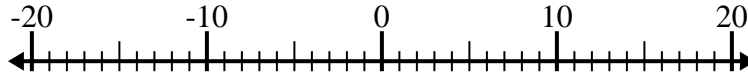
4) $8 - (-9) =$ _____



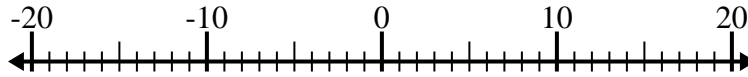
5) $2 + (-15) =$ _____



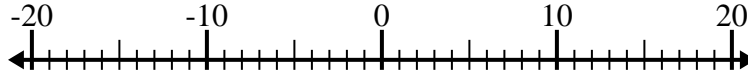
6) $(-2) - 14 =$ _____



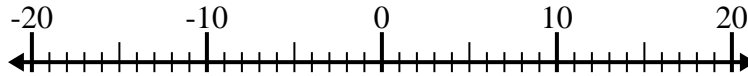
7) $4 - (-7) =$ _____



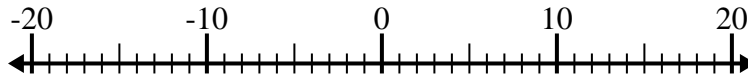
8) $1 + (-10) =$ _____



9) $(-8) + (-5) =$ _____



10) $(-2) + (-11) =$ _____



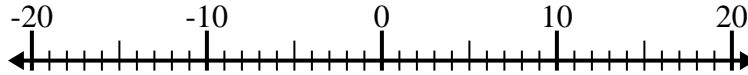
Respuestas

1. _____
2. _____
3. _____
4. _____
5. _____
6. _____
7. _____
8. _____
9. _____
10. _____

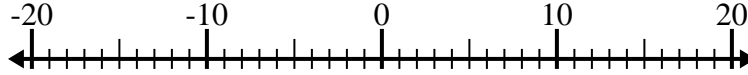


Resolver cada problema. Usar la recta numérica si lo necesitas.

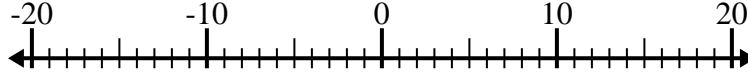
1) $(-8) - (-11) = \underline{3}$



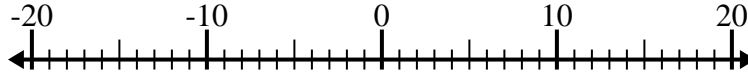
2) $(-2) - (-1) = \underline{-1}$



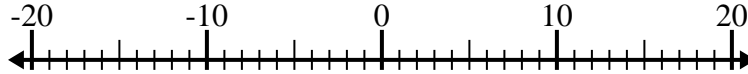
3) $(-15) - 3 = \underline{-18}$



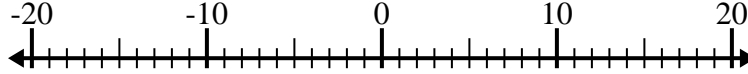
4) $8 - (-9) = \underline{17}$



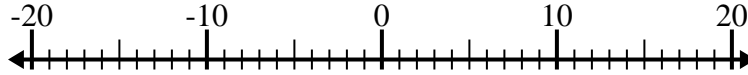
5) $2 + (-15) = \underline{-13}$



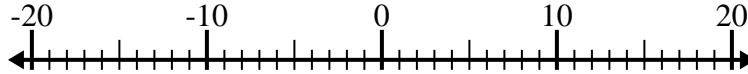
6) $(-2) - 14 = \underline{-16}$



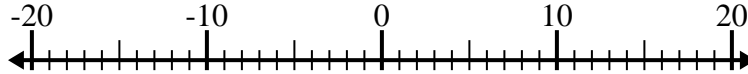
7) $4 - (-7) = \underline{11}$



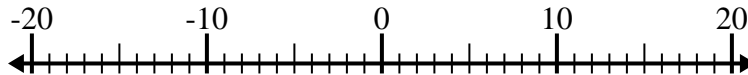
8) $1 + (-10) = \underline{-9}$



9) $(-8) + (-5) = \underline{-13}$



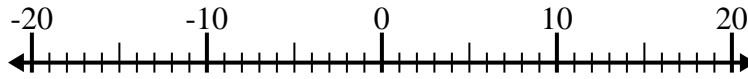
10) $(-2) + (-11) = \underline{-13}$

**Respuestas**1. 32. -13. -184. 175. -136. -167. 118. -99. -1310. -13

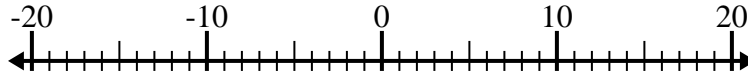


Resolver cada problema. Usar la recta numérica si lo necesitas.

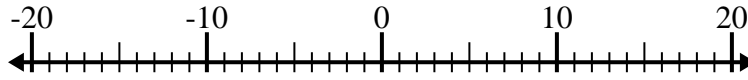
1) $7 + (-2) =$ _____



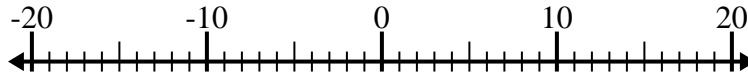
2) $(-9) - 3 =$ _____



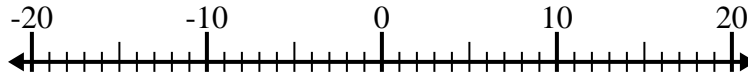
3) $(-11) + (-7) =$ _____



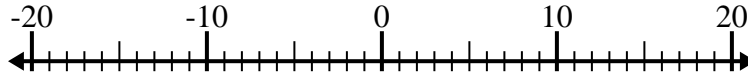
4) $(-7) + (-1) =$ _____



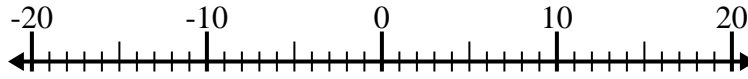
5) $(-11) + (-4) =$ _____



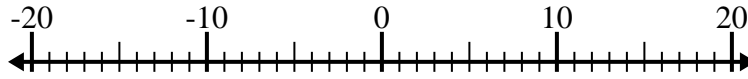
6) $(-13) - 4 =$ _____



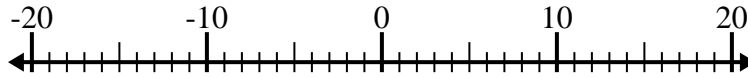
7) $(-14) + 11 =$ _____



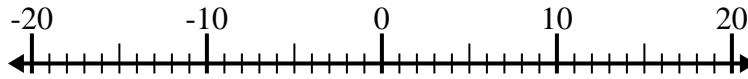
8) $6 - (-10) =$ _____



9) $(-12) + 7 =$ _____



10) $4 - (-2) =$ _____



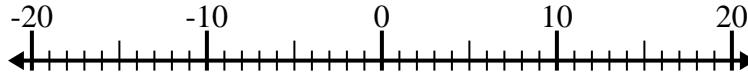
Respuestas

1. _____
2. _____
3. _____
4. _____
5. _____
6. _____
7. _____
8. _____
9. _____
10. _____

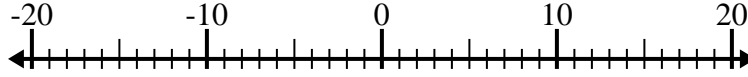


Resolver cada problema. Usar la recta numérica si lo necesitas.

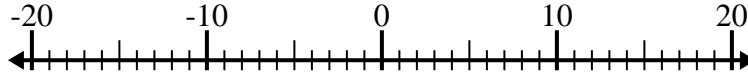
1) $7 + (-2) = \underline{5}$



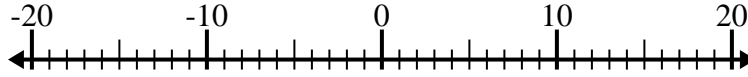
2) $(-9) - 3 = \underline{-12}$



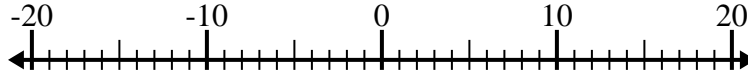
3) $(-11) + (-7) = \underline{-18}$



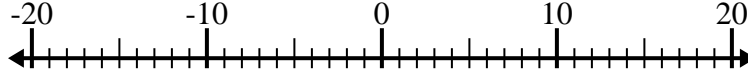
4) $(-7) + (-1) = \underline{-8}$



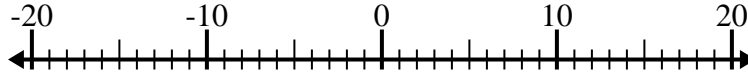
5) $(-11) + (-4) = \underline{-15}$



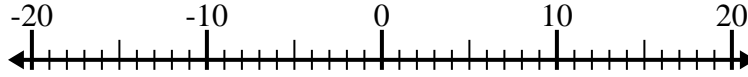
6) $(-13) - 4 = \underline{-17}$



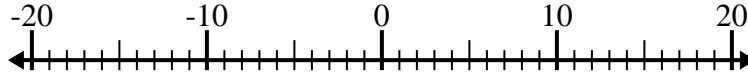
7) $(-14) + 11 = \underline{-3}$



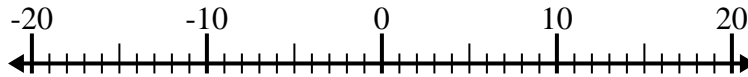
8) $6 - (-10) = \underline{16}$



9) $(-12) + 7 = \underline{-5}$



10) $4 - (-2) = \underline{6}$

**Respuestas**1. 52. -123. -184. -85. -156. -177. -38. 169. -510. 6