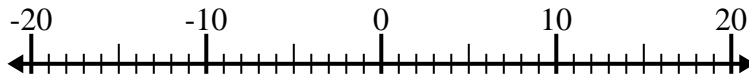


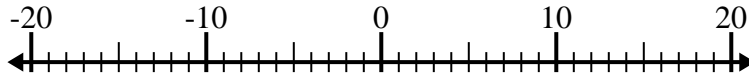


Resolver cada problema. Usar la recta numérica si lo necesitas.

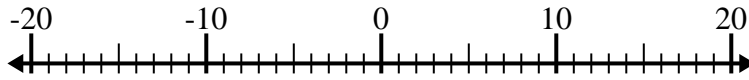
1) $(-12) + 7 =$ _____



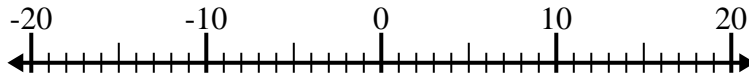
2) $5 - (-15) =$ _____



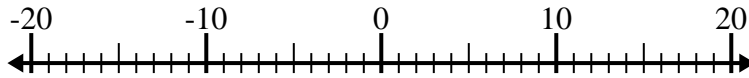
3) $(-13) - 3 =$ _____



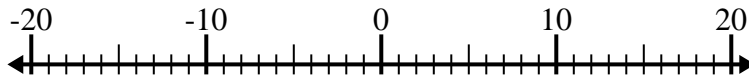
4) $(-2) - (-11) =$ _____



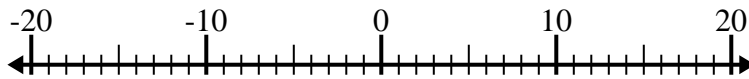
5) $(-4) + (-1) =$ _____



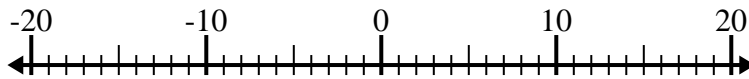
6) $3 + (-7) =$ _____



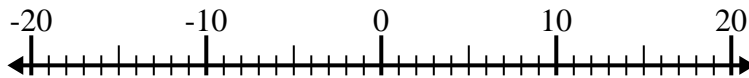
7) $9 - (-2) =$ _____



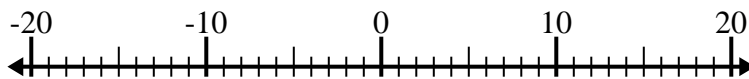
8) $9 - (-10) =$ _____



9) $(-4) - 7 =$ _____



10) $8 + (-6) =$ _____



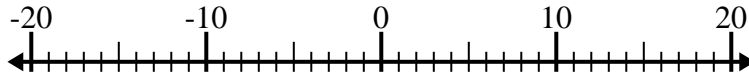
Respuestas

1. _____
2. _____
3. _____
4. _____
5. _____
6. _____
7. _____
8. _____
9. _____
10. _____

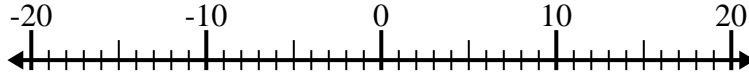


Resolver cada problema. Usar la recta numérica si lo necesitas.

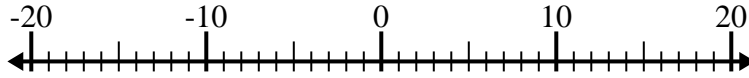
1) $(-12) + 7 = \underline{-5}$



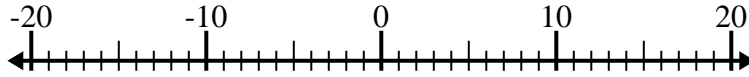
2) $5 - (-15) = \underline{20}$



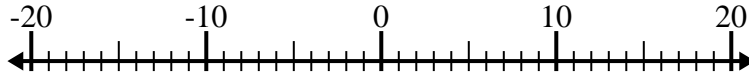
3) $(-13) - 3 = \underline{-16}$



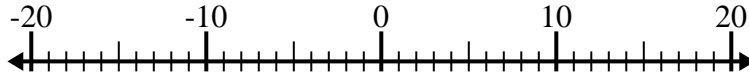
4) $(-2) - (-11) = \underline{9}$



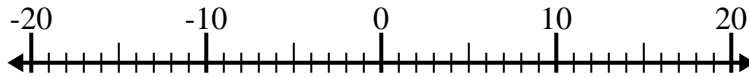
5) $(-4) + (-1) = \underline{-5}$



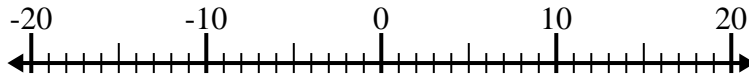
6) $3 + (-7) = \underline{-4}$



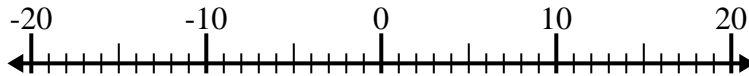
7) $9 - (-2) = \underline{11}$



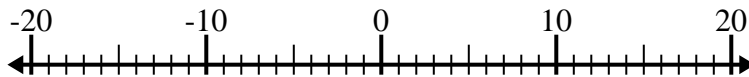
8) $9 - (-10) = \underline{19}$



9) $(-4) - 7 = \underline{-11}$



10) $8 + (-6) = \underline{2}$

**Respuestas**1. **-5**2. **20**3. **-16**4. **9**5. **-5**6. **-4**7. **11**8. **19**9. **-11**10. **2**