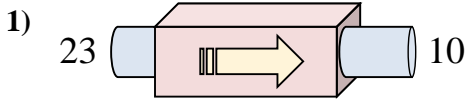
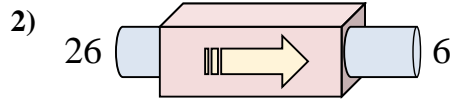




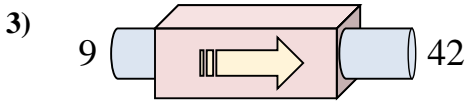
Determinar cuál regla está usando la máquina de funciones.



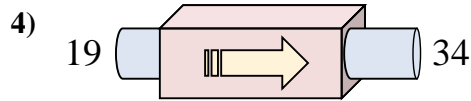
- A. Add 17
- B. Restar 13
- C. Subtract 17
- D. Subtract 8



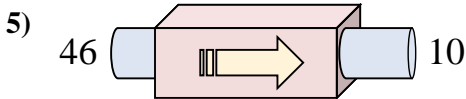
- A. Subtract 18
- B. Subtract 25
- C. Add 20
- D. Restar 20



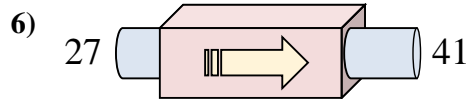
- A. Subtract 28
- B. Add 29
- C. Sumar 33
- D. Add 37



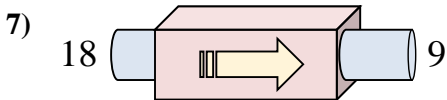
- A. Add 13
- B. Subtract 16
- C. Add 12
- D. Sumar 15



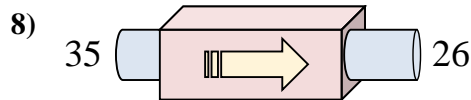
- A. Subtract 40
- B. Subtract 41
- C. Restar 36
- D. Subtract 34



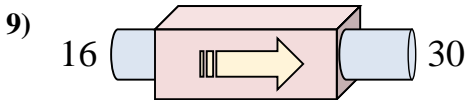
- A. Subtract 12
- B. Add 9
- C. Subtract 17
- D. Sumar 14



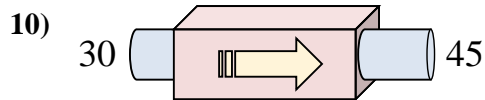
- A. Subtract 5
- B. Restar 9
- C. Add 10
- D. Subtract 14



- A. Subtract 12
- B. Subtract 5
- C. Add 8
- D. Restar 9



- A. Add 14
- B. Sumar 14
- C. Add 10
- D. Add 16



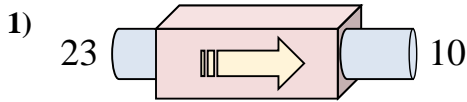
- A. Add 13
- B. Add 18
- C. Subtract 12
- D. Sumar 15

Respuestas

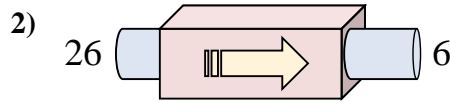
1. _____
2. _____
3. _____
4. _____
5. _____
6. _____
7. _____
8. _____
9. _____
10. _____



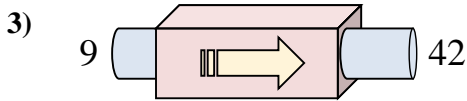
Determinar cuál regla está usando la máquina de funciones.



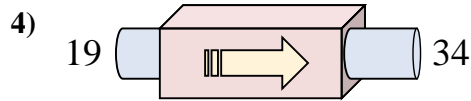
- A. Add 17
- B. Restar 13
- C. Subtract 17
- D. Subtract 8



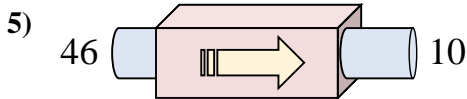
- A. Subtract 18
- B. Subtract 25
- C. Add 20
- D. Restar 20



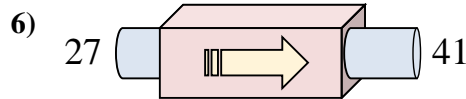
- A. Subtract 28
- B. Add 29
- C. Sumar 33
- D. Add 37



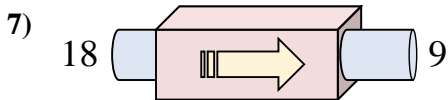
- A. Add 13
- B. Subtract 16
- C. Add 12
- D. Sumar 15



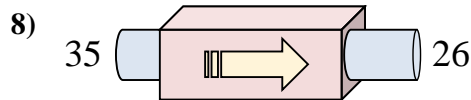
- A. Subtract 40
- B. Subtract 41
- C. Restar 36
- D. Subtract 34



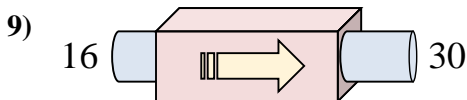
- A. Subtract 12
- B. Add 9
- C. Subtract 17
- D. Sumar 14



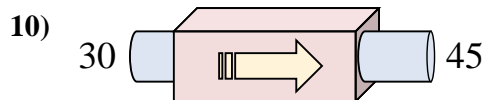
- A. Subtract 5
- B. Restar 9
- C. Add 10
- D. Subtract 14



- A. Subtract 12
- B. Subtract 5
- C. Add 8
- D. Restar 9



- A. Add 14
- B. Sumar 14
- C. Add 10
- D. Add 16



- A. Add 13
- B. Add 18
- C. Subtract 12
- D. Sumar 15

Respuestas

- 1. **B**
- 2. **D**
- 3. **C**
- 4. **D**
- 5. **C**
- 6. **D**
- 7. **B**
- 8. **D**
- 9. **B**
- 10. **D**