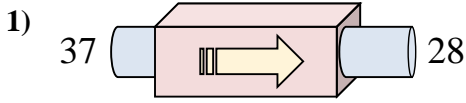
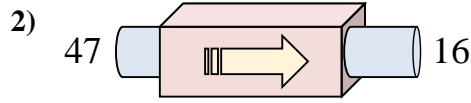




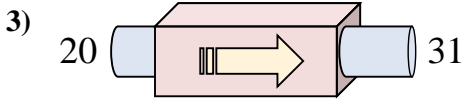
Determinar cuál regla está usando la máquina de funciones.



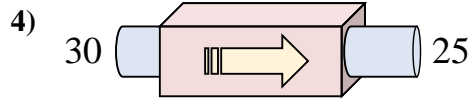
- A. Subtract 12
- B. Add 7
- C. Restar 9
- D. Subtract 8



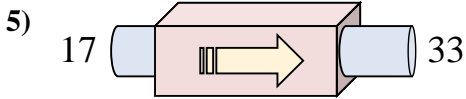
- A. Restar 31
- B. Subtract 36
- C. Add 27
- D. Add 36



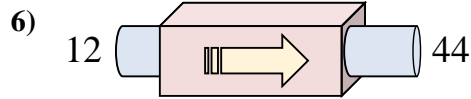
- A. Subtract 15
- B. Add 11
- C. Add 16
- D. Sumar 11



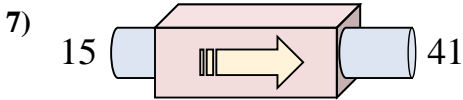
- A. Restar 5
- B. Subtract 8
- C. Add 3
- D. Subtract 4



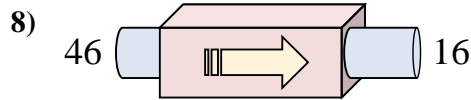
- A. Add 11
- B. Add 15
- C. Sumar 16
- D. Add 20



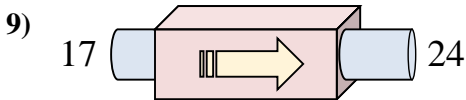
- A. Add 28
- B. Sumar 32
- C. Add 33
- D. Subtract 35



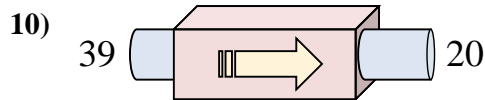
- A. Add 30
- B. Sumar 26
- C. Subtract 27
- D. Add 25



- A. Restar 30
- B. Subtract 31
- C. Subtract 34
- D. Subtract 25



- A. Subtract 9
- B. Sumar 7
- C. Add 10
- D. Add 6



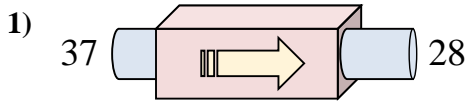
- A. Subtract 16
- B. Restar 19
- C. Add 20
- D. Subtract 17

Respuestas

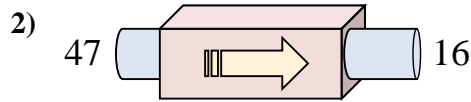
1. _____
2. _____
3. _____
4. _____
5. _____
6. _____
7. _____
8. _____
9. _____
10. _____



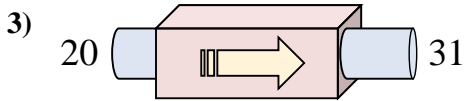
Determinar cuál regla está usando la máquina de funciones.



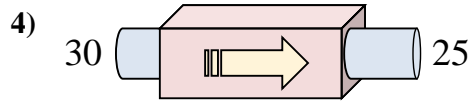
- A. Subtract 12
- B. Add 7
- C. Restar 9
- D. Subtract 8



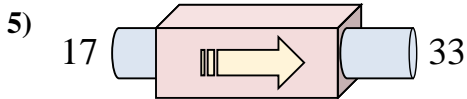
- A. Restar 31
- B. Subtract 36
- C. Add 27
- D. Add 36



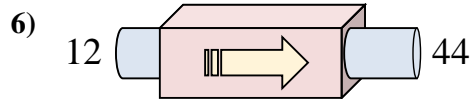
- A. Subtract 15
- B. Add 11
- C. Add 16
- D. Sumar 11



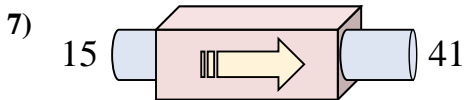
- A. Restar 5
- B. Subtract 8
- C. Add 3
- D. Subtract 4



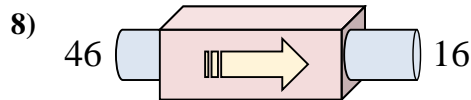
- A. Add 11
- B. Add 15
- C. Sumar 16
- D. Add 20



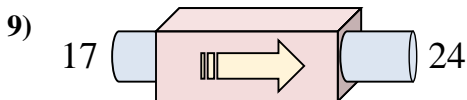
- A. Add 28
- B. Sumar 32
- C. Add 33
- D. Subtract 35



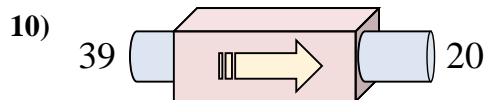
- A. Add 30
- B. Sumar 26
- C. Subtract 27
- D. Add 25



- A. Restar 30
- B. Subtract 31
- C. Subtract 34
- D. Subtract 25



- A. Subtract 9
- B. Sumar 7
- C. Add 10
- D. Add 6



- A. Subtract 16
- B. Restar 19
- C. Add 20
- D. Subtract 17

Respuestas

- 1. **C**
- 2. **A**
- 3. **D**
- 4. **A**
- 5. **C**
- 6. **B**
- 7. **B**
- 8. **A**
- 9. **B**
- 10. **B**