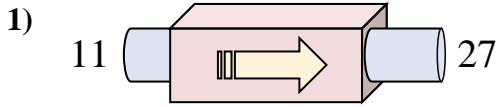
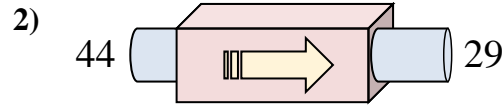




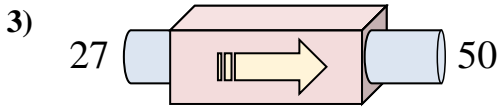
Determinar cuál regla está usando la máquina de funciones.



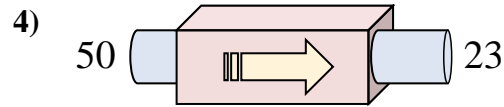
- A. Sumar 16
- B. Sumar 12
- C. Sumar 21
- D. Sumar 20



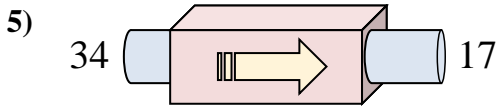
- A. Sumar 17
- B. Restar 14
- C. Restar 15
- D. Sumar 11



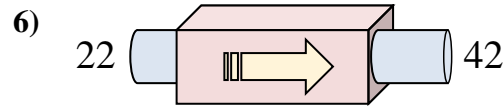
- A. Sumar 25
- B. Sumar 23
- C. Restar 24
- D. Sumar 21



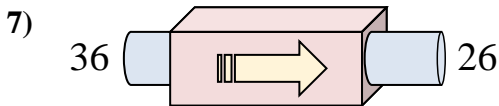
- A. Restar 27
- B. Restar 26
- C. Restar 22
- D. Sumar 22



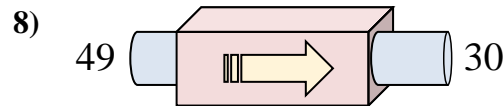
- A. Sumar 16
- B. Restar 22
- C. Restar 17
- D. Restar 19



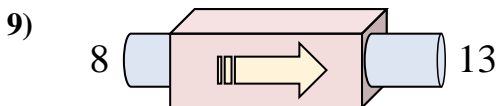
- A. Sumar 17
- B. Sumar 22
- C. Restar 15
- D. Sumar 20



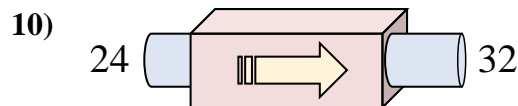
- A. Restar 10
- B. Sumar 15
- C. Restar 11
- D. Restar 9



- A. Sumar 20
- B. Restar 15
- C. Restar 19
- D. Restar 16



- A. Sumar 3
- B. Sumar 5
- C. Sumar 1
- D. Restar 3



- A. Restar 10
- B. Sumar 8
- C. Sumar 5
- D. Sumar 11

**Respuestas**

1. \_\_\_\_\_

2. \_\_\_\_\_

3. \_\_\_\_\_

4. \_\_\_\_\_

5. \_\_\_\_\_

6. \_\_\_\_\_

7. \_\_\_\_\_

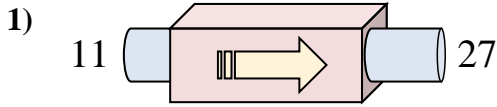
8. \_\_\_\_\_

9. \_\_\_\_\_

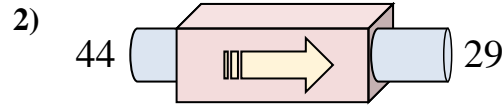
10. \_\_\_\_\_



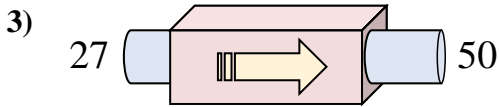
Determinar cuál regla está usando la máquina de funciones.



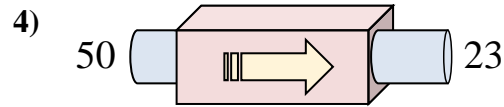
- A. Sumar 16
- B. Sumar 12
- C. Sumar 21
- D. Sumar 20



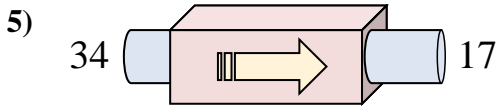
- A. Sumar 17
- B. Restar 14
- C. Restar 15
- D. Sumar 11



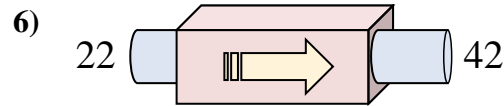
- A. Sumar 25
- B. Sumar 23
- C. Restar 24
- D. Sumar 21



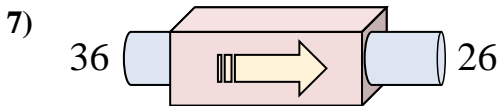
- A. Restar 27
- B. Restar 26
- C. Restar 22
- D. Sumar 22



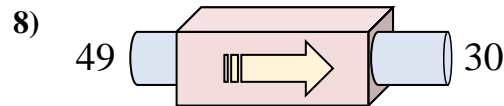
- A. Sumar 16
- B. Restar 22
- C. Restar 17
- D. Restar 19



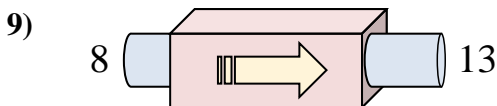
- A. Sumar 17
- B. Sumar 22
- C. Restar 15
- D. Sumar 20



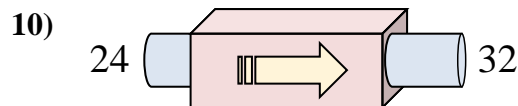
- A. Restar 10
- B. Sumar 15
- C. Restar 11
- D. Restar 9



- A. Sumar 20
- B. Restar 15
- C. Restar 19
- D. Restar 16



- A. Sumar 3
- B. Sumar 5
- C. Sumar 1
- D. Restar 3



- A. Restar 10
- B. Sumar 8
- C. Sumar 5
- D. Sumar 11

**Respuestas**

1.   **A**
2.   **C**
3.   **B**
4.   **A**
5.   **C**
6.   **D**
7.   **A**
8.   **C**
9.   **B**
10.   **B**