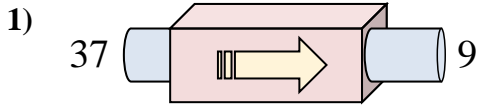
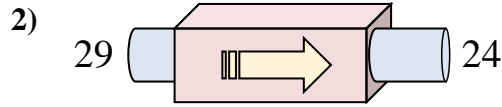




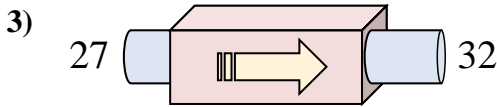
Determinar cuál regla está usando la máquina de funciones.

Respuestas

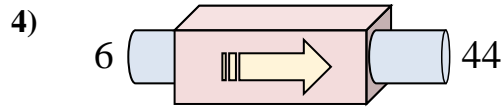
- A. Restar 28
- B. Restar 29
- C. Restar 31
- D. Restar 30



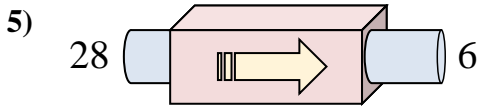
- A. Restar 5
- B. Restar 3
- C. Restar 1
- D. Sumar 9



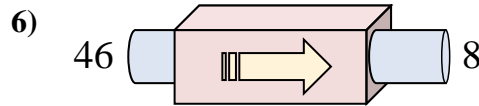
- A. Sumar 5
- B. Sumar 3
- C. Restar 5
- D. Sumar 1



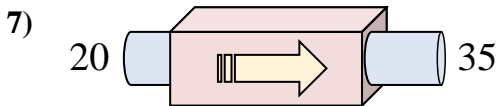
- A. Restar 34
- B. Sumar 34
- C. Sumar 40
- D. Sumar 38



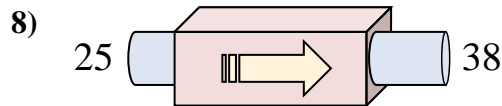
- A. Sumar 25
- B. Restar 24
- C. Restar 25
- D. Restar 22



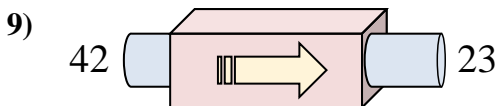
- A. Restar 38
- B. Restar 43
- C. Sumar 35
- D. Restar 35



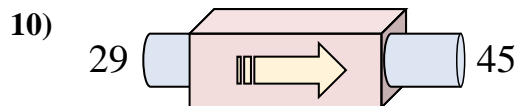
- A. Restar 19
- B. Sumar 15
- C. Sumar 13
- D. Sumar 11



- A. Restar 18
- B. Sumar 8
- C. Sumar 13
- D. Restar 11



- A. Restar 23
- B. Restar 19
- C. Restar 15
- D. Restar 22

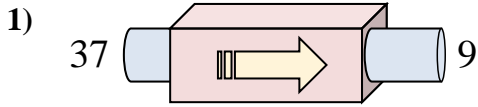


- A. Sumar 17
- B. Sumar 16
- C. Sumar 12
- D. Restar 13

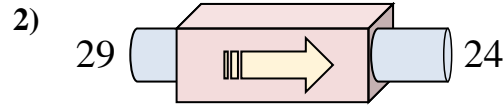
- 1. _____
- 2. _____
- 3. _____
- 4. _____
- 5. _____
- 6. _____
- 7. _____
- 8. _____
- 9. _____
- 10. _____



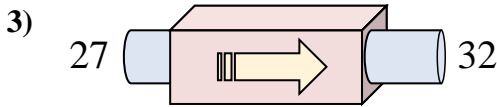
Determinar cuál regla está usando la máquina de funciones.



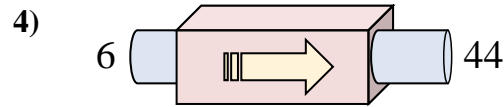
- A. Restar 28
- B. Restar 29
- C. Restar 31
- D. Restar 30



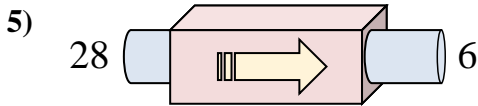
- A. Restar 5
- B. Restar 3
- C. Restar 1
- D. Sumar 9



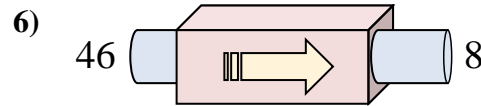
- A. Sumar 5
- B. Sumar 3
- C. Restar 5
- D. Sumar 1



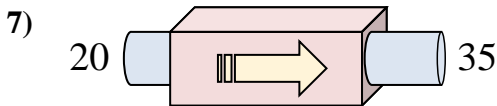
- A. Restar 34
- B. Sumar 34
- C. Sumar 40
- D. Sumar 38



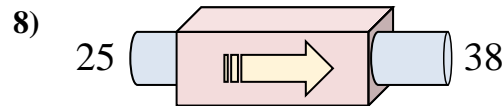
- A. Sumar 25
- B. Restar 24
- C. Restar 25
- D. Restar 22



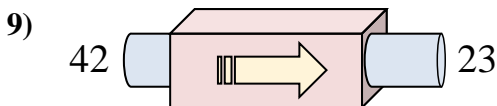
- A. Restar 38
- B. Restar 43
- C. Sumar 35
- D. Restar 35



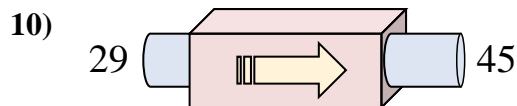
- A. Restar 19
- B. Sumar 15
- C. Sumar 13
- D. Sumar 11



- A. Restar 18
- B. Sumar 8
- C. Sumar 13
- D. Restar 11



- A. Restar 23
- B. Restar 19
- C. Restar 15
- D. Restar 22



- A. Sumar 17
- B. Sumar 16
- C. Sumar 12
- D. Restar 13

Respuestas

1. **A**
2. **A**
3. **A**
4. **D**
5. **D**
6. **A**
7. **B**
8. **C**
9. **B**
10. **B**