



Usar las rectas numéricas para redondear cada número al 100 más cercano.

Ej) 113



1) 551



2) 934



3) 549



4) 629



5) 5,424



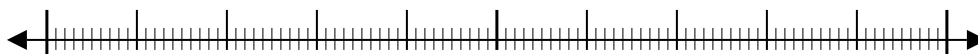
6) 7,559



7) 7,598



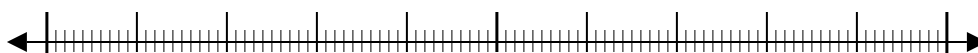
8) 1,287



9) 99,659



10) 63,179



Respuestas

Ej. 100

1. _____

2. _____

3. _____

4. _____

5. _____

6. _____

7. _____

8. _____

9. _____

10. _____

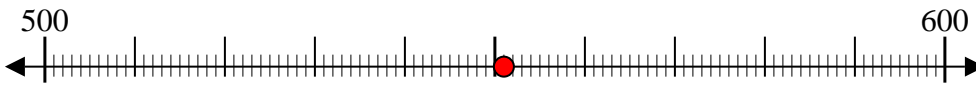


Usar las rectas numéricas para redondear cada número al 100 más cercano.

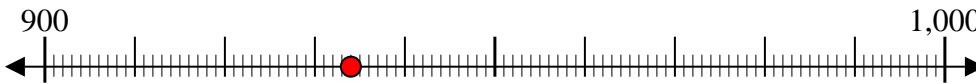
Ej) 113



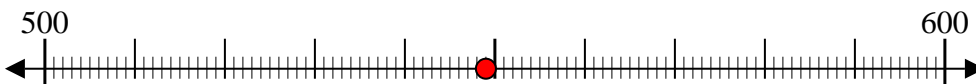
1) 551



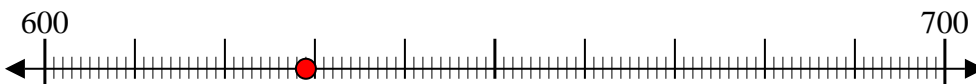
2) 934



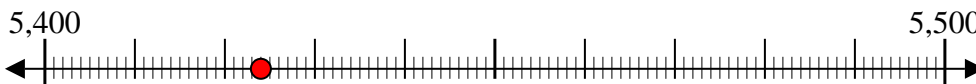
3) 549



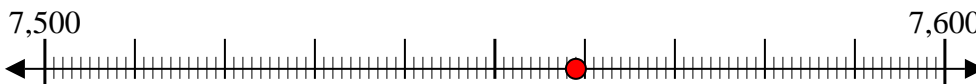
4) 629



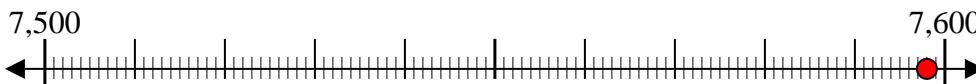
5) 5,424



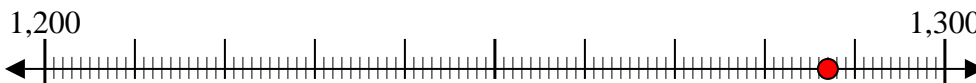
6) 7,559



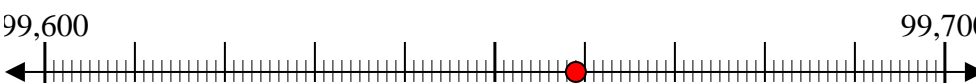
7) 7,598



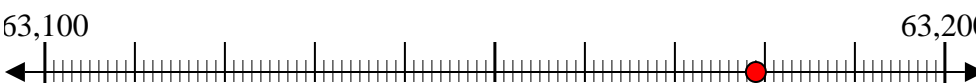
8) 1,287



9) 99,659



10) 63,179



Respuestas

Ej. 100

1. 600

2. 900

3. 500

4. 600

5. 5,400

6. 7,600

7. 7,600

8. 1,300

9. 99,700

10. 63,200