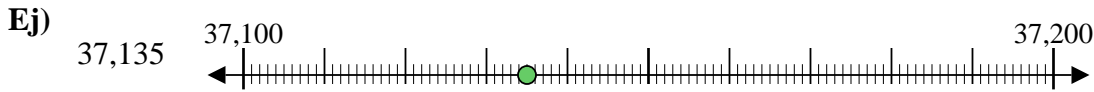




Usar las rectas numéricas para redondear cada número al 100 más cercano.



Respuestas

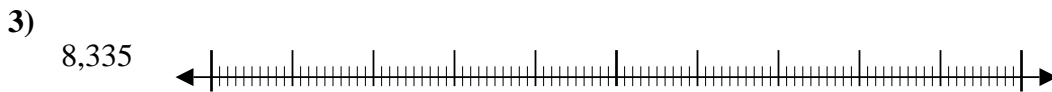
Ej. 37,100



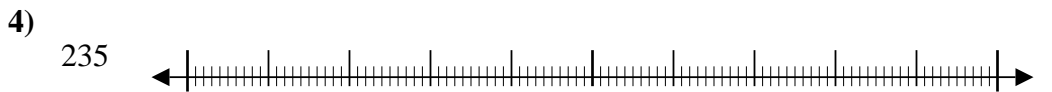
1. _____



2. _____



3. _____



4. _____



5. _____



6. _____



7. _____



8. _____



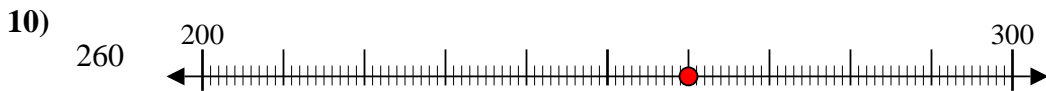
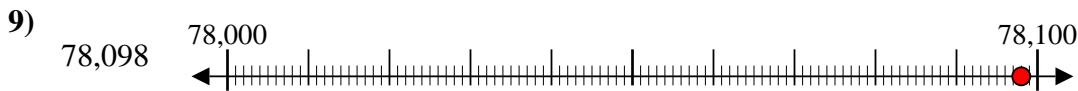
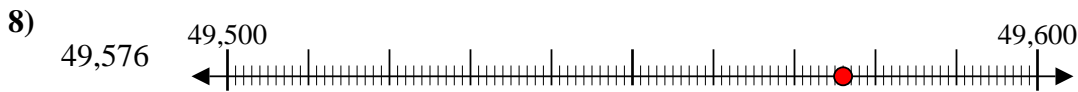
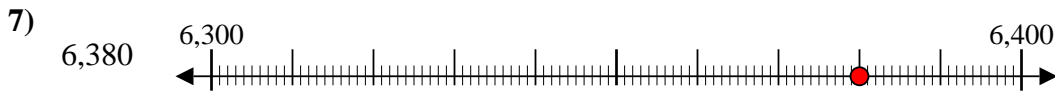
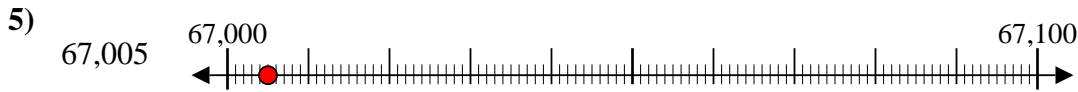
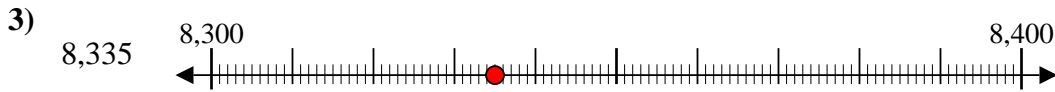
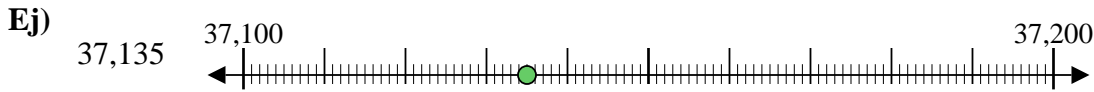
9. _____



10. _____



Usar las rectas numéricas para redondear cada número al 100 más cercano.



Respuestas

Ej. 37,100

1. 4,800

2. 100

3. 8,300

4. 200

5. 67,000

6. 500

7. 6,400

8. 49,600

9. 78,100

10. 300