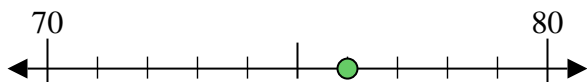


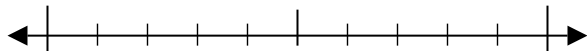


Usar las rectas numéricas para encontrar el número más cercano a 10.

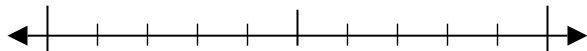
Ej) 76



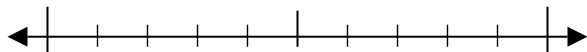
1) 77



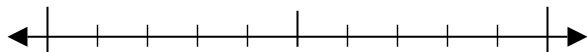
2) 68



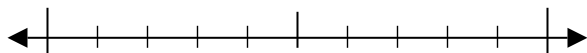
3) 17



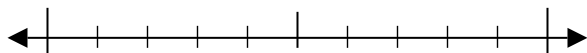
4) 70



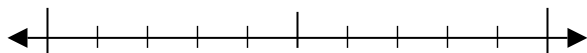
5) 233



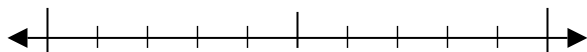
6) 514



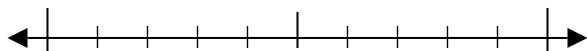
7) 874



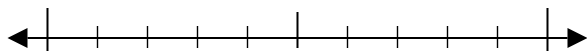
8) 268



9) 6,627



10) 5,062



Respuestas

Ej. 80

1. _____

2. _____

3. _____

4. _____

5. _____

6. _____

7. _____

8. _____

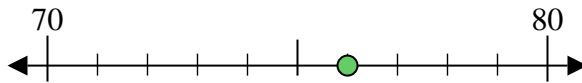
9. _____

10. _____

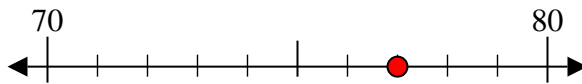


Usar las rectas numéricas para encontrar el número más cercano a 10.

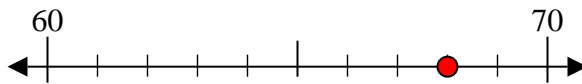
Ej) 76



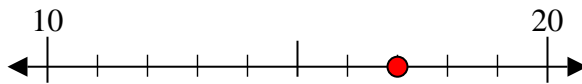
1) 77



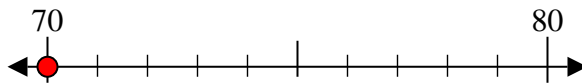
2) 68



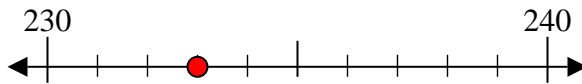
3) 17



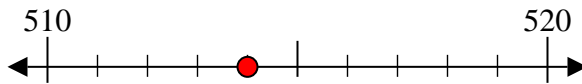
4) 70



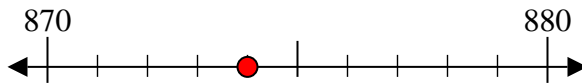
5) 233



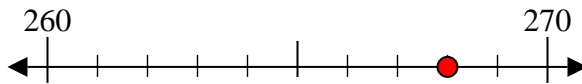
6) 514



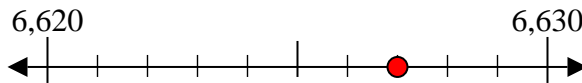
7) 874



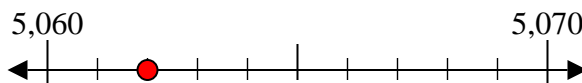
8) 268



9) 6,627



10) 5,062



Respuestas

Ej. 80

1. 80

2. 70

3. 20

4. 70

5. 230

6. 510

7. 870

8. 270

9. 6,630

10. 5,060