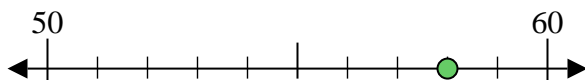


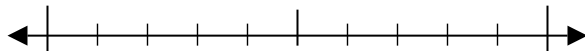


Usar las rectas numéricas para encontrar el número más cercano a 10.

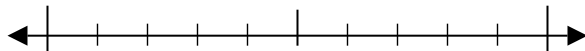
Ej) 58



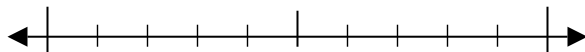
1) 89



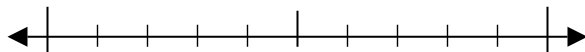
2) 95



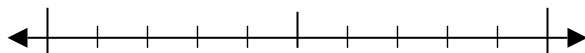
3) 76



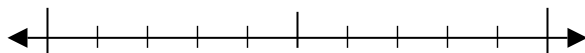
4) 54



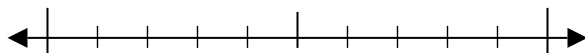
5) 368



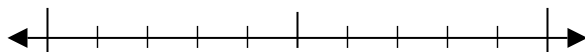
6) 169



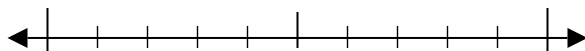
7) 898



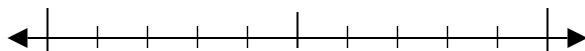
8) 895



9) 1,548



10) 1,081



Respuestas

Ej. 60

1. _____

2. _____

3. _____

4. _____

5. _____

6. _____

7. _____

8. _____

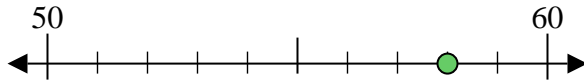
9. _____

10. _____

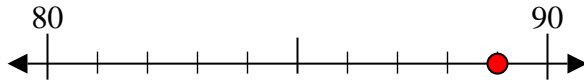


Usar las rectas numéricas para encontrar el número más cercano a 10.

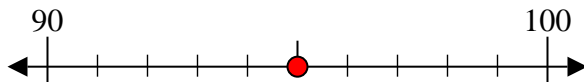
Ej) 58



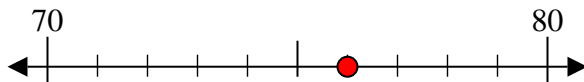
1) 89



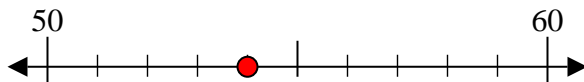
2) 95



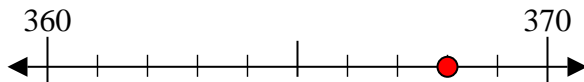
3) 76



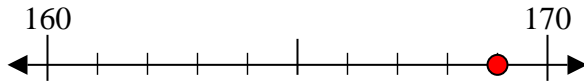
4) 54



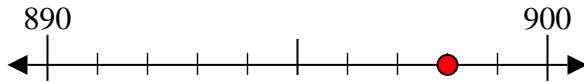
5) 368



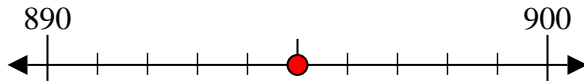
6) 169



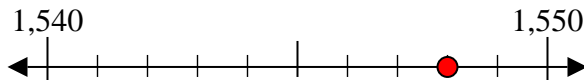
7) 898



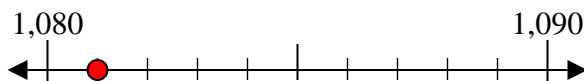
8) 895



9) 1,548



10) 1,081



Respuestas

Ej. 60

1. 90

2. 100

3. 80

4. 50

5. 370

6. 170

7. 900

8. 900

9. 1,550

10. 1,080