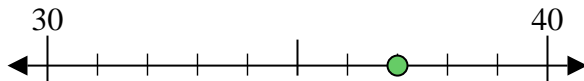


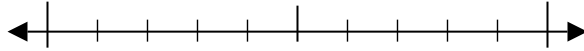


Usar las rectas numéricas para encontrar el número más cercano a 10.

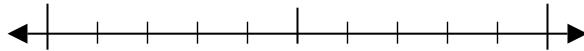
Ej) 37



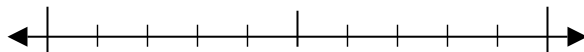
1) 58



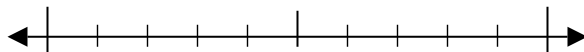
2) 95



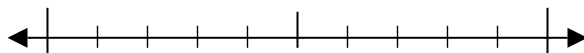
3) 98



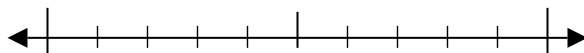
4) 20



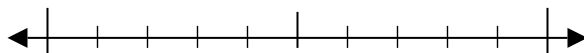
5) 762



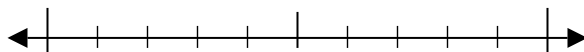
6) 855



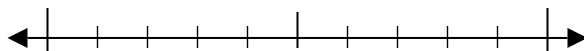
7) 366



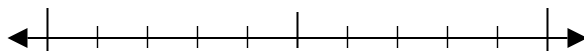
8) 613



9) 5,240



10) 9,107



Respuestas

Ej. 40

1. _____

2. _____

3. _____

4. _____

5. _____

6. _____

7. _____

8. _____

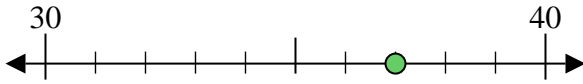
9. _____

10. _____

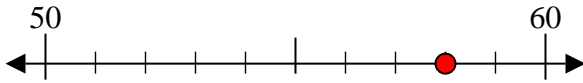


Usar las rectas numéricas para encontrar el número más cercano a 10.

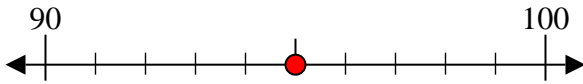
Ej) 37



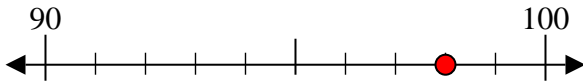
1) 58



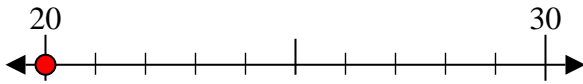
2) 95



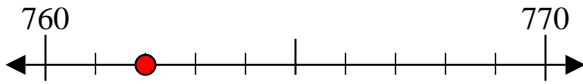
3) 98



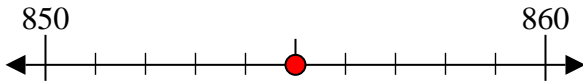
4) 20



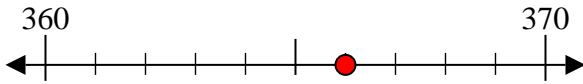
5) 762



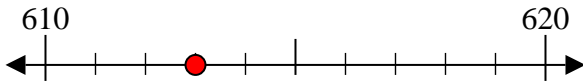
6) 855



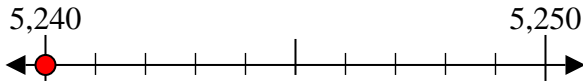
7) 366



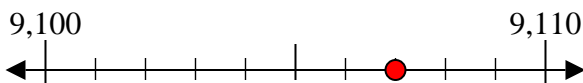
8) 613



9) 5,240



10) 9,107



Respuestas

Ej. 40

1. 60

2. 100

3. 100

4. 20

5. 760

6. 860

7. 370

8. 610

9. 5,240

10. 9,110