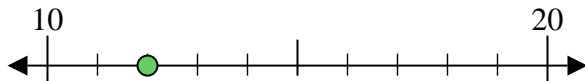


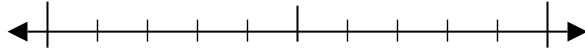


Usar las rectas numéricas para encontrar el número más cercano a 10.

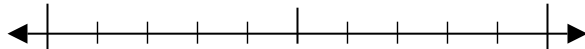
Ej) 12



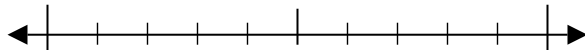
1) 12



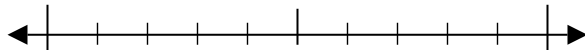
2) 98



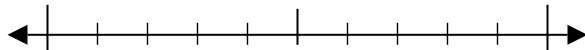
3) 78



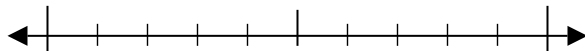
4) 70



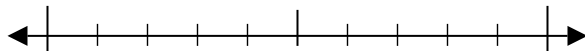
5) 604



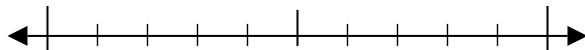
6) 501



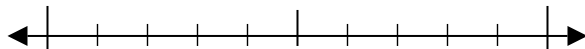
7) 311



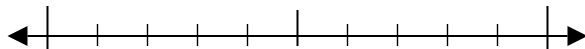
8) 706



9) 1,921



10) 2,839



Respuestas

Ej. 10

1. _____

2. _____

3. _____

4. _____

5. _____

6. _____

7. _____

8. _____

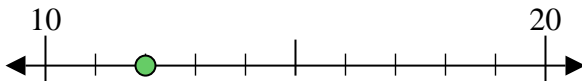
9. _____

10. _____

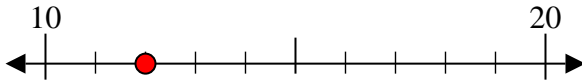


Usar las rectas numéricas para encontrar el número más cercano a 10.

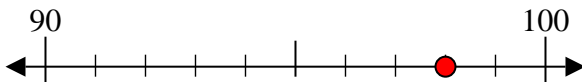
Ej) 12



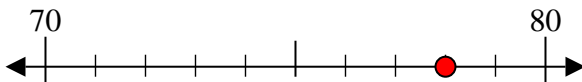
1) 12



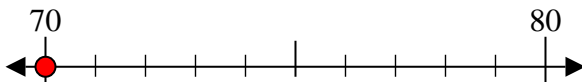
2) 98



3) 78



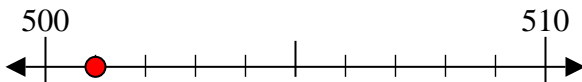
4) 70



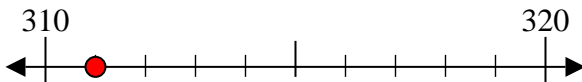
5) 604



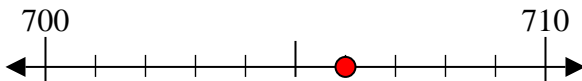
6) 501



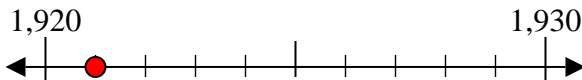
7) 311



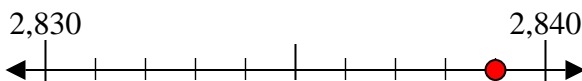
8) 706



9) 1,921



10) 2,839



Respuestas

Ej. 10

1. 10

2. 100

3. 80

4. 70

5. 600

6. 500

7. 310

8. 710

9. 1,920

10. 2,840