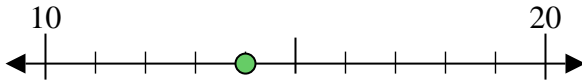


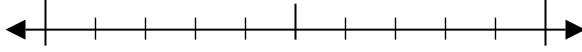


Usar las rectas numéricas para encontrar el número más cercano a 10.

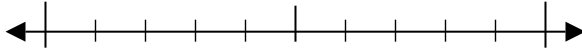
Ej) 14



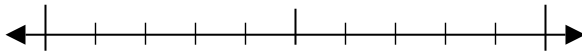
1) 22



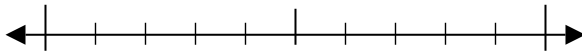
2) 92



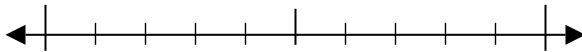
3) 50



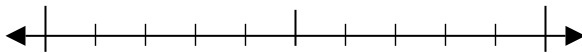
4) 16



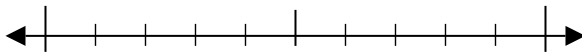
5) 317



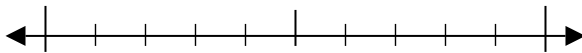
6) 802



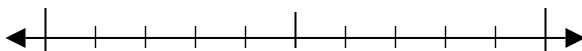
7) 429



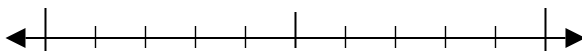
8) 800



9) 6,735



10) 2,419



Respuestas

Ej. 10

1. _____

2. _____

3. _____

4. _____

5. _____

6. _____

7. _____

8. _____

9. _____

10. _____

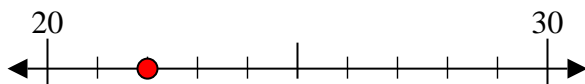


Usar las rectas numéricas para encontrar el número más cercano a 10.

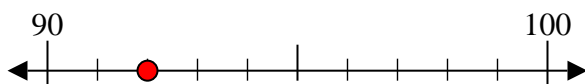
Ej) 14



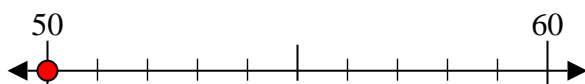
1) 22



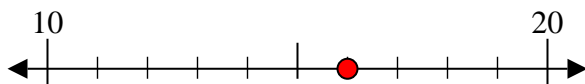
2) 92



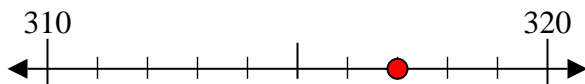
3) 50



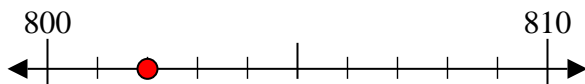
4) 16



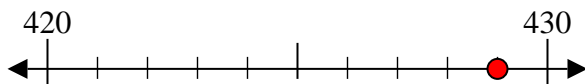
5) 317



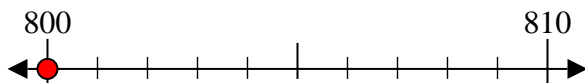
6) 802



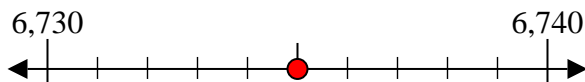
7) 429



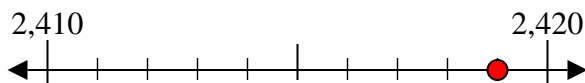
8) 800



9) 6,735



10) 2,419



Respuestas

Ej. 10

1. 20

2. 90

3. 50

4. 20

5. 320

6. 800

7. 430

8. 800

9. 6,740

10. 2,420