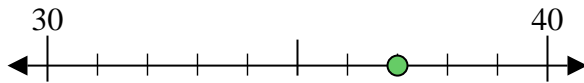


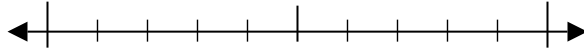


Usar las rectas numéricas para encontrar el número más cercano a 10.

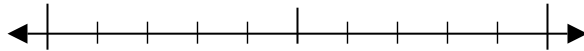
Ej) 37



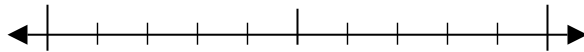
1) 79



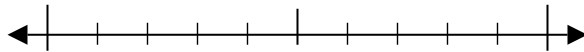
2) 96



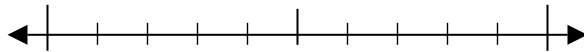
3) 66



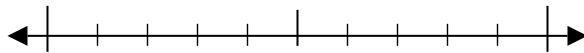
4) 12



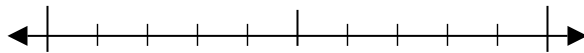
5) 369



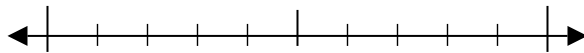
6) 453



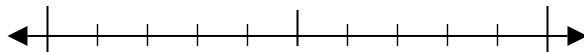
7) 570



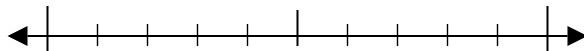
8) 323



9) 2,985



10) 9,432



Respuestas

Ej. 40

1. _____

2. _____

3. _____

4. _____

5. _____

6. _____

7. _____

8. _____

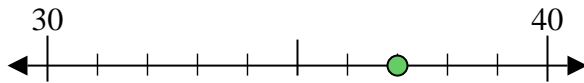
9. _____

10. _____

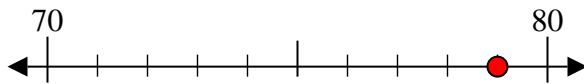


Usar las rectas numéricas para encontrar el número más cercano a 10.

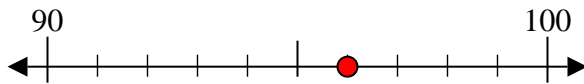
Ej) 37



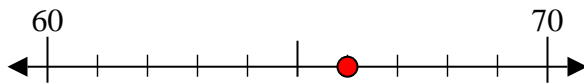
1) 79



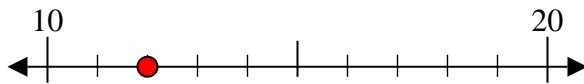
2) 96



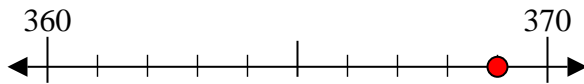
3) 66



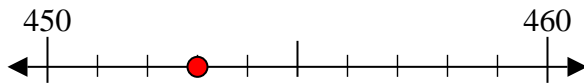
4) 12



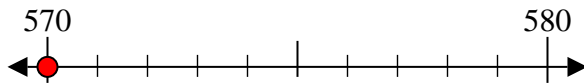
5) 369



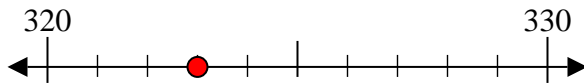
6) 453



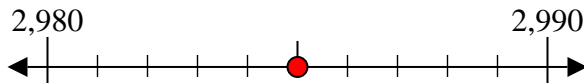
7) 570



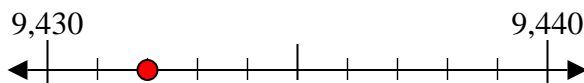
8) 323



9) 2,985



10) 9,432



Respuestas

Ej. 40

1. 80

2. 100

3. 70

4. 10

5. 370

6. 450

7. 570

8. 320

9. 2,990

10. 9,430