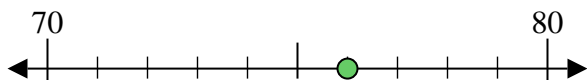


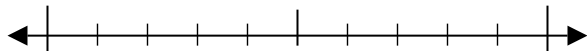


Usar las rectas numéricas para encontrar el número más cercano a 10.

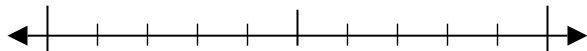
Ej) 76



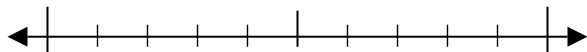
1) 77



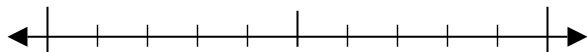
2) 68



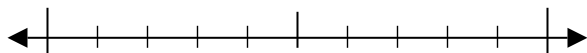
3) 17



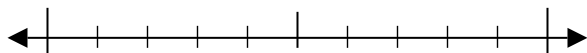
4) 70



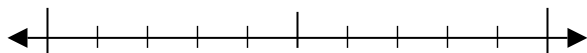
5) 233



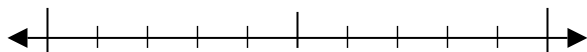
6) 514



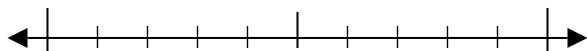
7) 874



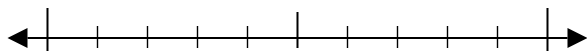
8) 268



9) 6,627



10) 5,062



Respuestas

Ej. 80

1. _____

2. _____

3. _____

4. _____

5. _____

6. _____

7. _____

8. _____

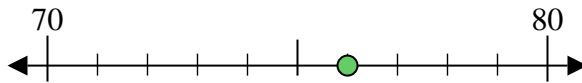
9. _____

10. _____

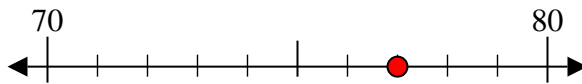


Usar las rectas numéricas para encontrar el número más cercano a 10.

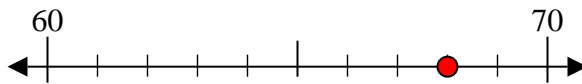
Ej) 76



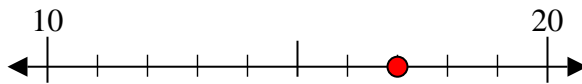
1) 77



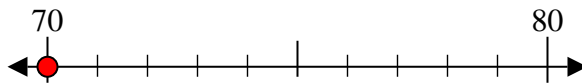
2) 68



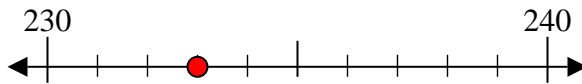
3) 17



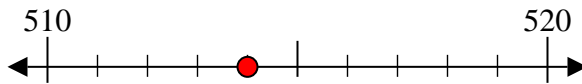
4) 70



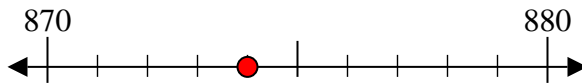
5) 233



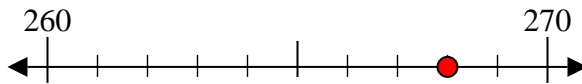
6) 514



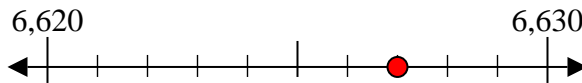
7) 874



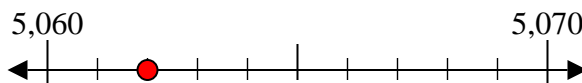
8) 268



9) 6,627



10) 5,062



Respuestas

Ej. 80

1. 80

2. 70

3. 20

4. 70

5. 230

6. 510

7. 870

8. 270

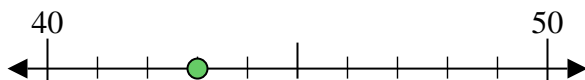
9. 6,630

10. 5,060

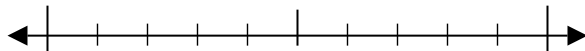


Usar las rectas numéricas para encontrar el número más cercano a 10.

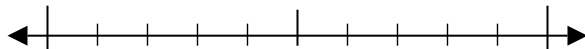
Ej) 43



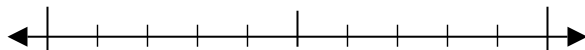
1) 31



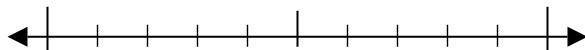
2) 13



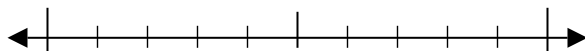
3) 32



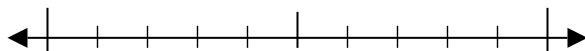
4) 26



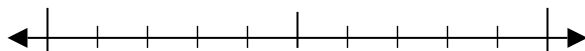
5) 653



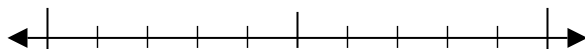
6) 583



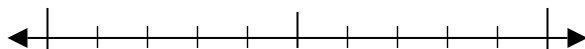
7) 300



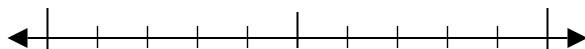
8) 813



9) 9,653



10) 8,092



Respuestas

Ej. 40

1. _____

2. _____

3. _____

4. _____

5. _____

6. _____

7. _____

8. _____

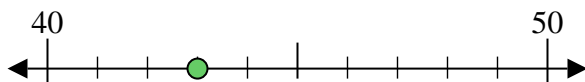
9. _____

10. _____

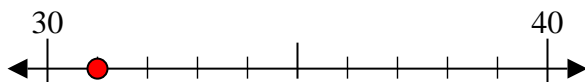


Usar las rectas numéricas para encontrar el número más cercano a 10.

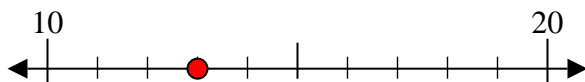
Ej) 43



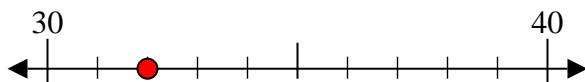
1) 31



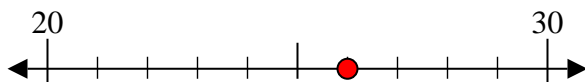
2) 13



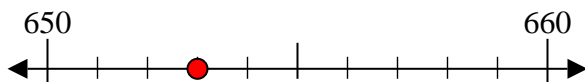
3) 32



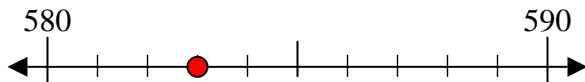
4) 26



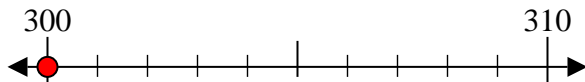
5) 653



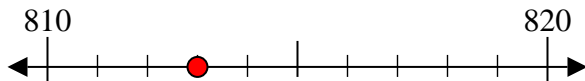
6) 583



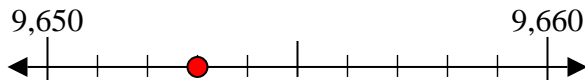
7) 300



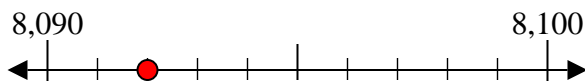
8) 813



9) 9,653



10) 8,092



Respuestas

Ej. 40

1. 30

2. 10

3. 30

4. 30

5. 650

6. 580

7. 300

8. 810

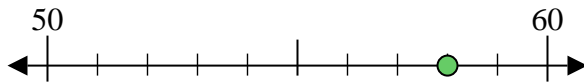
9. 9,650

10. 8,090

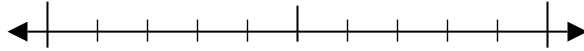


Usar las rectas numéricas para encontrar el número más cercano a 10.

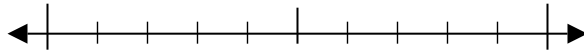
Ej) 58



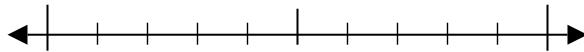
1) 89



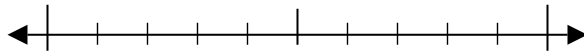
2) 95



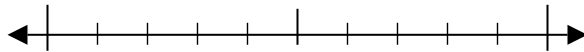
3) 76



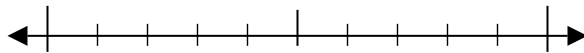
4) 54



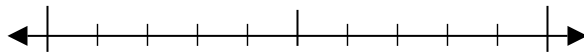
5) 368



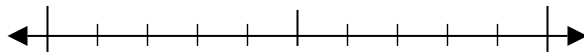
6) 169



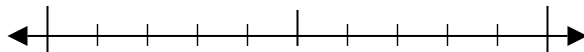
7) 898



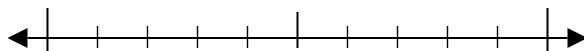
8) 895



9) 1,548



10) 1,081



Respuestas

Ej. 60

1. _____

2. _____

3. _____

4. _____

5. _____

6. _____

7. _____

8. _____

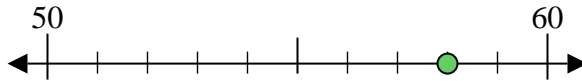
9. _____

10. _____

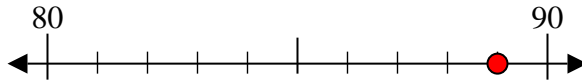


Usar las rectas numéricas para encontrar el número más cercano a 10.

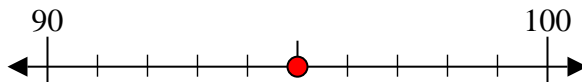
Ej) 58



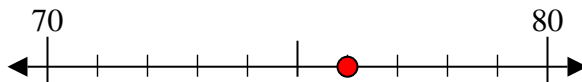
1) 89



2) 95



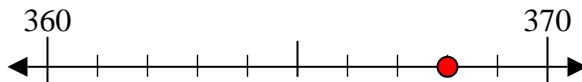
3) 76



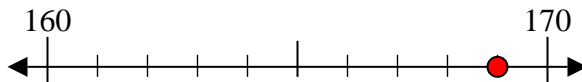
4) 54



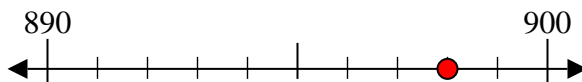
5) 368



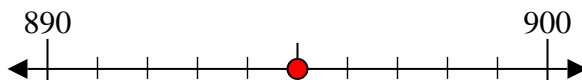
6) 169



7) 898



8) 895



9) 1,548



10) 1,081



Respuestas

Ej. 60

1. 90

2. 100

3. 80

4. 50

5. 370

6. 170

7. 900

8. 900

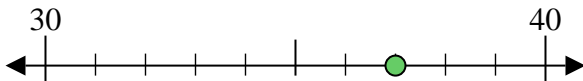
9. 1,550

10. 1,080

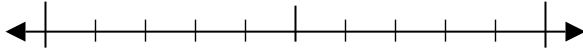


Usar las rectas numéricas para encontrar el número más cercano a 10.

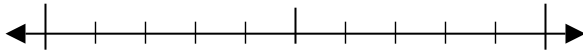
Ej) 37



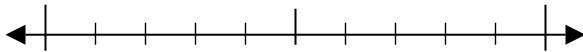
1) 31



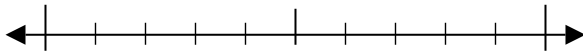
2) 72



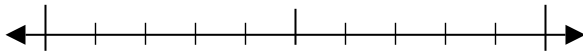
3) 79



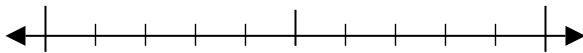
4) 53



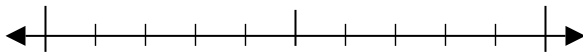
5) 858



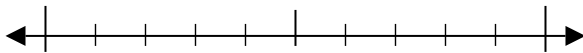
6) 778



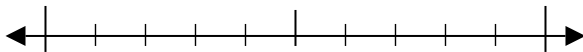
7) 830



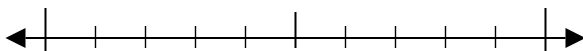
8) 954



9) 2,737



10) 4,736



Respuestas

Ej. 40

1. _____

2. _____

3. _____

4. _____

5. _____

6. _____

7. _____

8. _____

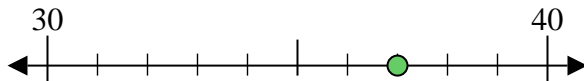
9. _____

10. _____

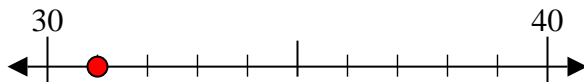


Usar las rectas numéricas para encontrar el número más cercano a 10.

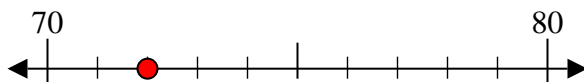
Ej) 37



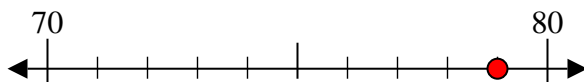
1) 31



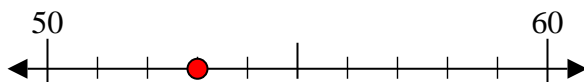
2) 72



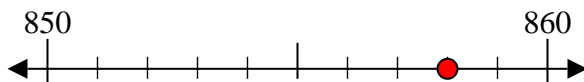
3) 79



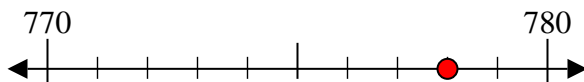
4) 53



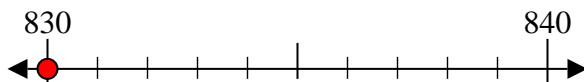
5) 858



6) 778



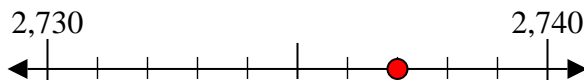
7) 830



8) 954



9) 2,737



10) 4,736



Respuestas

Ej. 40

1. 30

2. 70

3. 80

4. 50

5. 860

6. 780

7. 830

8. 950

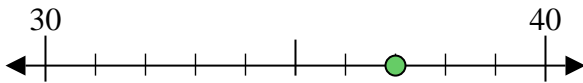
9. 2,740

10. 4,740

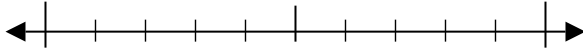


Usar las rectas numéricas para encontrar el número más cercano a 10.

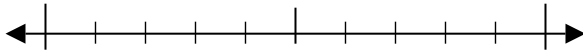
Ej) 37



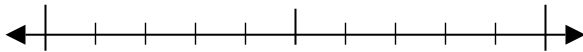
1) 58



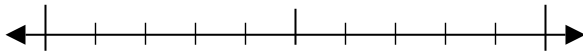
2) 95



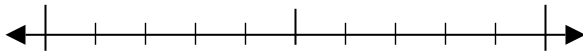
3) 98



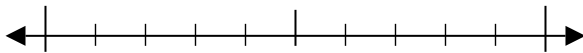
4) 20



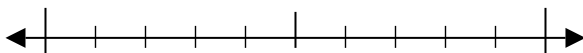
5) 762



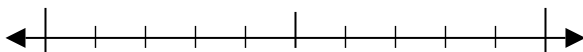
6) 855



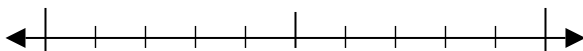
7) 366



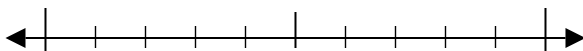
8) 613



9) 5,240



10) 9,107



Respuestas

Ej. 40

1. _____

2. _____

3. _____

4. _____

5. _____

6. _____

7. _____

8. _____

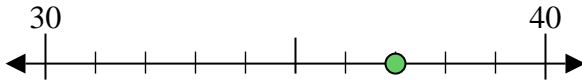
9. _____

10. _____

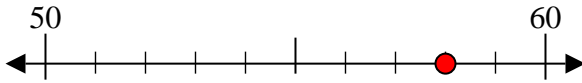


Usar las rectas numéricas para encontrar el número más cercano a 10.

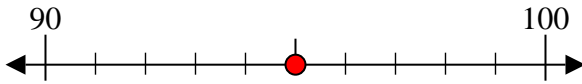
Ej) 37



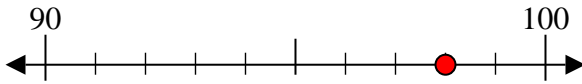
1) 58



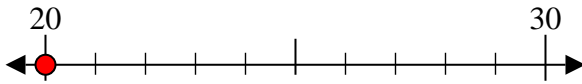
2) 95



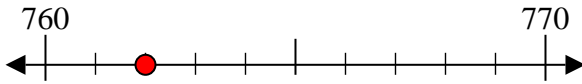
3) 98



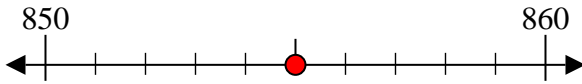
4) 20



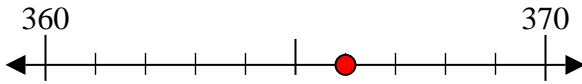
5) 762



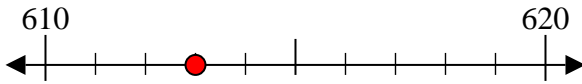
6) 855



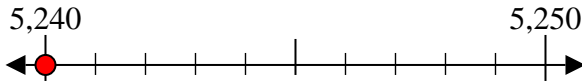
7) 366



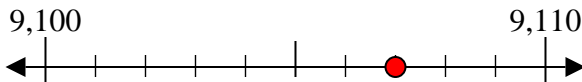
8) 613



9) 5,240



10) 9,107



Respuestas

Ej. 40

1. 60

2. 100

3. 100

4. 20

5. 760

6. 860

7. 370

8. 610

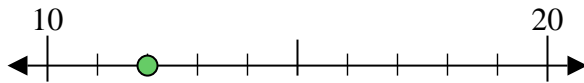
9. 5,240

10. 9,110

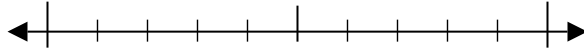


Usar las rectas numéricas para encontrar el número más cercano a 10.

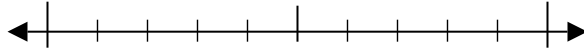
Ej) 12



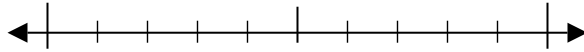
1) 12



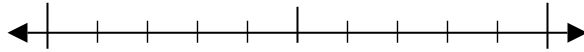
2) 98



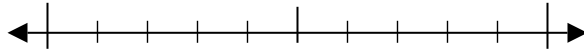
3) 78



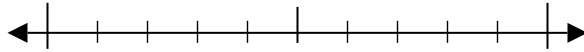
4) 70



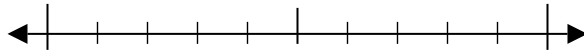
5) 604



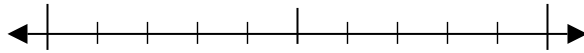
6) 501



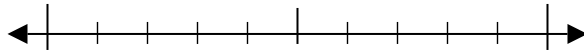
7) 311



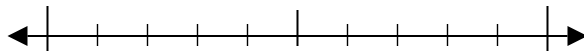
8) 706



9) 1,921



10) 2,839



Respuestas

Ej. 10

1. _____

2. _____

3. _____

4. _____

5. _____

6. _____

7. _____

8. _____

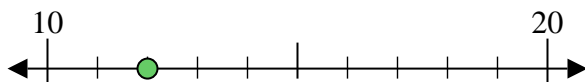
9. _____

10. _____

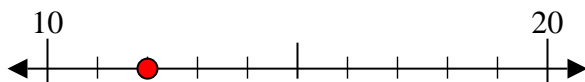


Usar las rectas numéricas para encontrar el número más cercano a 10.

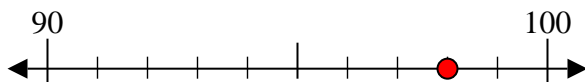
Ej) 12



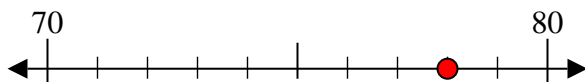
1) 12



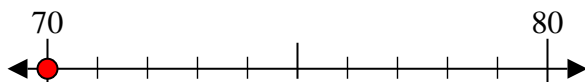
2) 98



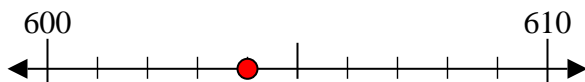
3) 78



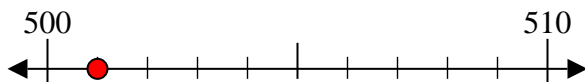
4) 70



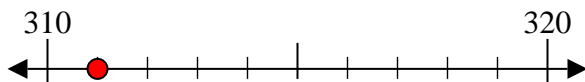
5) 604



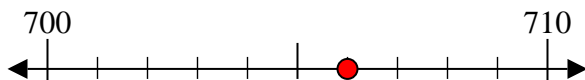
6) 501



7) 311



8) 706



9) 1,921



10) 2,839



Respuestas

Ej. 10

1. 10

2. 100

3. 80

4. 70

5. 600

6. 500

7. 310

8. 710

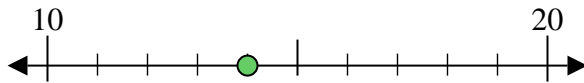
9. 1,920

10. 2,840

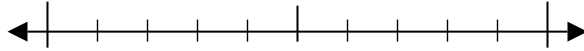


Usar las rectas numéricas para encontrar el número más cercano a 10.

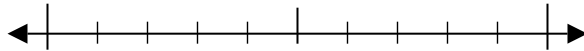
Ej) 14



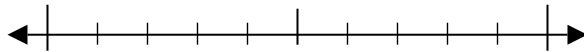
1) 22



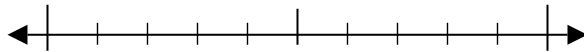
2) 92



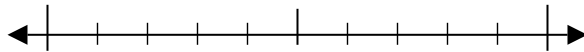
3) 50



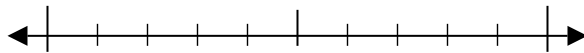
4) 16



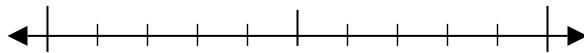
5) 317



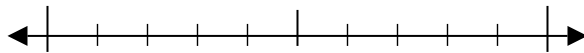
6) 802



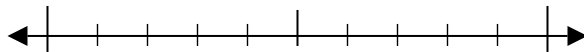
7) 429



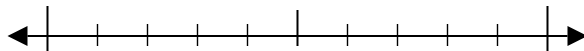
8) 800



9) 6,735



10) 2,419



Respuestas

Ej. 10

1. _____

2. _____

3. _____

4. _____

5. _____

6. _____

7. _____

8. _____

9. _____

10. _____

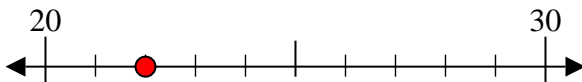


Usar las rectas numéricas para encontrar el número más cercano a 10.

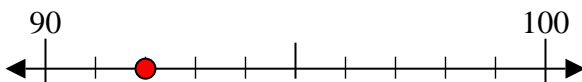
Ej) 14



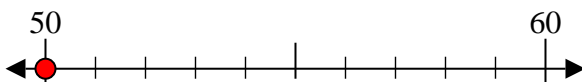
1) 22



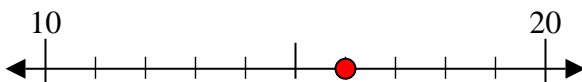
2) 92



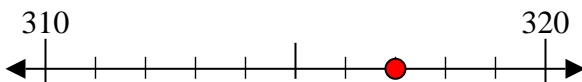
3) 50



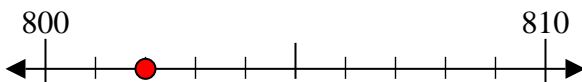
4) 16



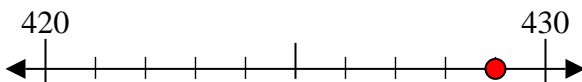
5) 317



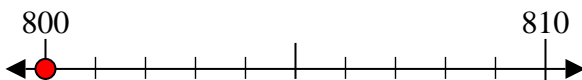
6) 802



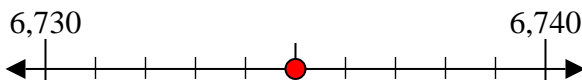
7) 429



8) 800



9) 6,735



10) 2,419



Respuestas

Ej. 10

1. 20

2. 90

3. 50

4. 20

5. 320

6. 800

7. 430

8. 800

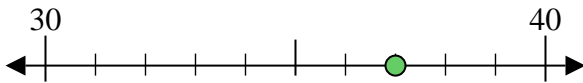
9. 6,740

10. 2,420

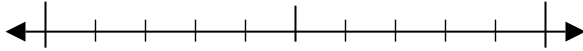


Usar las rectas numéricas para encontrar el número más cercano a 10.

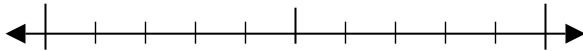
Ej) 37



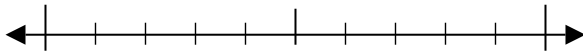
1) 79



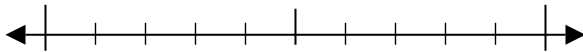
2) 96



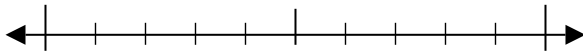
3) 66



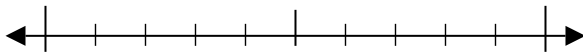
4) 12



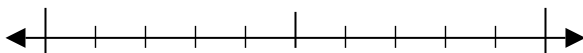
5) 369



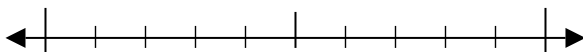
6) 453



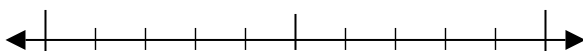
7) 570



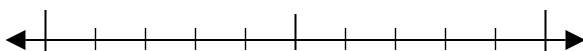
8) 323



9) 2,985



10) 9,432



Respuestas

Ej. 40

1. _____

2. _____

3. _____

4. _____

5. _____

6. _____

7. _____

8. _____

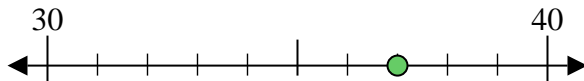
9. _____

10. _____

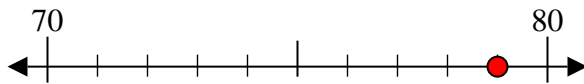


Usar las rectas numéricas para encontrar el número más cercano a 10.

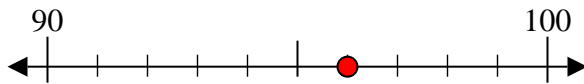
Ej) 37



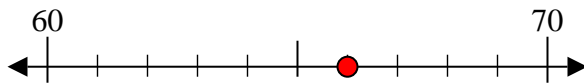
1) 79



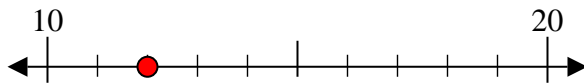
2) 96



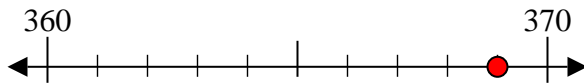
3) 66



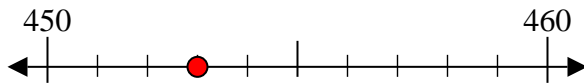
4) 12



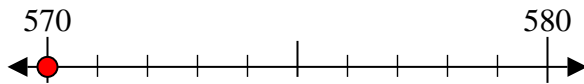
5) 369



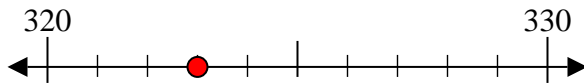
6) 453



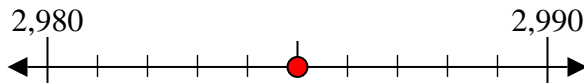
7) 570



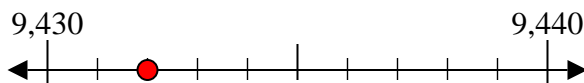
8) 323



9) 2,985



10) 9,432



Respuestas

Ej. 40

1. 80

2. 100

3. 70

4. 10

5. 370

6. 450

7. 570

8. 320

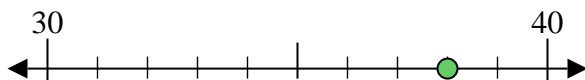
9. 2,990

10. 9,430

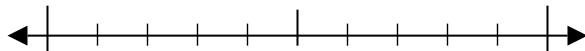


Usar las rectas numéricas para encontrar el número más cercano a 10.

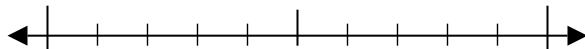
Ej) 38



1) 61



2) 68



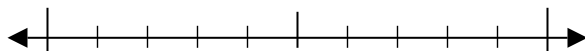
3) 37



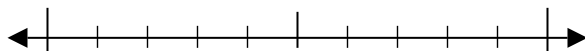
4) 44



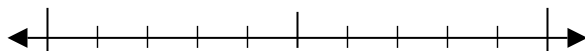
5) 187



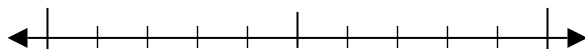
6) 486



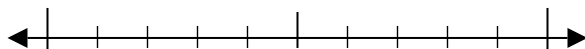
7) 892



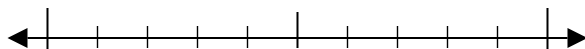
8) 585



9) 8,565



10) 3,800



Respuestas

Ej. 40

1. _____

2. _____

3. _____

4. _____

5. _____

6. _____

7. _____

8. _____

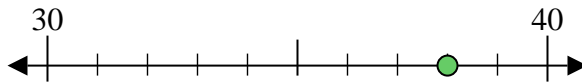
9. _____

10. _____

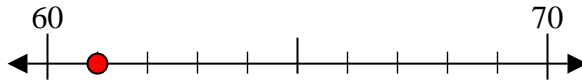


Usar las rectas numéricas para encontrar el número más cercano a 10.

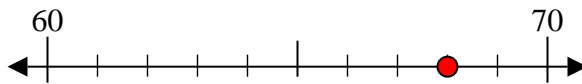
Ej) 38



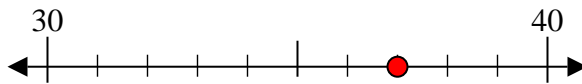
1) 61



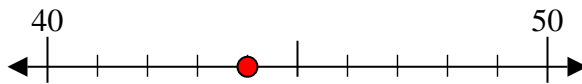
2) 68



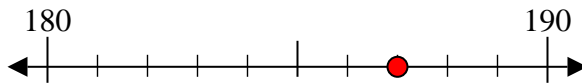
3) 37



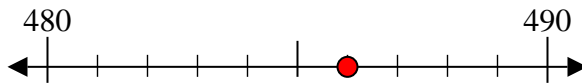
4) 44



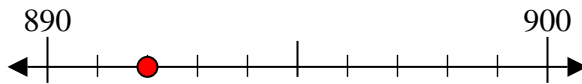
5) 187



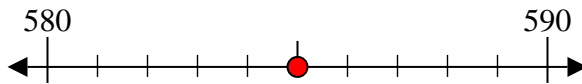
6) 486



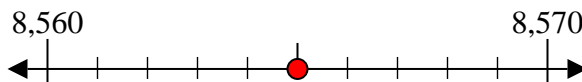
7) 892



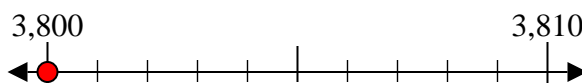
8) 585



9) 8,565



10) 3,800



Respuestas

Ej. 40

1. 60

2. 70

3. 40

4. 40

5. 190

6. 490

7. 890

8. 590

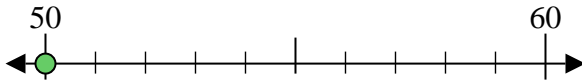
9. 8,570

10. 3,800

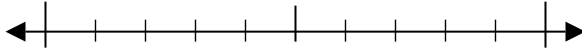


Usar las rectas numéricas para encontrar el número más cercano a 10.

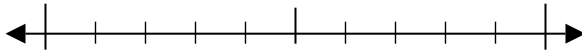
Ej) 50



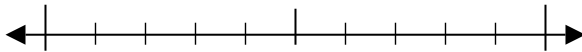
1) 21



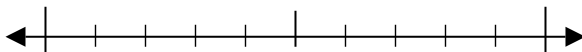
2) 22



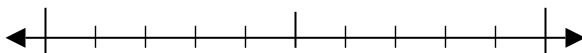
3) 33



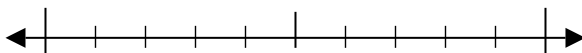
4) 39



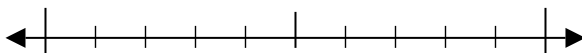
5) 182



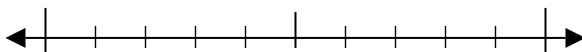
6) 889



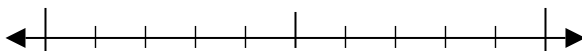
7) 286



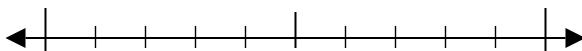
8) 507



9) 6,212



10) 9,046



Respuestas

Ej. 50

1. _____

2. _____

3. _____

4. _____

5. _____

6. _____

7. _____

8. _____

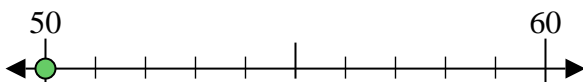
9. _____

10. _____

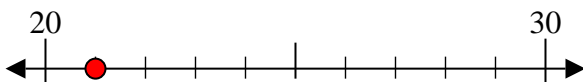


Usar las rectas numéricas para encontrar el número más cercano a 10.

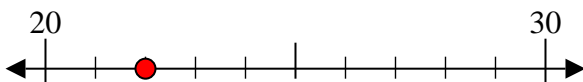
Ej) 50



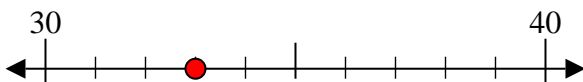
1) 21



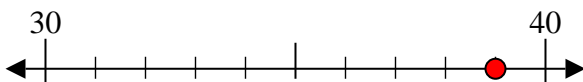
2) 22



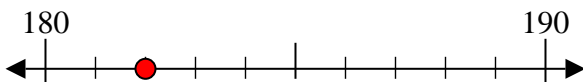
3) 33



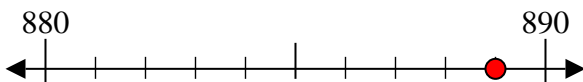
4) 39



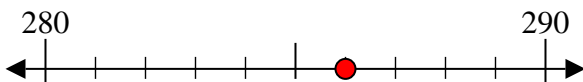
5) 182



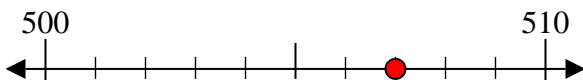
6) 889



7) 286



8) 507



9) 6,212



10) 9,046



Respuestas

Ej. 50

1. 20

2. 20

3. 30

4. 40

5. 180

6. 890

7. 290

8. 510

9. 6,210

10. 9,050

