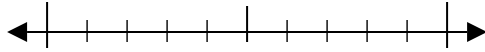


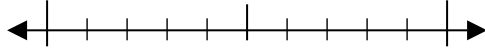


Usar las rectas numéricas para encontrar el número más cercano a 10.

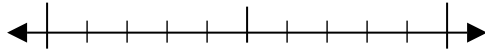
Ej) 67



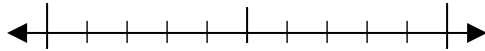
1) 68



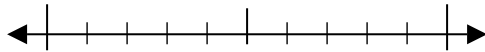
2) 60



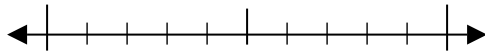
3) 84



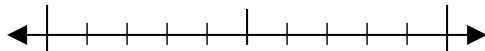
4) 353



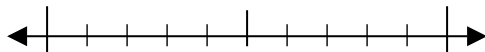
5) 102



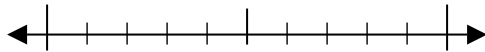
6) 669



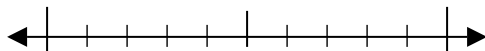
7) 833



8) 6,118



9) 9,572



Respuestas

Ej. 70

1. _____

2. _____

3. _____

4. _____

5. _____

6. _____

7. _____

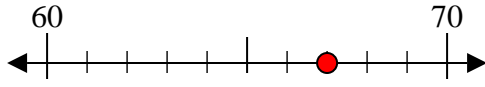
8. _____

9. _____

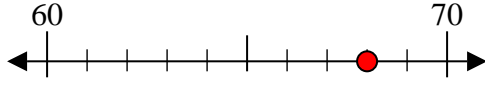


Usar las rectas numéricas para encontrar el número más cercano a 10.

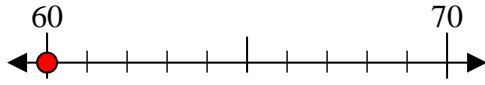
Ej) 67



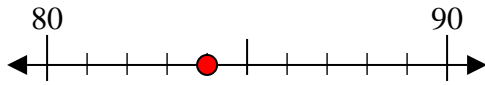
1) 68



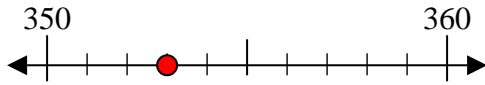
2) 60



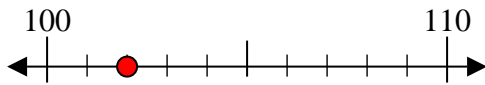
3) 84



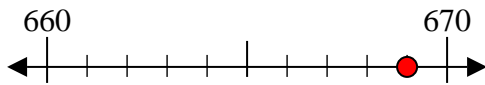
4) 353



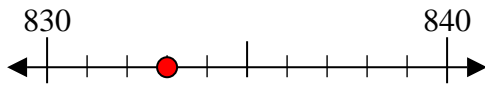
5) 102



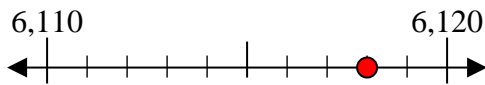
6) 669



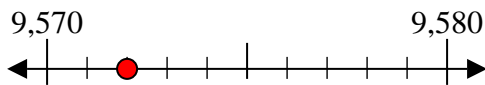
7) 833



8) 6,118



9) 9,572



Respuestas

Ej. 70

1. 70

2. 60

3. 80

4. 350

5. 100

6. 670

7. 830

8. 6,120

9. 9,570