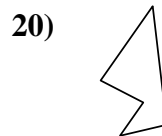
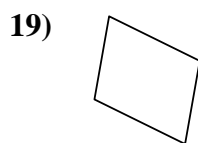
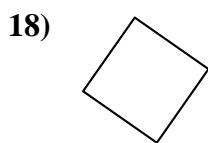
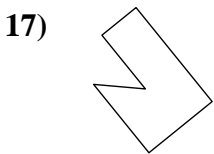
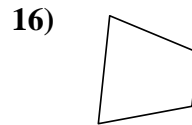
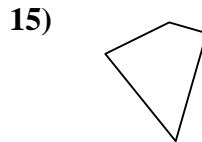
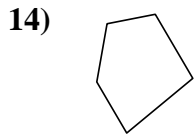
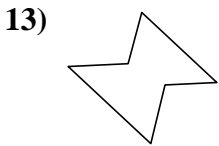
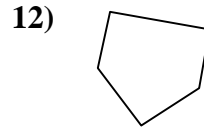
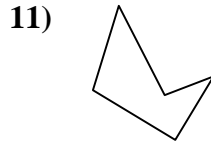
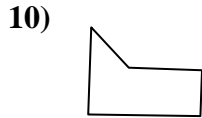
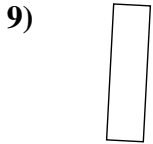
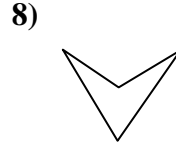
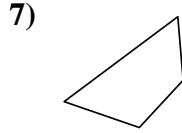
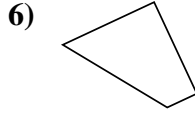
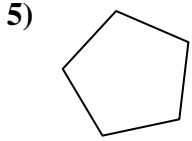
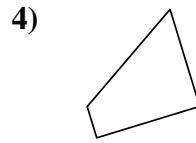
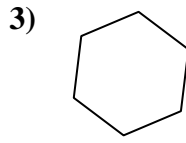
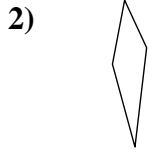
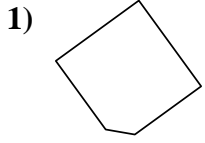




Determinar si la forma mostrada es un cuadrilátero (si) o no (no).



Respuestas

1. _____

2. _____

3. _____

4. _____

5. _____

6. _____

7. _____

8. _____

9. _____

10. _____

11. _____

12. _____

13. _____

14. _____

15. _____

16. _____

17. _____

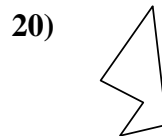
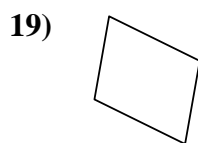
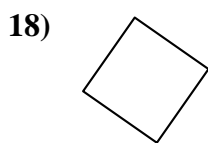
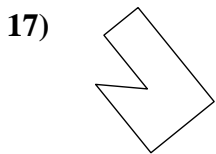
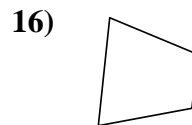
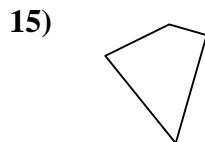
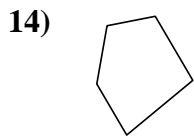
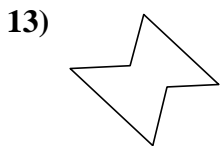
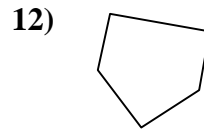
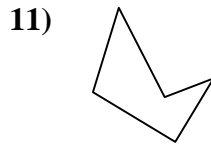
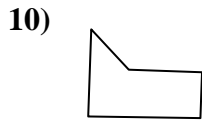
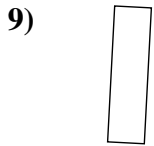
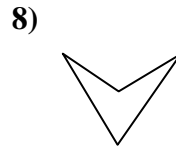
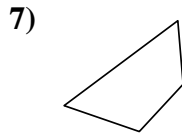
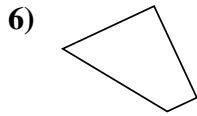
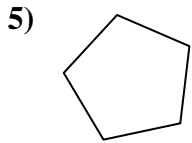
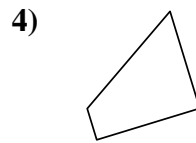
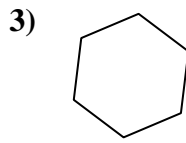
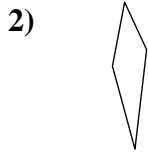
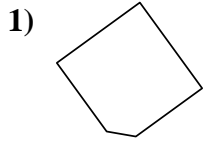
18. _____

19. _____

20. _____



Determinar si la forma mostrada es un cuadrilátero (si) o no (no).



Respuestas

1. no

2. si

3. no

4. si

5. no

6. si

7. si

8. si

9. si

10. no

11. no

12. no

13. no

14. no

15. si

16. si

17. no

18. si

19. si

20. no