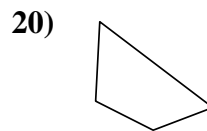
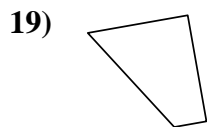
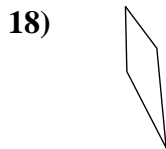
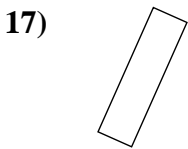
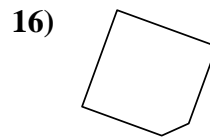
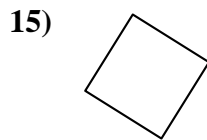
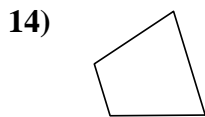
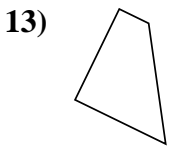
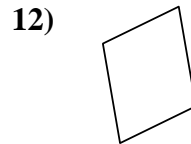
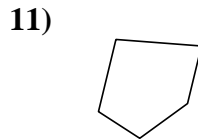
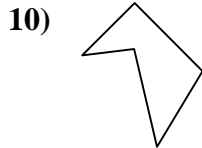
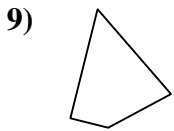
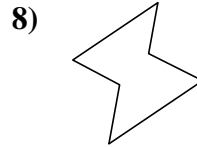
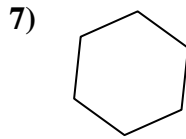
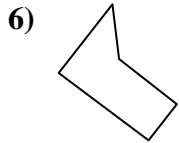
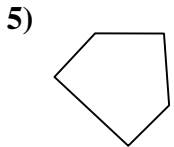
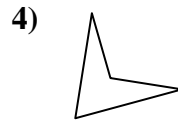
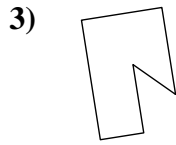
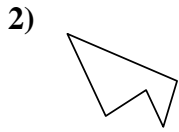
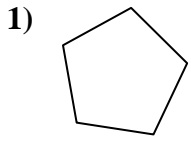




Determinar si la forma mostrada es un cuadrilátero (si) o no (no).

**Respuestas**



1. \_\_\_\_\_

2. \_\_\_\_\_

3. \_\_\_\_\_

4. \_\_\_\_\_

5. \_\_\_\_\_

6. \_\_\_\_\_

7. \_\_\_\_\_

8. \_\_\_\_\_

9. \_\_\_\_\_

10. \_\_\_\_\_

11. \_\_\_\_\_

12. \_\_\_\_\_

13. \_\_\_\_\_

14. \_\_\_\_\_

15. \_\_\_\_\_

16. \_\_\_\_\_

17. \_\_\_\_\_

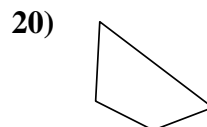
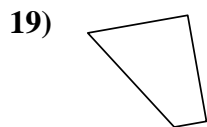
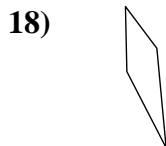
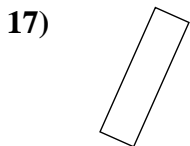
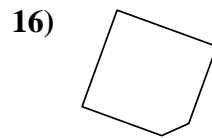
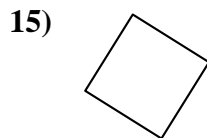
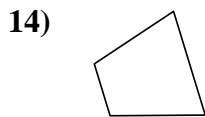
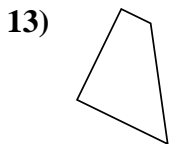
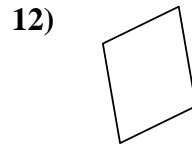
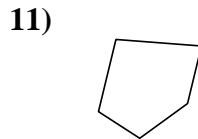
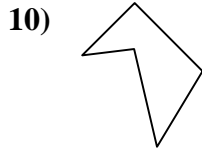
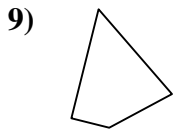
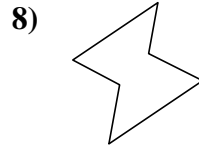
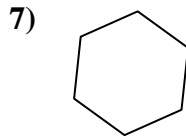
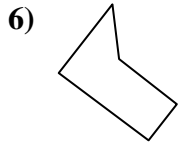
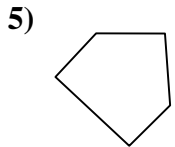
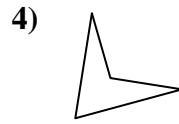
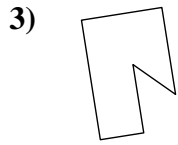
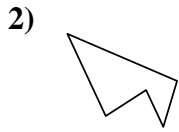
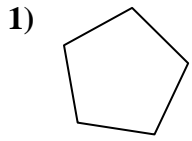
18. \_\_\_\_\_

19. \_\_\_\_\_

20. \_\_\_\_\_



Determinar si la forma mostrada es un cuadrilátero (si) o no (no).



**Respuestas**

1. no

2. no

3. no

4. si

5. no

6. no

7. no

8. no

9. si

10. no

11. no

12. si

13. si

14. si

15. si

16. no

17. si

18. si

19. si

20. si