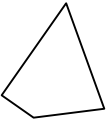

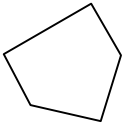
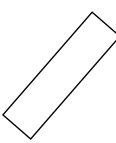

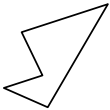
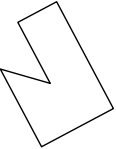
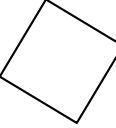
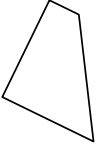
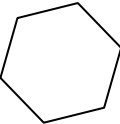
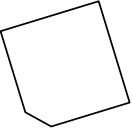

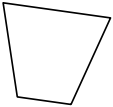

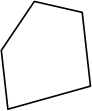
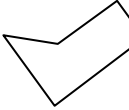
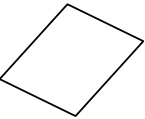

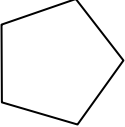
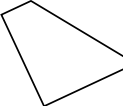




Determinar si la forma mostrada es un cuadrilátero (si) o no (no).

- 1) 
- 2) 
- 3) 
- 4) 
- 5) 
- 6) 
- 7) 
- 8) 
- 9) 
- 10) 
- 11) 
- 12) 
- 13) 
- 14) 
- 15) 
- 16) 
- 17) 
- 18) 
- 19) 
- 20) 

Respuestas

- 1. _____
- 2. _____
- 3. _____
- 4. _____
- 5. _____
- 6. _____
- 7. _____
- 8. _____
- 9. _____
- 10. _____
- 11. _____
- 12. _____
- 13. _____
- 14. _____
- 15. _____
- 16. _____
- 17. _____
- 18. _____
- 19. _____
- 20. _____



Determinar si la forma mostrada es un cuadrilátero (si) o no (no).

- 1)
- 2)
- 3)
- 4)
- 5)
- 6)
- 7)
- 8)
- 9)
- 10)
- 11)
- 12)
- 13)
- 14)
- 15)
- 16)
- 17)
- 18)
- 19)
- 20)

Respuestas

- 1. **si**
- 2. **si**
- 3. **no**
- 4. **si**
- 5. **si**
- 6. **no**
- 7. **no**
- 8. **si**
- 9. **si**
- 10. **no**
- 11. **no**
- 12. **si**
- 13. **si**
- 14. **no**
- 15. **no**
- 16. **no**
- 17. **si**
- 18. **no**
- 19. **no**
- 20. **si**