




Determinar si la forma mostrada es un cuadrilátero (si) o no (no).

1)



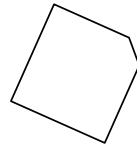
2)



3)



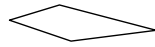
4)



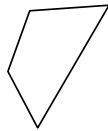
5)



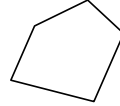
6)



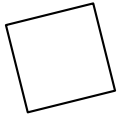
7)



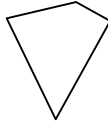
8)



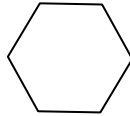
9)



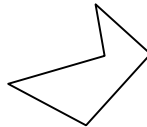
10)




11)



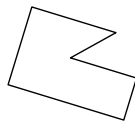
12)



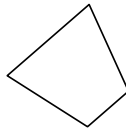
13)



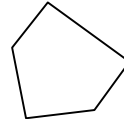
14)



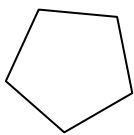
15)



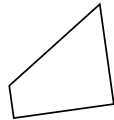
16)



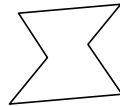
17)



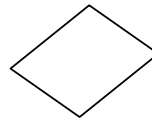
18)



19)



20)



**Respuestas**

1. \_\_\_\_\_

2. \_\_\_\_\_

3. \_\_\_\_\_

4. \_\_\_\_\_

5. \_\_\_\_\_

6. \_\_\_\_\_

7. \_\_\_\_\_

8. \_\_\_\_\_

9. \_\_\_\_\_

10. \_\_\_\_\_

11. \_\_\_\_\_

12. \_\_\_\_\_

13. \_\_\_\_\_

14. \_\_\_\_\_

15. \_\_\_\_\_

16. \_\_\_\_\_

17. \_\_\_\_\_

18. \_\_\_\_\_

19. \_\_\_\_\_

20. \_\_\_\_\_



Determinar si la forma mostrada es un cuadrilátero (si) o no (no).

- 1)
- 2)
- 3)
- 4)
- 5)
- 6)
- 7)
- 8)
- 9)
- 10)
- 11)
- 12)
- 13)
- 14)
- 15)
- 16)
- 17)
- 18)
- 19)
- 20)

**Respuestas**

- 1.     **si**
- 2.     **no**
- 3.     **si**
- 4.     **no**
- 5.     **si**
- 6.     **si**
- 7.     **si**
- 8.     **no**
- 9.     **si**
- 10.     **si**
- 11.     **no**
- 12.     **no**
- 13.     **no**
- 14.     **no**
- 15.     **si**
- 16.     **no**
- 17.     **no**
- 18.     **si**
- 19.     **no**
- 20.     **si**