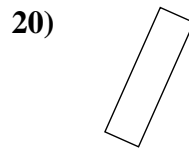
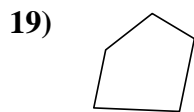
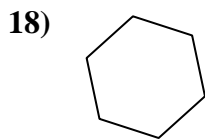
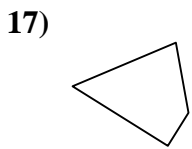
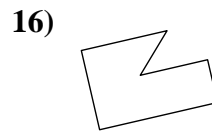
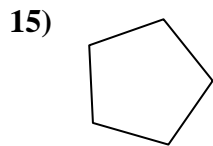
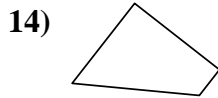
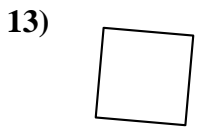
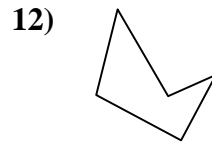
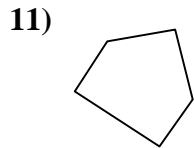
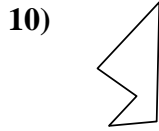
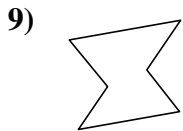
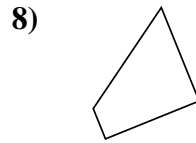
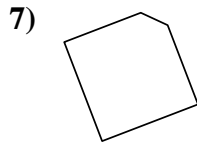
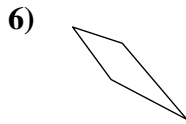
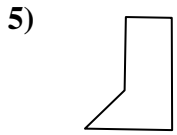
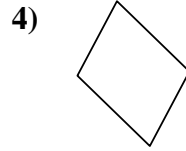
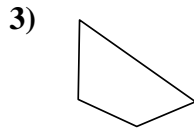
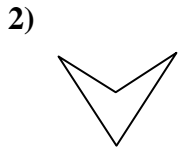
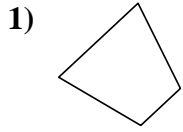




Determinar si la forma mostrada es un cuadrilátero (si) o no (no).



Respuestas

1. _____

2. _____

3. _____

4. _____

5. _____

6. _____

7. _____

8. _____

9. _____

10. _____

11. _____

12. _____

13. _____

14. _____

15. _____

16. _____

17. _____

18. _____

19. _____

20. _____



Determinar si la forma mostrada es un cuadrilátero (si) o no (no).

- 1)
- 2)
- 3)
- 4)
- 5)
- 6)
- 7)
- 8)
- 9)
- 10)
- 11)
- 12)
- 13)
- 14)
- 15)
- 16)
- 17)
- 18)
- 19)
- 20)

Respuestas

- 1. **si**
- 2. **si**
- 3. **si**
- 4. **si**
- 5. **no**
- 6. **si**
- 7. **no**
- 8. **si**
- 9. **no**
- 10. **no**
- 11. **no**
- 12. **no**
- 13. **si**
- 14. **si**
- 15. **no**
- 16. **no**
- 17. **si**
- 18. **no**
- 19. **no**
- 20. **si**