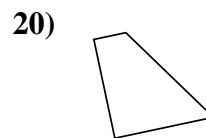
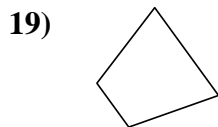
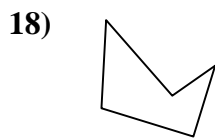
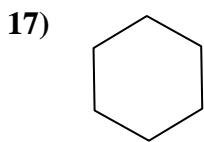
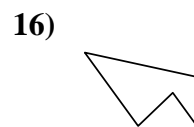
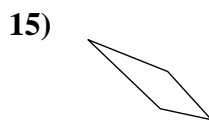
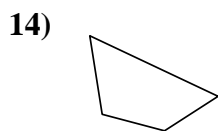
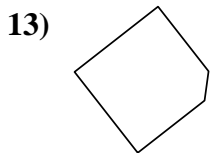
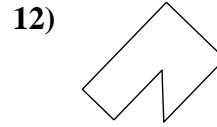
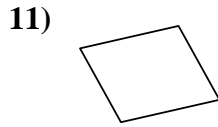
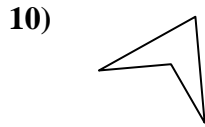
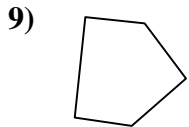
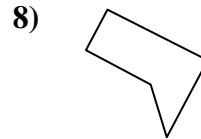
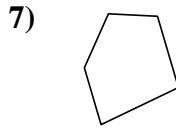
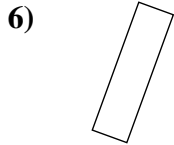
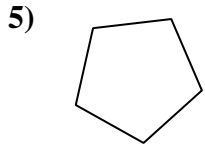
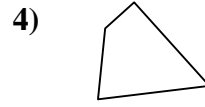
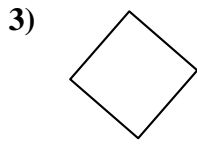
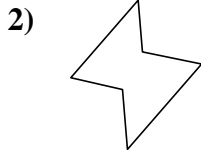
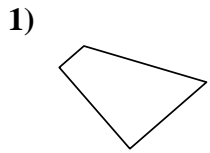




Determinar si la forma mostrada es un cuadrilátero (si) o no (no).

Respuestas

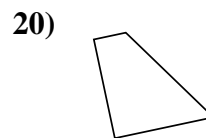
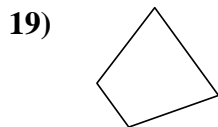
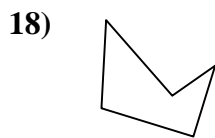
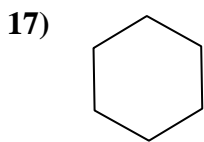
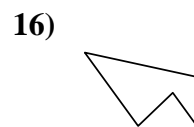
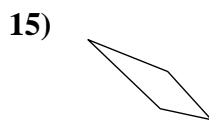
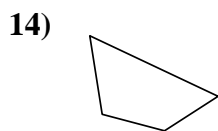
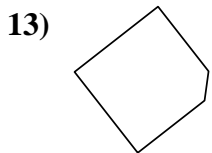
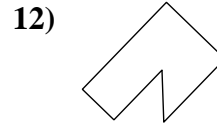

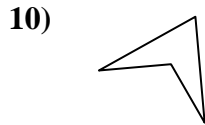
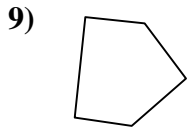
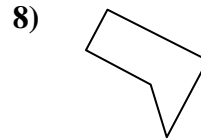
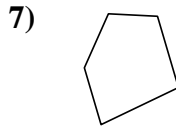
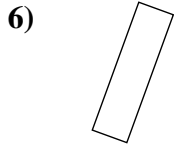
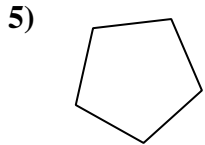
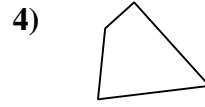
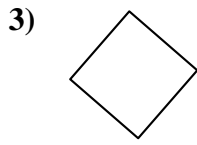
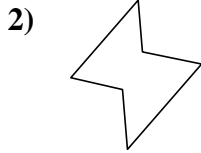
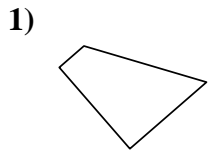


- 1. _____
- 2. _____
- 3. _____
- 4. _____
- 5. _____
- 6. _____
- 7. _____
- 8. _____
- 9. _____
- 10. _____
- 11. _____
- 12. _____
- 13. _____
- 14. _____
- 15. _____
- 16. _____
- 17. _____
- 18. _____
- 19. _____
- 20. _____



Determinar si la forma mostrada es un cuadrilátero (si) o no (no).

Respuestas



1. si

2. no

3. si

4. si

5. no

6. si

7. no

8. no

9. no

10. si

11. si

12. no

13. no

14. si

15. si

16. no

17. no

18. no

19. si

20. si