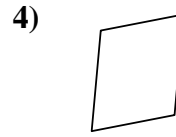
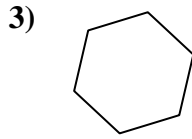
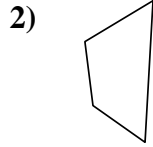
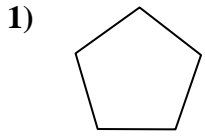




Determinar si la forma mostrada es un cuadrilátero (si) o no (no).

Respuestas

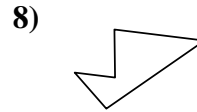
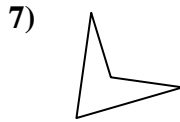
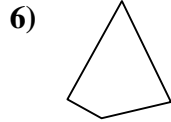
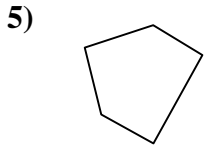


1. _____

2. _____

3. _____

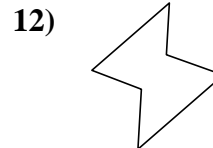
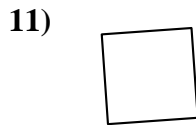
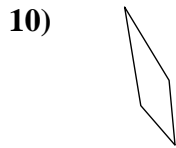
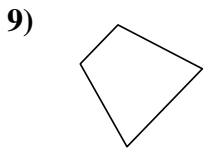
4. _____



5. _____

6. _____

7. _____

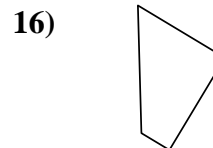
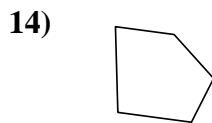
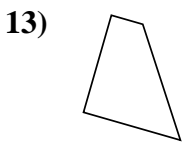


8. _____

9. _____

10. _____

11. _____

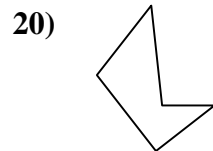
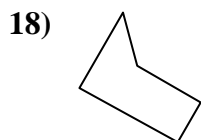
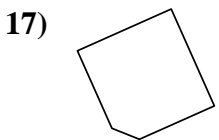


12. _____

13. _____

14. _____

15. _____



16. _____

17. _____

18. _____

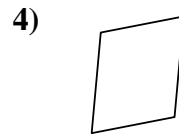
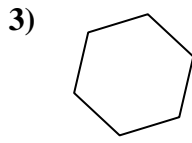
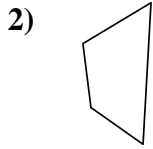
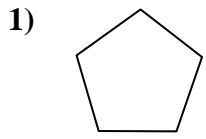
19. _____

20. _____



Determinar si la forma mostrada es un cuadrilátero (si) o no (no).

Respuestas

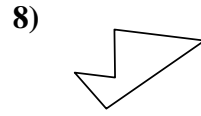
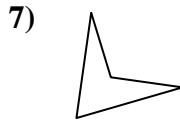
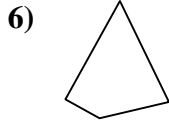
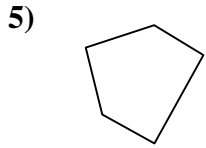


1. no

2. si

3. no

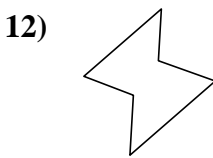
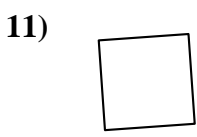
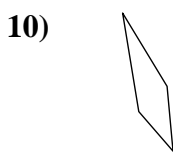
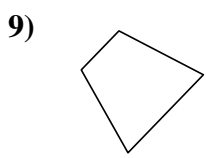
4. si



5. no

6. si

7. si

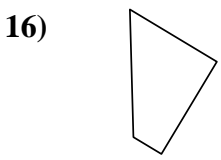

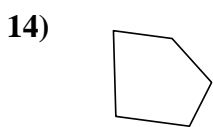
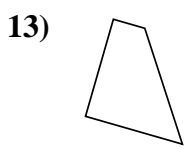


8. no

9. si

10. si

11. si

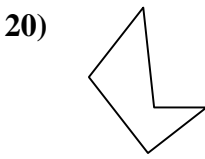
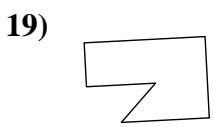
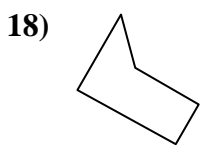
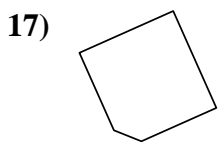


12. no

13. si

14. no

15. si



16. si

17. no

18. no

19. no

20. no