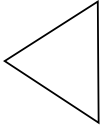





Determinar si el triángulo mostrado es un triángulo recto (sí) o no (no).

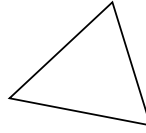
1)



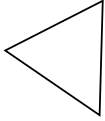
2)



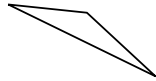
3)



4)




5)




6)



7)



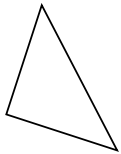
8)



9)



10)



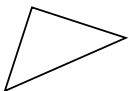
11)



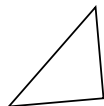
12)



13)



14)



15)



Respuestas

1. _____

2. _____

3. _____

4. _____

5. _____

6. _____

7. _____

8. _____

9. _____

10. _____

11. _____

12. _____

13. _____

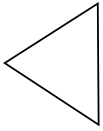
14. _____

15. _____




Determinar si el triángulo mostrado es un triángulo recto (sí) o no (no).

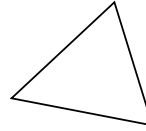
1)



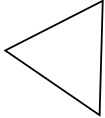
2)



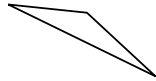
3)



4)




5)




6)



7)



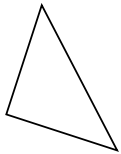
8)



9)



10)



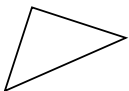
11)



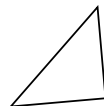
12)



13)



14)



15)



Respuestas

1. no

2. no

3. no

4. no

5. no

6. si

7. no

8. no

9. no

10. si

11. no

12. no

13. si

14. si

15. si